


THE WHOLE EARTH GEOGRAPHY BOOK



Anthony D. Fredericks

*Illustrated by
Rebecca N. Fredericks*

 GOOD YEAR BOOKS

To Dave Dunn
For early mornings filled with hot chocolate, good
conversation, and a puzzle or two!

♥ GOOD YEAR BOOKS

are available for most basic curriculum subjects plus many enrichment
areas. For more Good Year Books, contact your local bookseller or
educational dealer. For a complete catalog with information about other
Good Year Books, please write to:

Good Year Books

A Division of Social Studies School Service
10200 Jefferson Boulevard
Culver City, CA 90232-0802
www.goodyearbooks.com
(800) 421-4246

Copyright © 1990 Good Year Books
All Rights Reserved.
Printed in the United States of America.

ISBN 978-1-59647-349-2
Previous ISBN 0-673-38639-2

This publication is protected by copyright and permissions should
be obtained from the publisher prior to any prohibited reproduction,
storage in a retrieval system, or transmission in any form or by any
means, electronic, mechanical, photocopying, recording, or likewise.
Only portions of this book intended for classroom use may be
reproduced without permission in writing from the publisher. For
information regarding permission(s), write to Rights and Permissions
Department.

Contents

Introduction	v
Daily Problems	
U.S. Geography	1
Map and Globe Skills	11
World Geography	21
Extended Challenges	31
Answer Key	49



Introduction

Since our earliest times, we human beings have been fascinated with our environment, excited by what might lie just over the horizon, and thrilled by the forms and functions of the planet we inhabit. Today we face a world that seems to be shrinking, because of advanced transportation and communication technology. So it is imperative that students understand and appreciate the interplay of human beings with locations, regions, countries, and continents both near and far. *The Whole Earth Geography Book* is designed to help students use their geography knowledge in real-life situations and explorations.

The Problem-Solving Approach

This book emphasizes problem-solving activities in which students can use higher-level thinking skills together with basic geographical facts. Students too often are given piles of factual data but little opportunity to think through various situations, formulate opinions, justify their responses, or interact with their classmates. The activities in this book challenge students by stimulating them to move beyond rote memorization of facts, into developing complex thought and making personal discoveries. Here is a sample problem:

In a list of the five largest states, which of the following would not belong?

salaka anoiairflc setax rekwnoy

Several skills are necessary to solve this problem:

1. The student must rearrange the letters in each word in the proper sequence. (language arts, spelling) Note that, throughout the book, two-word names are treated as one name with no space between.
2. The student must obtain information on the relative sizes of various states. (atlas, encyclopedia)
3. The student must identify the five largest states and decide which of the states in the problem would not be included on that list. (problem solving, critical thinking)

This book presents a collection of activities, in a stimulating and fun format, that encourages students to actively process geo-

graphical knowledge. Intended for students in Grades 4 to 6, the book is also appropriate for gifted pupils in the lower grades.

Content Categories

The activities and information in this book are presented in three different categories — U.S. Geography, Map and Globe Skills, and World Geography:

1. U.S. Geography

The mountain ranges and rivers that crisscross our country, the states and their relationship to one another, and the influence of landforms on people and on what people do comprise this section of the book. Understanding the United States — its similarities and its divergence — make a fascinating subject for students to pursue. Appreciating the country they live in will be a valuable part of these activities for your students.

2. Map and Globe Skills

Meridians, time lines, boundaries, and poles are just a few of the topics covered in this section. Here students are provided with meaningful activities and real-life problems to solve as they discover more about the pictures, diagrams, and scales that represent the world we inhabit. Seeking answers to practical challenges gives students many experiences in discovering the functions and purposes of maps and globes.

3. World Geography

Hardly a day goes by that we are not reminded of events taking place in other parts of the world. Headlines from the Middle East, Asia, Central America, and Africa comprise a large portion of the news we get each day. Understanding where these countries are and how they relate to one another is a constant, exciting challenge. This section provides students with a host of possibilities for comprehending and appreciating world geography.

The data presented within these activities have been checked against many social studies texts normally used in the intermediate grades. So the data represent a cross section of information commonly given within each of the three major categories. Students thus have many opportunities to use prior knowledge with problem-solving skills to work out appropriate responses.

Daily Problems and Extended Challenges

The activities in this book are organized into two groups — Daily Problems and Extended Challenges.

Daily Problems

The book contains 192 Daily Problems — enough for every day of the school year. There are 64 problems in U.S. Geography, 64 in Map and Globe Skills, and 64 in World Geography. Initially,

you may wish to remove these pages from the book, paste them on oaktag, laminate them, and cut them apart into cards. Arrange the cards in a file box in sequential order or randomly. The problems can be used in one or more of the following ways:

1. When students arrive in the morning, or during a few moments at the end of the day, ask them to each select a card at random and work on the listed problem. Personal charts can be initiated and individually maintained to record problems solved by each pupil.

2. Depending on the structure of your social studies text, you may wish to have students work in one subject area (U.S. Geography, Map and Globe Skills, or World Geography) until most of or all the problems in that section have been solved. Students may then move on to another section.

3. Post one card on the bulletin board for all students to solve during their free time.

4. Have students work in pairs, exchanging ideas and working together toward a mutual solution. This technique is particularly appropriate for below-level students.

5. Assign one card per day per student as a homework assignment.

Extended Challenges

The Extended Challenges require long-term investigations by students. These pages are designed to challenge students in assembling data, interpreting facts, organizing thoughts, and processing information. Students will need to use various types of reference materials, such as encyclopedias, globes, charts, and maps, to solve the problems successfully. You may wish to post an Extended Challenge on the bulletin board at the beginning of the week and provide multiple opportunities for students, either individually or in groups, to complete the page. These challenges can be used as homework assignments, too. However you plan to use these worksheets, it will be important for you to plan some time to discuss and share students' findings.

A word of caution is in order. Both Daily Problems and Extended Challenges are designed as *reinforcing* activities, and are not intended for the initial learning of geographical information. Both kinds of activities are most appropriate as a follow-up to the skills and concepts traditionally taught via your social studies text. All these activities can be used to strengthen and promote important ideas enumerated in the text. Thus they serve as a valuable adjunct to the entire social studies curriculum.

Although these activities are designed to enhance and extend your social studies curriculum, you should also encourage students to create similar problems and challenges for their classmates. This type of activity promotes the concept of active participation and stimulates a "hands-on" approach to the mastery of geographical concepts. Student involvement in designing other activities makes the study of geography excit-

ing and dynamic. In turn, students are motivated to learn more about their country and their world.

These activities have been formulated for use in a variety of classrooms and a host of learning situations. You can use them as an adjunct to the social studies curriculum or as a reinforcement tool for vital concepts, and you are encouraged to use them in individual, small-group, or whole-class instructional situations. You are welcome to use the activities in whatever sequence you feel most appropriate. These problems and challenges offer you many opportunities to “energize” geography for your entire class.

Answers to both Daily Problems and Extended Challenges are presented at the end of the book. For some of the Extended Challenges, potential solutions are offered, because some answers depend on students’ background and experience and on the changing nature of the world. When students’ answers differ in some respect from those provided in the answer section, plan time to discuss students’ rationale and reasoning. You may need to consult current maps and news sources to verify and/or confirm some responses. Helping students understand that geography is not a static subject is an important by-product of working with this book.

Daily Problems

★ U.S. Geography Cards 1–64



★ U.S. Geography 1

Which of the following states does *not* touch California?

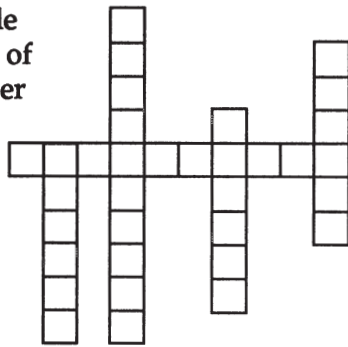
goneor niaraoz haut deanav

★ U.S. Geography 2

If you were in New Orleans and were facing west, what body of water would be on your left side?

★ U.S. Geography 3

Fill in the puzzle with the names of states that border the Pacific Ocean.



★ U.S. Geography 4

In a list of the five largest states, which of the following would *not* belong?


salaka anoiairflc setax rekwnoy

★ U.S. Geography 5

Which three states lie completely above 45°N?

★ U.S. Geography 6

If Cynthia drives from the capital of North Dakota direct to the capital of Washington, how many states will she pass through?




★ U.S. Geography 7

The fiftieth state has a characteristic shared by no other state. What is it?

★ U.S. Geography 8

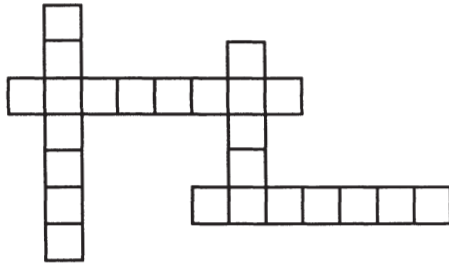
Fill in the puzzle with the names of the capitals of southern states.



★ U.S. Geography

9

Fill in the puzzle with the names of states through which the Rocky Mountains run.



★ U.S. Geography

10

Which of the following states are in the Northeast?

netrovnm hodai naemi nakssa

★ U.S. Geography

11

Henry left Cheyenne, Wyoming, and traveled 200 miles due east. He then traveled 200 miles due south. What state was he in then?

★ U.S. Geography

12

The largest of the Great Lakes touches three states. What are the names of those states?



★ U.S. Geography

13


Which of the following is an abbreviation for a state located in the Southwest?

MN PA AZ AL NC

★ U.S. Geography

14

Fill in the puzzle with the names of states that have the Mississippi River as part of their borders.



★ U.S. Geography

15

I am the state with the largest area and the smallest population. Who am I?

★ U.S. Geography

16


Glenda and her family are traveling through a New England state known for its potatoes. What state are they visiting?

★ U.S. Geography 17

I am the only state that does *not* have counties. Who am I?

★ U.S. Geography 18

Fill in the puzzle with the names of states through which the Continental Divide passes.



★ U.S. Geography 19

The only point in the United States where four states meet is known as _____.

★ U.S. Geography 20

The Colorado River passes through me. The Grand Canyon is within my borders. Mexico is my southern neighbor. What state am I?

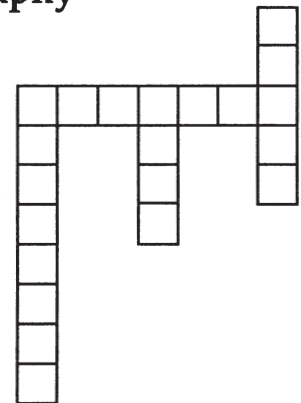
★ U.S. Geography 21

Carol traveled the length of the Rio Grande River. How many states does the river touch?



★ U.S. Geography 22

Fill in the puzzle with the names of states beginning with the letter *I*.




★ U.S. Geography 23

I am the only state split in two by a body of water. Who am I?

★ U.S. Geography 24

The Olympic Mountains, the Columbia River, and the Cascade Range are all part of my geography. What state am I?



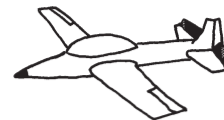
★ U.S. Geography 25

Put a T in front of each true statement and an F in front of each false statement.

- _____ Chicago is the state capital of Illinois.
- _____ The Missouri River forms part of the border of Kansas.
- _____ Mt. Whitney is the highest mountain in the United States.
- _____ New Hampshire is next to a foreign country.

★ U.S. Geography 26

Taj lives in the largest city in northern California. His cousin Angela lives in a midwestern state, the capital of which is the last name of a U.S. president. If Taj flies directly to his cousin's home, which states will he pass over?



★ U.S. Geography 27

Which of the following deserts is in the United States?

- Atacama
- Mojave
- Sahara
- Gobi

★ U.S. Geography 28

Match the following by drawing lines from the items on the left to the corresponding items on the right.

- | | |
|-------|------------|
| state | Atlanta |
| city | Ohio |
| | New Jersey |
| | Helena |
| | Boston |

★ U.S. Geography 29

Match the following by drawing lines from the items on the left to the corresponding items on the right.

- | | |
|-----------------|------------|
| Great Salt Lake | Arizona |
| Death Valley | California |
| Grand Canyon | Idaho |
| Snake River | Utah |

★ U.S. Geography 30

I am the only national park in the state that has Santa Fe as its capital. Who am I?

★ U.S. Geography 31

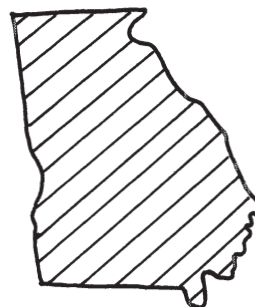
Carrie lives in a state that has a foreign country, a famous river, and the most populous U.S. state as parts of its border. What is the capital of Carrie's state?



★ U.S. Geography 32

Which of the following is *not* a city in Georgia?

- Athens
- Miami
- Atlanta
- Columbus



★ U.S. Geography 33

The geographical center of the United States is located in which state?

★ U.S. Geography 34

The Mississippi River forms part of the border of which states?

★ U.S. Geography 35

Which of the following states has a desert?

CA MN FL WA PA

★ U.S. Geography 36

Match the following by drawing lines from the items on the left to their corresponding items on the right.

Northeast
Southeast
Midwest
West

Arkansas
Vermont
Oregon
Illinois

★ U.S. Geography 37

I am the lowest place in the United States. Which state is located directly east of me?

★ U.S. Geography 38

Which of the following states has the Atlantic Ocean as part of its border?

angiirv torvnme nghiaicm aaaambl



★ U.S. Geography 39

Which two states have four 90° corners?

★ U.S. Geography 40

Molly lives in a state that has a large river, a great lake, and the "Dairy State" as parts of its border. What is the largest city in Molly's state?


★ U.S. Geography 41

Which of the following states does *not* have Canada as part of its border?

oaihd aadinin torvnmee aanmnto

★ U.S. Geography 42

Fill in the puzzle with the names of the five largest states.



★ U.S. Geography 43

The Missouri River forms part of my boundary. The Mississippi River forms another part of my boundary. South Dakota forms another part of my boundary. What state am I?

★ U.S. Geography 44

Which states have compass terms in their names?



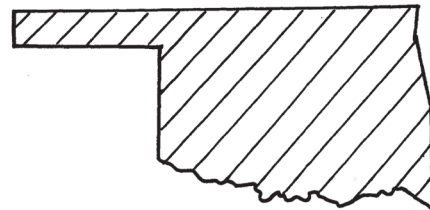
★ U.S. Geography 45

This state borders a foreign country, but does *not* border another state. Which state is it?

★ U.S. Geography 46

Which of the following states does *not* have Oklahoma as part of its border?

sxtae iusirosm ssaank giownmy



★ U.S. Geography 47

Hawaii is to island as Florida is to _____.
North is to Carolina as *West* is to _____.
 Grand Canyon is to Arizona as Yellowstone is to _____.

★ U.S. Geography 48

Tara lives in a state that has the same name as the longest river in the United States. What is the capital of the state directly to the east of Tara's state?

★ U.S. Geography 49

Put a T in front of each true statement and an F in front of each false statement.

- _____ Nome, Alaska, is further west than Honolulu, Hawaii
- _____ Texas is larger than New York.
- _____ The Mississippi River begins in Minnesota.
- _____ Augusta is a state capital.

★ U.S. Geography 50

Which of the following states is *not* touched by one of the Great Lakes?

- aadinin nghimcia ssakna ohoi

★ U.S. Geography 51

Which of the following is (are) *not* true about Chicago?

- A. It is further west than Kansas City.
- B. It is located on one of the Great Lakes.
- C. It is the capital of Illinois.
- D. It is further north than Washington, DC.

★ U.S. Geography 52

Two state capitals are located on the Mississippi River. They are the capitals of which two states?

★ U.S. Geography 53

Nathan lives in a state that has four 90° corners, the Continental Divide, and the beginning of the Rio Grande River. What is the capital of that state?

★ U.S. Geography 54

Which states border the Gulf of Mexico?



★ U.S. Geography 55

Which of the following words is *not* used in the name of a state?

- hrnot uhtso sate ewts

★ U.S. Geography 56

Match the following by drawing lines from the items on the left to their corresponding items on the right.


- state Wisconsin
- city Harrisburg
- Kentucky
- Missouri
- Denver

★ U.S. Geography 57

Carson City is to Nevada as Memphis is to _____.
 Great Salt Lake is to Utah as Everglades is to _____.
 Golden is to California as Keystone is to _____.

★ U.S. Geography 58

Fill in the puzzle with the names of big rivers of the United States.



★ U.S. Geography 59

Pedro lives in a state whose borders include a Great Lake, a midwestern state, a southern state, and an eastern state. What is the largest city in the state directly to the north of Pedro's state?

★ U.S. Geography 60


Match the following by drawing lines from the items on the left to their corresponding items on the right.

- | | |
|--------------|----------------|
| shoreline | Arkansas |
| no shoreline | Texas |
| | Virginia |
| | South Carolina |
| | Tennessee |

★ U.S. Geography 61


Which of the following states is *not* in the Rocky Mountain region?

- dohai oaoolrd aanmotn ssakna



★ U.S. Geography 62

The lowest point in the United States is 80 miles from the highest point in the continental United States. Which state are they both in?



★ U.S. Geography 63

Which of these cities is in the Texas Panhandle?

- Amarillo
 Forth Worth
 El Paso
 Corpus Christi

★ U.S. Geography 64

Match the following by drawing lines from the items on the left to their corresponding items on the right.

- | | |
|----------|-------------|
| Pierre | N. Carolina |
| Columbia | N. Dakota |
| Bismarck | S. Carolina |
| Raleigh | S. Dakota |

Daily Problems

■ Map and Globe Skills Cards 65–128



■ Map & Globe Skills 65

If the scale on a map indicates that one inch equals 2 1/2 miles, how many miles would be indicated by eleven and one-half inches?


■ Map & Globe Skills 66

Which of the following indicate(s) longitude?

37°W 45°N 81°E 9°S

■ Map & Globe Skills 67

Write the abbreviations for each of the eight compass points; how many times did you use the letter W?




■ Map & Globe Skills 68

If you stood in Key West, Florida and faced east, what country would be to your right?


■ Map & Globe Skills 69

The Tropic of Capricorn passes through the countries named here, among others:



■ Map & Globe Skills 70

Harold sees this symbol on a map. What does it indicate?



■ Map & Globe Skills 71

How tall is a tree that is drawn to a scale of one inch to 32 feet if the height of the tree in the drawing is six and a quarter inches?

■ Map & Globe Skills 72

What is wrong with the following coordinates?

18°W/92°N

■ Map & Globe Skills 73

In which direction would you travel to go from Austin, Texas, to Little Rock, Arkansas?

■ Map & Globe Skills 74

The line of latitude numbered 0° is also known as _____.

■ Map & Globe Skills 75

What compass point is missing from the following list?

SW N SE E S NW W

■ Map & Globe Skills 76

If it is 8 A.M. in Boston, what time is it in Honolulu?



■ Map & Globe Skills 77

I am an imaginary line that passes through a town in England, one sea, and two continents. I am also known as 0° longitude. What's my other name?

■ Map & Globe Skills 78

Through which oceans does the Equator pass?

■ Map & Globe Skills 79

Which of the following cities is *not* a capital city located south of the Tropic of Cancer?

gakobkn tarperai toboag henwide

■ Map & Globe Skills 80

What direction would you take in traveling from the capital of Italy to the largest city in England?



■ Map & Globe Skills 81

What direction would you take to go from the capital of Norway to the capital of Switzerland?

■ Map & Globe Skills 82

I am the state closest to the Tropic of Cancer. Who am I?

■ Map & Globe Skills 83

Which of the following cities is the furthest west?

Los Angeles Reno San Diego Las Vegas

■ Map & Globe Skills 84

The Arctic Circle is north of all the following latitudes *except* one. Which one?

65° 69° 59° 54°


■ Map & Globe Skills 85

Which of these pairs represents the longest distance?

Honolulu - San Francisco
San Francisco - New York
New York - London
London - Oslo

■ Map & Globe Skills 86

What does this symbol indicate on a map?



■ Map & Globe Skills 87

Which of the following is not a body of water?

lguf msshitu asirtt enaoc

■ Map & Globe Skills 88

Which ocean is located south of 66½°S?



■ Map & Globe Skills

89

If it is 1 A.M. in Washington, D.C., what time is it in Honolulu, Hawaii?

■ Map & Globe Skills

90

What does the following symbol indicate on a map?



■ Map & Globe Skills

91

Match the following by drawing lines from terms on the left to the matching definitions on the right.

- | | |
|----------------|-------------------|
| Meridian | line of latitude |
| Parallel | 0° longitude |
| Equator | line of longitude |
| Prime Meridian | 0° latitude |

■ Map & Globe Skills

92

What continent is located in the Northern, Southern, *and* Western hemispheres?

■ Map & Globe Skills

93

On a map, which of the following represents a park?



A.



B.



C.



D.

■ Map & Globe Skills

94

Which of the following is closest to Lima, Peru?

- Arctic Circle
- Tropic of Cancer
- Equator
- Tropic of Capricorn

■ Map & Globe Skills

95

Which states are located north of 50°N latitude?

■ Map & Globe Skills

96

When it is 1 P.M. in the largest city in France, what time is it in the westernmost city in Peru?

■ Map & Globe Skills 97

Match the following by drawing lines from the items on the left to the corresponding items on the right.

- | | |
|------------|----------|
| hemisphere | Asia |
| continent | Atlantic |
| country | Kenya |
| ocean | western |

■ Map & Globe Skills 98

If two cities are 1,250 miles apart, and the scale on a map is one inch = 500 miles, how far apart (in inches) would these cities be on the map?

■ Map & Globe Skills 99

Match the following by drawing lines from the items on the left to the corresponding items on the right.

- | | |
|-----------|-------------------------|
| latitude | Equator |
| longitude | Arctic Circle |
| | Prime Meridian |
| | International Date Line |

■ Map & Globe Skills 100


Which of the following cities is the furthest east?

- Miami, FL
- Philadelphia, PA
- Atlanta, GA
- Washington, DC

■ Map & Globe Skills 101

In the following cross section, which landform is *not* represented?

- valley
- plateau
- mountain
- hills



■ Map & Globe Skills 102


Longitude is to north-south as _____ is to east-west.

Mountain is to hill as _____ is to sea.

North is to south as _____ is to inland.

■ Map & Globe Skills 103

Which oceans are located in all four hemispheres?



■ Map & Globe Skills 104

The Tropic of Capricorn does *not* pass through which of the following countries?

- eichl
- aingaretn
- lzbai
- yuuuagr

Map & Globe Skills 105

Longitude 120°W forms the boundary for two states. Which states are they?

Map & Globe Skills 106

Karen lives in Seattle, Washington, and wants to travel by plane to Miami, Florida, via New York and Atlanta. Which direction will the plane travel on the second leg of the trip?

Map & Globe Skills 107

Which of the following landforms has the lowest elevation?

teersd lilh nanomuti ueapatl

Map & Globe Skills 108

Put a T in front of each true statement and an F in front of each false statement.

- ___ Australia is both a country and a continent.
- ___ The Equator runs east and west.
- ___ South America is located completely within the Southern Hemisphere.
- ___ The Arctic Circle passes through part of the United States.

Map & Globe Skills 109

When it is 3 P.M. in Oklahoma City, in how many minutes will it be 12 noon in Honolulu?



Map & Globe Skills 110

Which U.S. state has the 45° latitude line as a northern boundary?

Map & Globe Skills 111

Caribbean is to Sea as Hudson is to _____.
 Cape Horn is to South America as Cape of Good Hope is to _____.
 Statute mile is to nautical mile as land is to _____.




Map & Globe Skills 112

Which of the following symbols indicates a state boundary?

- A.
- B.
- C.
- D.

■ Map & Globe Skills 113

Fill in the puzzle with the names of places through which the Prime Meridian passes.



■ Map & Globe Skills 114

NW is to Northwest as _____ is to southwest.

Southeast is to northwest as _____ is to northeast.

45° is to northwest as _____ is to west.

■ Map & Globe Skills 115

In what direction would you travel to go from the capital of Canada to the capital of the United States?

■ Map & Globe Skills 116

Which ocean is located completely within the Northern Hemisphere?

■ Map & Globe Skills 117

Which of the following is (are) false?

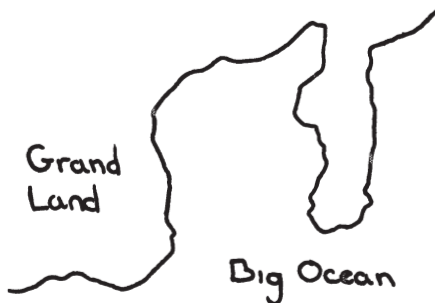
- A. The North Pole is at 90° latitude.
- B. The Tropic of Cancer is north of the Arctic Circle.
- C. The Equator is a line of latitude.
- D. The Prime Meridian is a line of latitude that passes through Greenwich, England.

■ Map & Globe Skills 118

Which countries would you fly over if you traveled by plane directly from Bombay to Tokyo?

■ Map & Globe Skills 119

What part of this drawing indicates a peninsula?



■ Map & Globe Skills 120

How far is the largest city in Massachusetts from the state capital of Kansas?

■ Map & Globe Skills 121

Which of the following countries is not in the Eastern Hemisphere?

dagenln adiin arbmua uerp

■ Map & Globe Skills 122

Match the following by drawing lines from the items on the left to the corresponding items on the right.

Tropic of Capricorn	23 1/2°S
Tropic of Cancer	66 1/2°N
Antarctic Circle	66 1/2°S
Arctic Circle	23 1/2°N



■ Map & Globe Skills 123

Put a T in front of each true statement and an F in front of each false statement.

- _____ There are seven continents in the world.
- _____ The Prime Meridian is a line of latitude.
- _____ The Equator passes through the United States.
- _____ The North Pole is at 100°N latitude.

■ Map & Globe Skills 124

When it is 9 A.M. in the capital of Brazil, what time is it in the capital of Australia?

■ Map & Globe Skills 125

The scale on a map is one centimeter = 320 km. How many *miles* apart are two cities if their map distance is nine centimeters?

■ Map & Globe Skills 126

Longitude is to latitude as meridian is to _____.

Arctic is to Antarctic as north is to _____.

75°E is to 105°W as 165°E is to _____.

■ Map & Globe Skills 127

Which of the following longitudes does not pass through the Indian Ocean?

97° 51° 82° 19° 70°

■ Map & Globe Skills 128

Which oceans would you cross in sailing east from Buenos Aires to Perth?



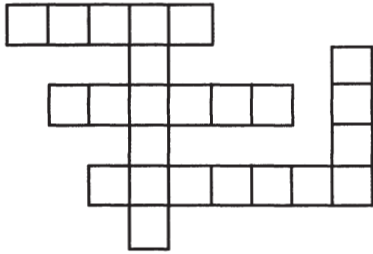
Daily Problems

● World Geography Cards 129–192



● **World Geography** 129

Fill in the puzzle with the names of countries in the Middle East.



● **World Geography** 130

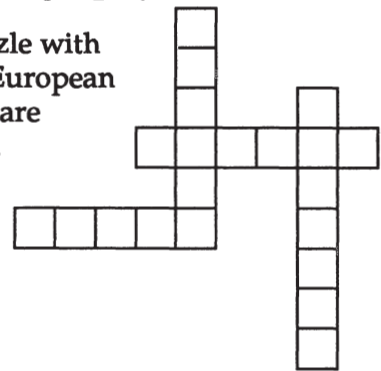
Jerry wishes to travel to an island nation that is part of Asia. Its capital has more people than any other country in Asia. What is the name of the country?

● **World Geography** 131

I am the largest inland sea on the Asian continent. Who am I?

● **World Geography** 132

Fill in the puzzle with the names of European countries that are on peninsulas.



● **World Geography** 133

Maria wants to travel from the capital of Rumania to the largest city in Spain. What form of transportation would be the most direct?

atnr nalep cra psih

● **World Geography** 134

I am a European country surrounded by water. I am close to the Arctic Circle. Who am I?




● **World Geography** 135

Indira sails east through the Strait of Gibraltar. What body of water is she entering?

● **World Geography** 136

Fill in the puzzle with the names of South American capital cities.



● World Geography 137

Which two seas form part of the border of Egypt?



● World Geography 138

Mongolia and India are countries on my border. I am famous for my Great Wall and the Yangtze River. Rice is a popular crop within my borders. Who am I?

● World Geography 139

Which of the following countries does *not* have Argentina as part of its border?

reup liche voiliab guyruau

● World Geography 140


I am bordered by the Coral Sea and the Indian and Pacific oceans. New Zealand and Indonesia are my neighbors. Who am I?

● World Geography 141

What is the only Central American country whose name begins with a vowel?

● World Geography 142

What does this symbol indicate on a map?



● World Geography 143

Which two South American countries do *not* have an ocean as part of their border?

● World Geography 144

The largest river in the world has its mouth within my borders. Who am I?

● **World Geography** 145

Which of the following European countries does *not* border the Mediterranean Sea?

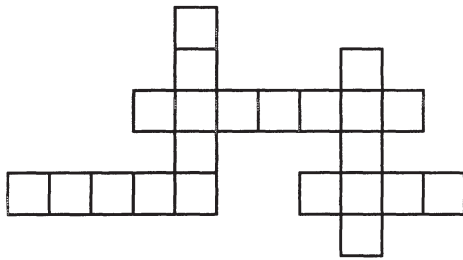
laiyt cafner naips taisaur

● **World Geography** 146

Stand on me and everywhere you look is south. What am I?


● **World Geography** 147

Fill in the following puzzle with the names of Asian countries.



● **World Geography** 148

Which South American country has the driest desert in the world?



● **World Geography** 149

I am sometimes called the "Island Continent." Who am I?

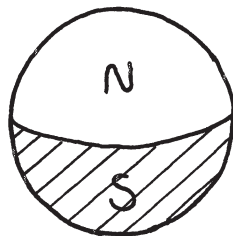
● **World Geography** 150

Which of the following European countries have capital cities on the coast?

asnip rutasai noldap dinlafn

● **World Geography** 151

Four continents begin with the letter *A* but only two are completely within the Southern Hemisphere. Which two are they?



● **World Geography** 152

Which continent is bordered by the Pacific, Indian, and Arctic oceans?

● **World Geography** 153

Which of these countries is *not* an island?

aubc npjaa daeinlc arkeo

● **World Geography** 154

Which of the following pairs have a sea between the paired countries?

Egypt and Saudi Arabia
India and Burma
Sweden and Finland
Iraq and Syria

● **World Geography** 155

Match the following by drawing lines from the terms on the left to the corresponding terms on the right.

North America	Costa Rica
Central America	Colombia
South America	Canada

● **World Geography** 156

I am an island nation located in Asia. Manila is my capital. Who am I?

● **World Geography** 157

Put a T in front of each true statement and an F in front of each false statement.

_____ The USSR is the largest continent.
_____ Sofia is the capital of Rumania.
_____ Mongolia has no coastline.
_____ Libya is located on the African continent.

● **World Geography** 158

What is the only Great Lake named for a Canadian province?

● **World Geography** 159

Fiji is located to the north of which country?



● **World Geography** 160

Which of the following rivers does *not* end in the Atlantic Ocean?

Amazon
Mississippi
Niger
Loire

● World Geography 161

I am a country that extends almost a thousand miles from north to south. I consist of two main islands and several smaller ones. I am located in the Southern Hemisphere. Who am I?



● World Geography 162

Which of the following is the world's second largest country?

- aihcn aaandc asrusi lzriba

● World Geography 163

What is the capital city of the country that has the Great Victoria Desert, the Great Dividing Range, and the Great Barrier Reef?

● World Geography 164

Which of the following South American capital cities is furthest west?

- Bogota
Sucre
Quito
Santiago



● World Geography 165

Which of the following capital cities is not in a European country?

- nluibd draidm setanh oiarc

● World Geography 166

On which continent would you find the Andes Mountains?



● World Geography 167

Match the following by drawing lines from the terms on the left to their corresponding terms on the right.

- Madrid Belgium
Brussels Austria
Sofia Bulgaria
Vienna Spain

● World Geography 168

Clarence lives in a country that has the Atlantic Ocean, the Mediterranean Sea, and the Rhine River as portions of its borders. What country is located due east of the capital of Clarence's country?

● World Geography 169

Which of the following countries has the Atlantic Ocean as part of its border?

Igtoprua njaap muabr arsaitu

● World Geography 170

I am the world's smallest country. I am also a city. Who am I?

● World Geography 171

Match the following by drawing a line from the items on the left to the corresponding items on the right.

Country
Continent

USSR
Asia
Antarctica
S. America
New Zealand

● World Geography 172

One South American country has two capitals. What are the names of those two cities?



● World Geography 173

Italy is to peninsula as Australia is to _____.
Amazon is to River as Mediterranean is to _____.
Alps are to mountains as Sahara is to _____.

● World Geography 174

Which of the following countries is *not* a neighbor of Australia?

New Zealand
Indonesia
New Guinea
Korea

● World Geography 175

Which two oceans does the Panama Canal connect?



● World Geography 176

I am the smallest continent in the world. I am the only continent that is a single country. I am sometimes referred to as "The Land Down Under." Who am I?

● **World Geography** 177

The Nile River flows through all the following countries except one. Which one?

angdua tepgy nsaud aziabm

● **World Geography** 178

The largest inland sea is located in which country?

● **World Geography** 179

Which of the following countries is the largest (in square miles)?

India
Brazil
China
Australia

● **World Geography** 180

Marta lives in a country bordered by the Black Sea, the Danube River, and a country whose capital is Belgrade. What is the capital of the country to the north of Marta's country?

● **World Geography** 181

Put a T in front of each true statement and an F in front of each false statement.

- _____ Belize is a Central American country.
- _____ Sri Lanka is an island nation.
- _____ Japan's nearest neighbor is China.
- _____ The Falkland Islands lie off the coast of Argentina.

● **World Geography** 182

What is the capital of the country in which Mt. Everest is located?

● **World Geography** 183

Which of the following cities is *not* located in Central America?

Managua
Caracas
San Jose
San Salvador

● **World Geography** 184

Match the following by drawing lines from the terms on the left to their corresponding terms on the right.

sea	Persian
ocean	Mediterranean
bay	Indian
gulf	Hudson

● **World Geography** 185

The largest country in South America borders which ocean?

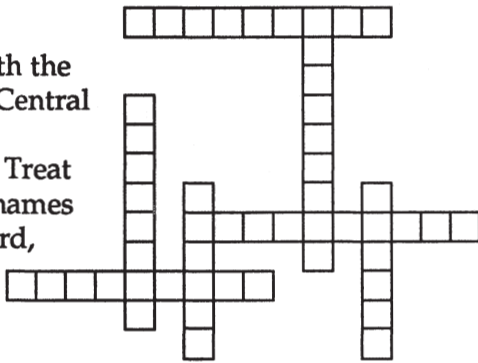
● **World Geography** 186

Which of the following cities is *not* located on the west coast of its respective country?

- Vancouver
- Perth
- Rome
- Buenos Aires

● **World Geography** 187

Fill in the puzzle with the names of Central American countries. Treat two-part names as one word, with no space between.



● **World Geography** 188

Which of the following South American countries does *not* have Bolivia as part of its border?

- uepr lzrbia auuuryg ecihl

● **World Geography** 189

Match the following items by drawing a line from the items on the left to the corresponding items on the right.

- | | |
|-----------|-----------|
| country | Panama |
| continent | Australia |
| | India |
| | Europe |
| | Africa |

● **World Geography** 190

Julio's father works in a country bordered by the Arabian Sea and the Bay of Bengal. What is the capital of the country on the north-western border of the country where Julio's father works?

● **World Geography** 191

Marie Byrd Land, Mt. Markham, and the Ross Ice Shelf can be found on which continent?

● **World Geography** 192

I am the largest country on the world's largest continent. Who am I?

Extended Challenges

Worksheets 1–15


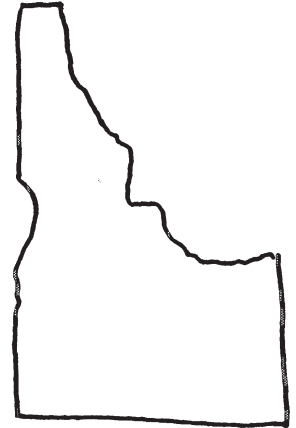
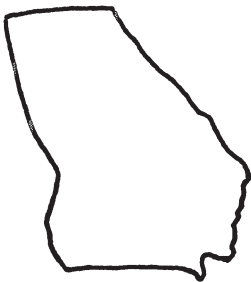



Extended Challenge 1

Name _____

Date _____

Identify the capital for each of the following states.



Extended Challenge 2

Name _____

Date _____

Identify an example of each landform, and place each one on the proper continent. One sample has been done for you.

Landform	Example	Continent
lake	Sahara	Australia
desert	Hudson	South America
peninsula	Alps	Antarctica
island	Eyre	Asia
bay	Amazon	North America
mountains	Palmer	Africa
river	Japan	Europe

Extended Challenge 3

Name _____

Date _____

Place a check mark after each country to show which hemisphere(s) it is in.

Hemispheres

	Eastern	Western	Northern	Southern
Turkey	✓		✓	
India				
Antarctica				
Uruguay				
Greenland				
Australia				
Mexico				
South Africa				
Japan				
Thailand				
Canada				
Bolivia				
New Zealand				
Chile				
Venezuela				

Extended Challenge 4

Name _____

Date _____

In the puzzle below, locate and circle the names of all the states that have a seacoast. The names will go down, across, or diagonally. One state with a seacoast is missing from the puzzle. Write its name on the line under the puzzle. Two-part names are spelled as one, with no space between parts.

R L C M I S S I S S I P P I H T G
N Q O I I G I H J M N B K N O N M
O N H M A I N Z W A V R M Y O G W
R K A L A S K A H R O S N G N X A
T C P W F I J F L Y U S E X E O S
H G A E J G N K W L L R W E W R H
C H D L V D E E N A O C H F J H I
A J E O I I N O X N U R A M E O N
R S L R R F W Q R D I P M T R D G
O S A Z G L O Z A G S B P M S E T
L J W A I O Q R W T I H S L E I O
I Y A V N R U V N K A A H C Y S N
N K R X I I D W P I N E I E A L G
A T E P A D D B B K A E R X D A V
D Y U Y I A L A B A M A E F U N R
Q C O N N E C T I C U T B L F D C
Z A C A S O U T H C A R O L I N A

The state with a seacoast not included in the puzzle above: _____

Extended Challenge 5

Name _____

Date _____

On the illustration below, label the following:

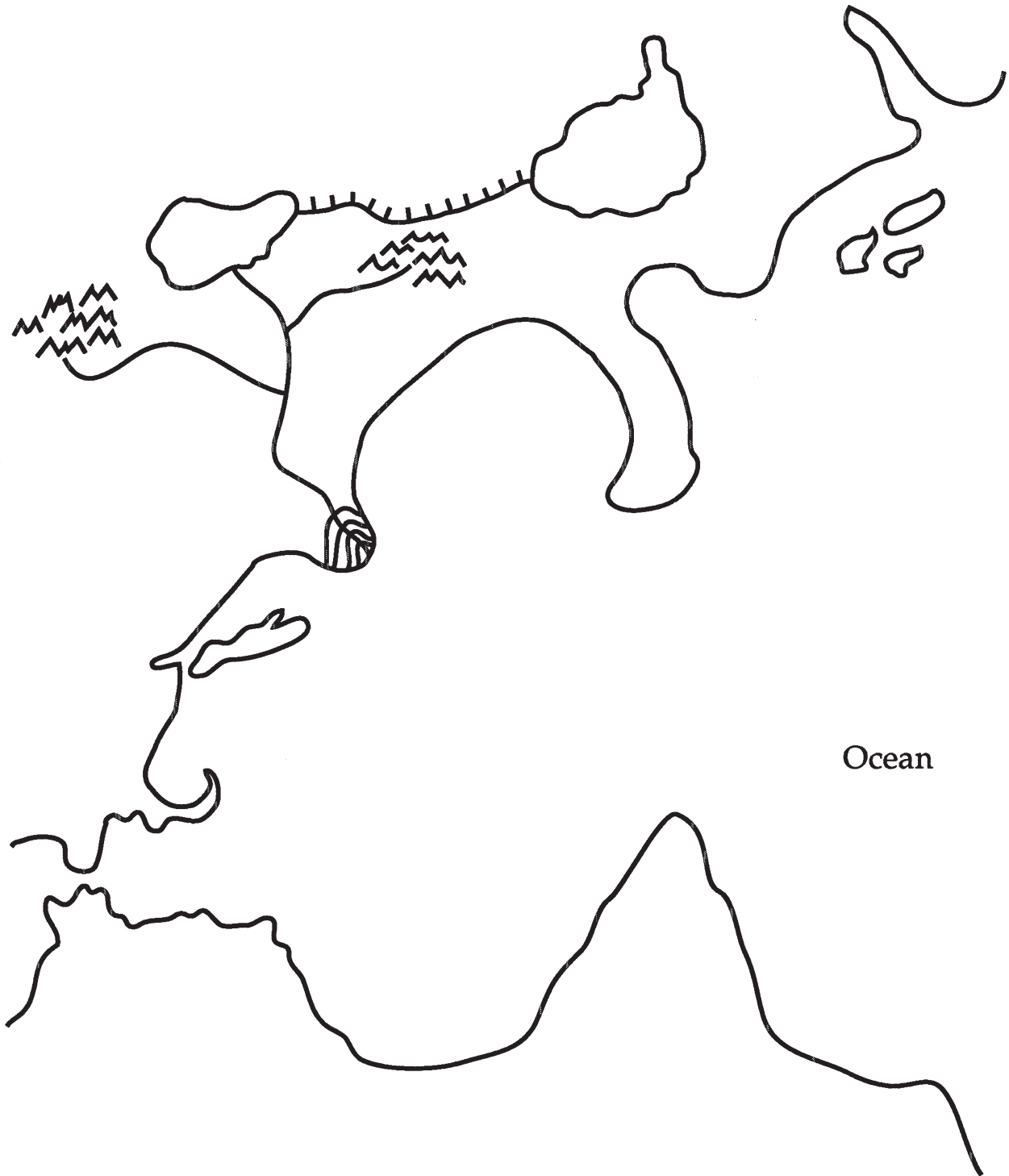
island
inlet
sea

peninsula
sound
river

tributary
strait
lake

delta
bay
cape

channel
gulf
canal



Extended Challenge 6

Name _____

Date _____

Put a letter from the column on the left in front of each city in the right column to indicate which of the east-west lines it is closest to.

A. Arctic Circle

B. Tropic of Cancer

C. Equator

D. Tropic of Capricorn

E. Antarctic Circle

_____ Addis Ababa

_____ Kampala

_____ Oslo

_____ Cairo

_____ Rio de Janeiro

_____ Singapore

_____ Tokyo

_____ Rangoon

_____ Brisbane

_____ Nome

_____ Taipei

_____ Tripoli

_____ Riyadh

_____ Helsinki

_____ Quito

_____ Reykjavik

_____ Pretoria

_____ Bogota

_____ Nassau

_____ Calcutta

Extended Challenge 7

Name _____

Date _____

Some of the following statements are true about South America, others are false. Identify those that are false, and rewrite them to make them correct.

- _____ 1. Bolivia, Paraguay, and Uruguay are the only inland countries.
- _____ 2. The Equator passes through three countries.
- _____ 3. The capital of Brazil is located on the Atlantic Ocean.
- _____ 4. From north to south, Chile is the longest country.
- _____ 5. The country closest to the Panama Canal is Colombia.
- _____ 6. The Amazon River begins in the Andes Mountains.
- _____ 7. The South American continent is bordered by an ocean and a sea.
- _____ 8. South America extends below the Tropic of Capricorn.
- _____ 9. Guyana is the smallest country.
- _____ 10. The Falkland Islands lie off the coast of Argentina.
- _____ 11. Much of Peru lies in the Andes Mountains.
- _____ 12. Suriname is located west of Venezuela.
- _____ 13. Montevideo is an Atlantic coast country.
- _____ 14. Argentina is split into two parts.
- _____ 15. Colombia, Brazil, and Peru each forms part of the border of Ecuador.


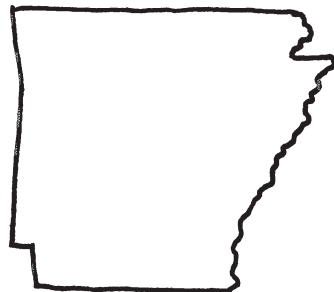
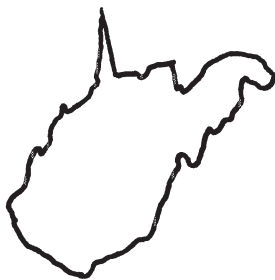
Extended Challenge 8

Name _____

Date _____

Draw a line from each of the states in the middle column to its capital in the left column, and then to its corresponding region in the right column. One sample has been done for you.

Capital	State	Region
Cheyenne	New Mexico	Northeast
Concord	West Virginia	Southeast
Juneau	Ohio	Midwest
Columbus	North Dakota	Mountain
Charleston	Montana	Pacific
Jackson	Mississippi	
Bismarck	Wisconsin	
Albany	Wyoming	
Little Rock	Oregon	
Santa Fe	Alaska	
Helena	New Hampshire	
Madison	New York	
Olympia	Arkansas	
Salem	Washington	



Extended Challenge 9

Name _____

Date _____

Complete the puzzle below by filling in the spaces with the names of lines, areas, or locations types of lines you would find on a map of the world. Treat multiple-word terms as one word, with no space between.

```

                L _ _ G _ _ _ _ _
              _ _ I _
    _ _ _ P _ _ _ _ _ N _ _ _
          _ _ _ _ _ E _ _ _ _ _
                S _ _ _ H _ _ _ _
              _ Q _ _ _ O _
          _ _ _ _ _ N _
                _ _ T _ C _ _ _ _ _
          _ _ _ _ _ H _ _ _
    _ _ T _ _ _ _ E
                M _ _ _ _ _
          _ _ _ A _ _ _ _ _ _ _ _
                P _ _ _ L _ _ _
    
```

Extended Challenge 10

Name _____

Date _____

The puzzle below contains the names of 32 European countries. The names go across, down, or diagonally. Circle each one in the puzzle. Two-word names are treated as one word, with no space between.

L	C	D	H	Q	A	E	A	S	T	G	E	R	M	A	N	Y	U
I	O	S	A	N	M	A	R	I	N	O	P	H	P	B	A	P	N
E	V	A	T	I	C	A	N	C	I	T	Y	P	E	U	N	C	I
C	U	N	E	T	H	E	R	L	A	N	D	S	A	L	D	O	T
H	C	F	K	B	C	Z	A	M	Q	Z	G	O	M	G	O	H	E
T	B	Z	F	E	C	E	N	O	O	H	U	N	G	A	R	Y	D
E	E	M	E	R	U	Y	W	N	C	N	R	W	G	R	R	L	K
N	L	R	V	C	A	U	S	T	R	I	A	U	B	I	A	U	I
S	G	D	F	T	H	G	F	Z	T	V	B	C	I	A	V	X	N
T	I	E	I	S	P	O	L	A	N	D	J	J	O	J	F	E	G
E	U	N	N	Y	A	S	S	Y	M	S	M	D	Y	L	D	M	D
I	M	M	L	T	L	L	N	L	E	X	A	S	C	E	N	B	O
N	I	A	A	X	B	A	P	X	O	J	L	X	W	Q	I	O	M
L	T	R	N	D	A	V	Y	O	D	V	T	S	Z	M	D	U	B
I	K	K	D	S	N	I	R	M	R	K	A	E	W	N	A	R	X
R	U	M	A	N	I	A	J	X	R	T	L	K	A	M	G	G	I
E	T	U	D	I	A	S	R	A	E	W	U	L	I	K	N	G	L
L	H	L	C	S	G	Q	P	W	V	F	E	G	G	A	Q	A	H
A	J	E	B	Y	F	F	R	A	N	C	E	T	A	O	Y	H	V
N	O	R	W	A	Y	Z	S	W	I	T	Z	E	R	L	A	N	D
D	W	E	S	T	G	E	R	M	A	N	Y	K	U	P	B	I	D

Extended Challenge 11

Name _____

Date _____

Match each river in the left column with the names of the states in the right column that have that river as part of their border.

A. Colorado River

_____ Indiana

B. Ohio River

_____ Nebraska

C. Missouri River

_____ California

D. Columbia River

_____ Oklahoma

E. Red River

_____ Iowa

F. Delaware River

_____ Ohio

_____ Washington

_____ Pennsylvania

_____ South Dakota

_____ West Virginia

_____ Kansas

_____ Nevada

_____ Arkansas

_____ New Jersey

_____ Oregon

_____ Texas

_____ Illinois

_____ New York

_____ Arizona

_____ Kentucky

Extended Challenge 12

Name _____

Date _____

Draw a line from each capital city (left column) to its country (middle column) and then to that country's continent (right column). One sample has been done for you.

Capital

Ottawa

Stockholm

Caracas

Beijing

Cairo

Rome

Lagos

Ankara

Helsinki

Quito

Riyadh

Lisbon

Dakar

Canberra

Brazzaville

Country

China

Canada

Egypt

Italy

Sweden

Portugal

Australia

Finland

Turkey

Venezuela

Nigeria

Congo

Senegal

Equador

Saudi Arabia

Continent

North America

Africa

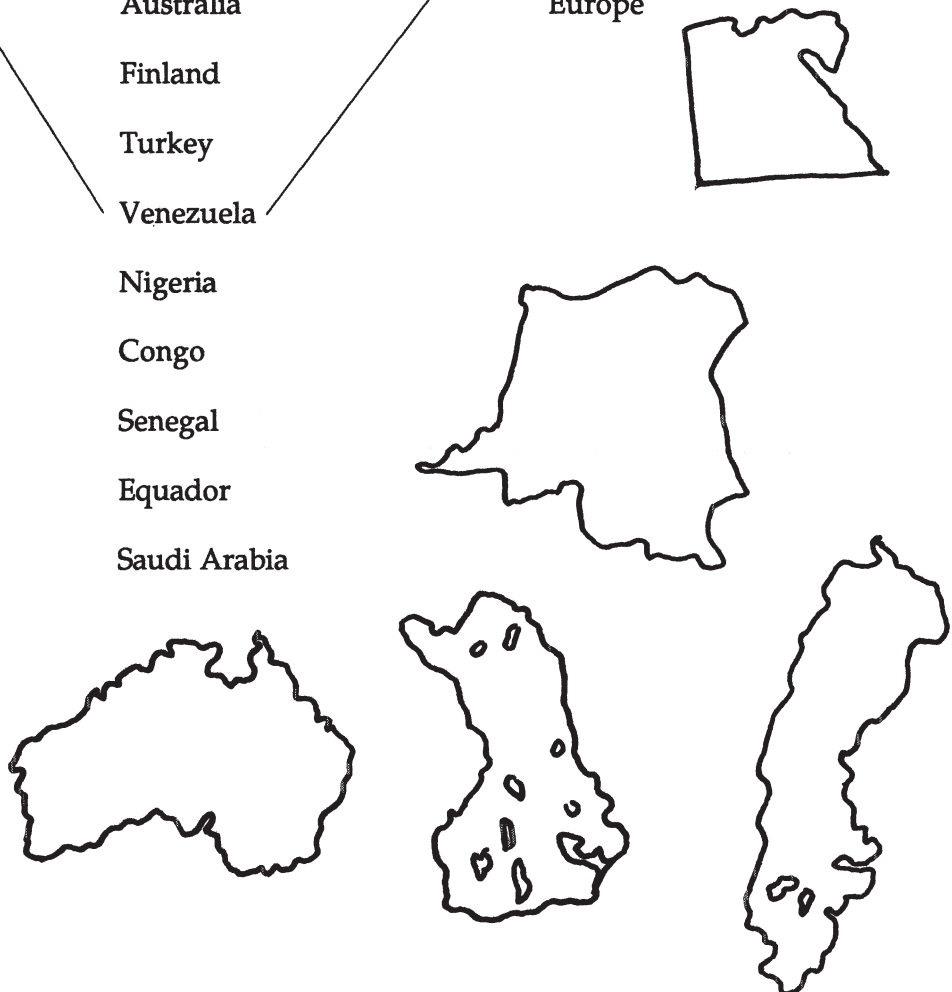
Asia

Antarctica

South America

Australia

Europe



Extended Challenge 13

Name _____

Date _____

Write the state's name in the blank after the clue or description.

1. Mississippi, Georgia, and Alabama are its southern neighbors. _____
2. OK is its state abbreviation. _____
3. The lowest point in the United States is here. _____
4. This state's capital is the same as the name of the sixteenth president. _____
5. This state is mainly a peninsula. _____
6. The Grand Canyon is located here. _____
7. This state has the largest body of salt water within its borders. _____
8. Frankfort is this state's capital. _____
9. The beginning of the Mississippi River starts here. _____
10. This is the smallest state. _____
11. Ohio is the eastern neighbor of this state. _____
12. Four Great Lakes touch this state. _____
13. This state is completely surrounded by water. _____
14. Washington is the northern neighbor of this state. _____
15. The Brooks Range is in this state. _____

Extended Challenge 14

Name _____

Date _____

In the blank, write the name of the country you would be in if you stood at each of the following coordinates.

1. 45°N/0°long _____

2. 30°S/31°E _____

3. 30°S/150°E _____

4. 40°N/4°W _____

5. 45°N/76°W _____

6. 60°N/75°E _____

7. 36°N/140°E _____

8. 30°S/60°W _____

9. 15°N/121°E _____

10. 45°N/105°E _____

11. 21°N/158°W _____

12. 15°S/75°W _____

13. 52°N/0°long _____

14. 30°N/30°E _____

15. 33°S/71°W _____

Extended Challenge 15

Name _____

Date _____

Complete the puzzle below by filling in the spaces with the names of capitals of Asian countries.

— A — — — — —
S — — — — —
— — I — — — —
— A — — — — —
— — N — — — — —
— — C — — — —
— — A — — — — —
— — — — — P — — — —
— — — — — I — — — —
T — — — — —
— A — — — — —
— — L — — — — —
— S — — — — —

Answer Key

Daily Problems
Extended Challenges



1. Oregon, Arizona, Utah, Nevada

2. Gulf of Mexico

3.

W
A H
S A
H O W
C A L I F O R N I A
L N E I
A G G I
S T O
K O N
A N

4. Alaska, California, Texas, New York

5. Washington, North Dakota, Alaska

6. North Dakota, Montana, Idaho, Washington

7. It's completely surrounded by water; it's an island.

8.

R A L E I G H
J T
N A S H V I L L E
C A
K N
S T
C O L U M B I A
N

9.

W I
Y I
C O L O R A D O
M A
I H
N M O N T A N A
G

10. Vermont, Idaho, Maine, Kansas

11. Kansas

12. Minnesota, Wisconsin, Michigan

13. AZ

14.

A
R
K
A
W I S C O N S I N
O S
W A
A M I S S O U R I

15. Alaska

16. Maine

17. Louisiana

18.

W
Y M
C O L O R A D O
M N
I D A H O T
N A
G N
A

19. Four Corners

20. Arizona

21. Colorado, New Mexico, Texas

22.

I
D
I N D I A N A
L O H
L W O
I A
N
O
I
S

23. Michigan

24. Washington

25. F, T, F, T

26. California, Nevada, Utah, Colorado, Nebraska

27. Mojave

28. States — Ohio, New Jersey; Cities — Atlanta, Helena, Boston

29. Great Salt Lake — Utah; Death Valley — California; Grand Canyon — Arizona; Snake River — Idaho

30. Carlsbad Caverns National Park

31. Phoenix

32. Miami

33. South Dakota

34. Minnesota, Wisconsin, Iowa, Illinois, Missouri, Kentucky, Tennessee, Arkansas, Mississippi, Louisiana

35. CA

36. Northeast — Vermont; Southeast — Arkansas; Midwest — Illinois; West — Oregon

37. Nevada

38. Virginia, Vermont, Michigan, Alabama

39. Colorado, Wyoming

40. Chicago

41. Idaho, Indiana, Vermont, Montana

42.

		C
		A
		L
M	T	I
O	E	F
N E W M E X I C O		
T	A	R
A	S	N
N		I
A	A L A S K A	

43. Iowa

44. South Dakota, North Dakota, North Carolina, South Carolina, West Virginia

45. Alaska

46. Texas, Missouri, Kansas, Wyoming

47. Peninsula, *Virginia*, Wyoming

48. Montgomery

49. T, T, T, T

50. Indiana, Michigan, Kansas, Ohio

51. A, C

52. Minnesota, Louisiana

53. Denver

54. Texas, Louisiana, Mississippi, Alabama, Florida

55. North, South, East, West

56. States — Wisconsin, Kentucky, Missouri; Cities — Harrisburg, Denver

57. Tennessee, Florida, Pennsylvania

58.

		C
		O
		L
	H U D S O N	
		R
M		A
R I O G R A N D E		
S		O
S		
C O L U M B I A		
U		
R		
O H I O		

59. New York City

60. Shoreline — Texas, Virginia, South Carolina; no shoreline — Arkansas, Tennessee

61. Idaho, Colorado, Montana, Kansas

62. California

63. Amarillo

64. Pierre — S. Dakota; Columbia — S. Carolina; Bismark — N. Dakota; Raleigh — N. Carolina

65. 28¾ miles

66. 37°W, 81°E

67. Three

68. Cuba

69.

A
U
B O T S W A N A
T
B R A Z I L
A
C H I L E
I
A

70. Hospital

71. 200 feet

72. Latitude, not longitude, should be listed first

73. Northeast

74. The Equator

75. NE

76. 3 A.M.

77. Prime Meridian

78. Pacific, Atlantic, Indian

79. Bangkok, Pretoria, Bogota, New Delhi

80. Northwest

81. South-southwest

82. Florida

83. Reno

84. 69°

85. New York–London

86. Canal

87. Gulf, isthmus, strait, ocean

88. Antarctic Ocean

89. 8 P.M.

90. Interstate Highway

91. Meridian — Line of longitude; Parallel — Line of latitude;
Equator — 0° latitude; Prime Meridian — 0° longitude

92. South America

93. B.

94. Equator

95. Alaska

96. 7 A.M.

97. Hemisphere — Western; continent — Asia; country —
Kenya; ocean — Atlantic

98. 2½ inches

99. Latitude — Equator, Arctic Circle; longitude — Prime
Meridian, International Date Line

100. Philadelphia, PA

101. Plateau

102. Latitude, ocean, offshore

103. Pacific, Atlantic

104. Chile, Argentina, Brazil, Uruguay

105. California, Nevada

106. South-southwest

107. Desert, hill, mountain, plateau

108. T, T, F, T

109. Sixty minutes

- 110. Wyoming
- 111. Bay, Africa, sea
- 112. B.
- 113.

A S
 L P
 F G A
 G R E E N W I C H
 A R N
 N I
 C A T L A N T I C
 E

- 114. SW, southwest, 90°
- 115. South
- 116. Arctic
- 117. B, D
- 118. India, Bangladesh, Burma, China, Japan
- 119.



- 120. 1350 miles (approximately)
- 121. England, India, Burma, Peru
- 122. Tropic of Capricorn — 23½°S; Tropic of Cancer — 23½°N; Antarctic Circle — 66½°S; Arctic Circle — 66½°N
- 123. T, F, F, F
- 124. 10 P.M.
- 125. 1788 miles
- 126. Parallel, south, 15°W
- 127. 19°
- 128. Atlantic, Indian
- 129.

S Y R I A
 S I
 J O R D A N R
 A A
 L E B A N O N
 L

130. Japan

131.

N
O
R D
S W E D E N
A N
I T A L Y M
A
R
K

132. Caspian Sea

133. Train, plane, car, ship

134. Iceland

135. Mediterranean Sea

136.

L S
C A R A C A S
P N
A T Q
Z I U
A I
B O G O T A
O O

137. Mediterranean, Red

138. China

139. Peru, Chile, Bolivia, Uruguay

140. Australia

141. El Salvador

142. National capital city

143. Bolivia, Paraguay

144. Brazil

145. Italy, France, Spain, Austria

146. North Pole

147.

C
H J
V I E T N A M
N P
B U R M A L A O S
N

148. Chile

149. Australia

150. Spain, Austria, Poland, Finland

151. Australia, Antarctica

152. Asia

153. Cuba, Japan, Iceland, Korea

154. Egypt and Saudi Arabia

155. North America — Canada; Central America — Costa Rica;
South America — Columbia

156. Philippines

157. F, F, T, T

158. Lake Ontario

159. New Zealand

160. Mississippi

- 161. New Zealand
- 162. China, Canada, Russia, Brazil
- 163. Canberra
- 164. Quito
- 165. Dublin, Madrid, Athens, Cairo
- 166. South America
- 167. Madrid — Spain; Brussels — Belgium; Sofia — Bulgaria;
Vienna — Austria
- 168. West Germany
- 169. Portugal, Japan, Burma, Austria
- 170. Vatican City
- 171. Countries — USSR, New Zealand; continents — Asia,
Antarctica, South America
- 172. La Paz, Sucre
- 173. Continent, *sea*, desert
- 174. Korea
- 175. Atlantic and Pacific
- 176. Australia
- 177. Uganda, Egypt, Sudan, Zambia
- 178. USSR
- 179. China
- 180. Bucharest
- 181. T, T, F, T
- 182. Kathmandu
- 183. Caracas
- 184. Sea — Mediterranean; ocean — Indian; bay — Hudson;
gulf — Persian
- 185. Atlantic
- 186. Buenos Aires
- 187.

N I C A R A G U A
 U
 A
 H T
 O E
 N M
 D B A P
 U E L S A L V A D O R
 R L A N
 C O S T A R I C A A
 S Z M
 E A

- 188. Peru, Brazil, Uruguay, Chile
- 189. Countries — Panama, Australia, India; continents —
Australia, Europe, Africa
- 190. Islamabad
- 191. Antarctica
- 192. USSR

Extended Challenge 1

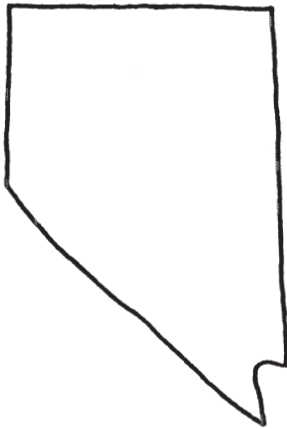
Identify the capital for each of the following states.




Columbus



Boise



Carson City



Harrisburg




Augusta



Indianapolis



Atlanta



Santa Fe

Extended Challenge 2

Identify an example of each landform, and place each one on the proper continent. One sample has been done for you.

Landform	Example	Continent
lake	Sahara	Australia
desert	Hudson	South America
peninsula	Alps	Antarctica
island	Eyre	Asia
bay	Amazon	North America
mountains	Palmer	Africa
river	Japan	Europe

Extended Challenge 3


Place a check mark after each country to show which hemisphere(s) it is in.

Hemispheres

	Eastern	Western	Northern	Southern
Turkey	✓		✓	
India	✓		✓	
Antarctica	✓	✓		✓
Uruguay		✓		✓
Greenland		✓	✓	
Australia	✓			✓
Mexico		✓	✓	
South Africa	✓			✓
Japan	✓		✓	
Thailand	✓		✓	
Canada		✓	✓	
Bolivia		✓		✓
New Zealand	✓			✓
Chile		✓		✓
Venezuela		✓		✓

Extended Challenge 4

In the puzzle below, locate and circle the names of all the states that have a seacoast. The names will go down, across, or diagonally. One state with a seacoast is missing from the puzzle. Write its name on the line under the puzzle. Two-part names are spelled as one, with no space between parts.

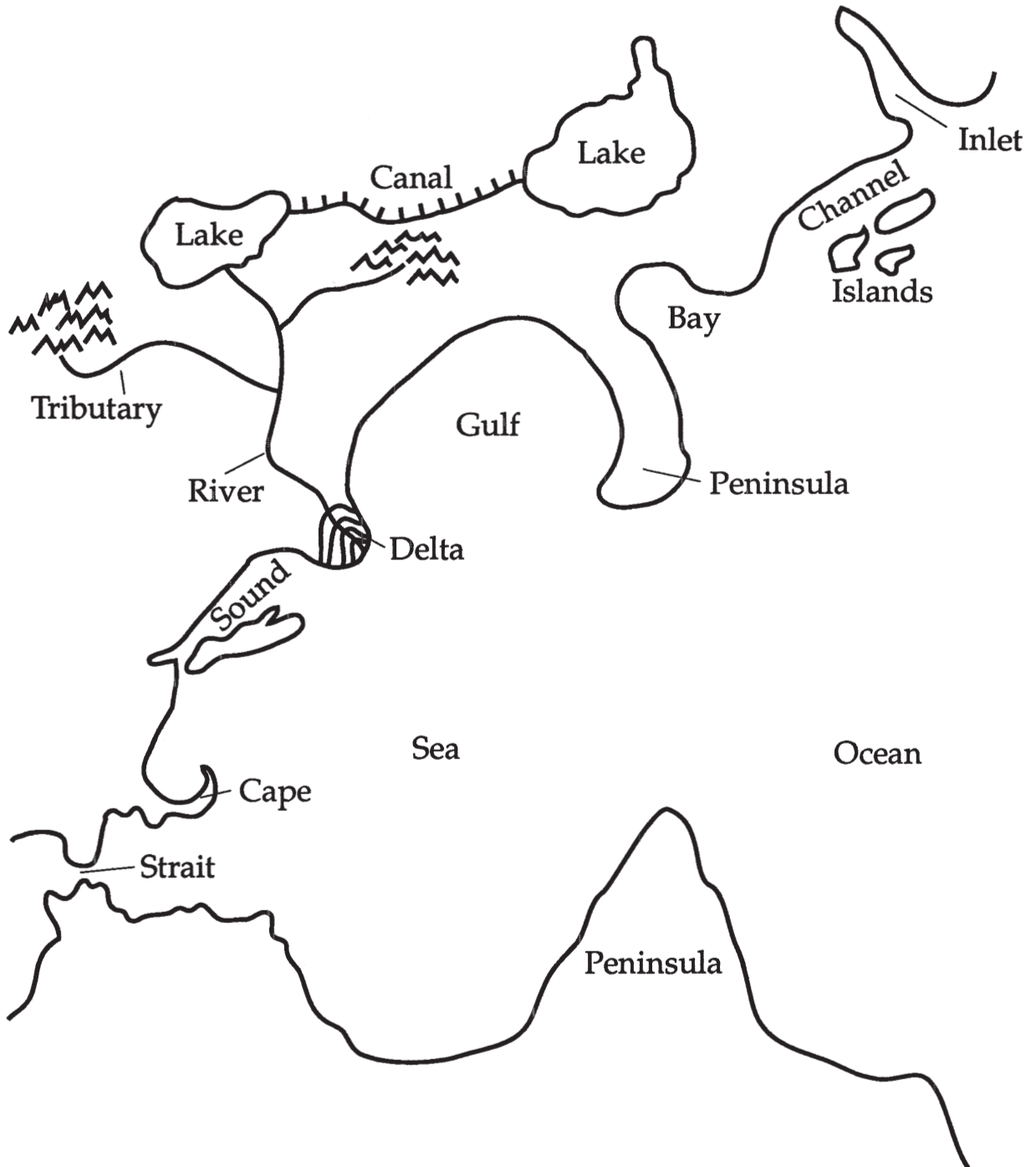


The state with a seacoast not included in the puzzle above: Massachusetts

Extended Challenge 5

On the illustration below, label the following:

island	peninsula	tributary	delta	channel
inlet	sound	strait	bay	gulf
sea	river	lake	cape	canal



Extended Challenge 8

Draw a line from each of the states in the middle column to its capital in the left column, and then to its corresponding region in the right column. One sample has been done for you.

Capital	State	Region
Cheyenne	New Mexico	Northeast
Concord	West Virginia	Southeast
Juneau	Ohio	Midwest
Columbus	North Dakota	Mountain
Charleston	Montana	Pacific
Jackson	Mississippi	
Bismarck	Wisconsin	
Albany	Wyoming	
Little Rock	Oregon	
Santa Fe	Alaska	
Helena	New Hampshire	
Madison	New York	
Olympia	Arkansas	
Salem	Washington	

Extended Challenge 9

Complete the puzzle below by filling in the spaces with the names of lines, areas, or locations you would find on a map of the world. Treat multiple-word terms as one word, with no space between.

L O N G I T U D E
G R I D
T R O P I C O F C A N C E R
P R I M E M E R I D I A N
S O U T H P O L E
E Q U A T O R
D A T E L I N E
A R C T I C C I R C L E
H E M I S P H E R E
L A T I T U D E
M E R I D I A N
A N T A R C T I C C I R C L E
P A R A L L E L

Extended Challenge 10

The puzzle below contains the names of 32 European countries. The names go across, down, or diagonally. Circle each one in the puzzle. Two-word names are treated as one word, with no space between.

L	C	D	H	Q	A	E	A	S	T	G	E	R	M	A	N	Y	U
I	O	S	A	N	M	A	R	I	N	O	P	H	P	B	A	P	N
E	V	A	T	I	C	A	N	C	I	T	Y	P	E	U	N	C	I
C	U	N	E	T	H	E	R	L	A	N	D	S	A	L	D	O	T
H	C	F	K	B	C	Z	A	M	Q	Z	G	O	M	G	O	H	E
T	B	Z	F	E	C	E	N	O	O	H	U	N	G	A	R	Y	D
E	E	M	E	R	U	Y	W	N	C	N	R	W	G	R	R	L	K
N	L	R	V	C	A	U	S	T	R	I	A	U	B	I	A	U	I
S	G	D	F	T	H	G	F	Z	T	V	B	C	I	A	V	X	N
T	I	E	I	S	P	O	L	A	N	D	J	J	O	J	F	E	G
E	U	N	N	Y	A	S	S	Y	M	S	M	D	Y	L	D	M	D
I	M	M	L	T	L	L	N	L	E	X	A	S	C	E	N	B	O
N	I	A	A	X	B	A	P	X	O	J	L	X	W	Q	I	O	M
L	T	R	N	D	A	V	Y	O	D	V	T	S	Z	M	D	U	B
I	K	K	D	S	N	I	R	M	R	K	A	E	W	N	A	R	X
R	U	M	A	N	I	A	J	X	R	T	L	K	A	M	G	G	I
E	T	U	D	I	A	S	R	A	E	W	U	L	I	K	N	G	L
L	H	L	C	S	G	Q	P	W	V	F	E	G	G	A	Q	A	H
A	J	E	B	Y	F	F	R	A	N	C	E	T	A	O	Y	H	V
N	O	R	W	A	Y	Z	S	W	I	T	Z	E	R	L	A	N	D
D	W	E	S	T	G	E	R	M	A	N	Y	K	U	P	B	I	D

Extended Challenge 11

Match each river in the left column with the names of the states in the right column that have that river as part of their border.

A. Colorado River

B. Ohio River

C. Missouri River

D. Columbia River

E. Red River

F. Delaware River

 B Indiana

 C Nebraska

 A California

 E Oklahoma

 C Iowa

 B Ohio

 D Washington

 F Pennsylvania

 C South Dakota

 B West Virginia

 C Kansas

 A Nevada

 E Arkansas

 F New Jersey

 D Oregon

 E Texas

 B Illinois

 F New York

 A Arizona

 B Kentucky

Extended Challenge 12

Draw a line from each capital city (left column) to its country (middle column) and then to that country's continent (right column). One sample has been done for you.

Capital	Country	Continent
Ottawa	China	North America
Stockholm	Canada	Africa
Caracas	Egypt	Asia
Beijing	Italy	Antarctica
Cairo	Sweden	South America
Rome	Portugal	Australia
Lagos	Australia	Europe
Ankara	Finland	
Helsinki	Turkey	
Quito	Venezuela	
Riyadh	Nigeria	
Lisbon	Congo	
Dakar	Senegal	
Canberra	Equador	
Brazzaville	Saudi Arabia	

Extended Challenge 13

Write the state's name in the blank after the clue or description.

1. Mississippi, Georgia, and Alabama are its southern neighbors. _____ Tennessee
2. OK is its state abbreviation. _____ Oklahoma
3. The lowest point in the United States is here. _____ California
4. This state's capital is the same as the name of the sixteenth president. _____ Nebraska
5. This state is mainly a peninsula. _____ Florida
6. The Grand Canyon is located here. _____ Arizona
7. This state has the largest body of salt water within its borders. _____ Utah
8. Frankfort is this state's capital. _____ Kentucky
9. The beginning of the Mississippi River starts here. _____ Minnesota
10. This is the smallest state. _____ Rhode Island
11. Ohio is the eastern neighbor of this state. _____ Indiana
12. Four Great Lakes touch this state. _____ Michigan
13. This state is completely surrounded by water. _____ Hawaii
14. Washington is the northern neighbor of this state. _____ Oregon
15. The Brooks Range is in this state. _____ Alaska

Extended Challenge 14

In the blank, write the name of the country you would be in if you stood at each of the following coordinates.

1. 45°N/0°long France
2. 30°S/31°E South Africa
3. 30°S/150°E Australia
4. 40°N/4°W Spain
5. 45°N/76°W Canada
6. 60°N/75°E USSR
7. 36°N/140°E Japan
8. 30°S/60°W Argentina
9. 15°N/121°E Philippines
10. 45°N/105°E Mongolia
11. 21°N/158°W United States (Hawaii)
12. 15°S/75°W Peru
13. 52°N/0°long England
14. 30°N/30°E Egypt
15. 33°S/71°W Chile

Extended Challenge 15

Complete the puzzle below by filling in the spaces with the names of capitals of Asian countries.

B A N G K O K
S E O U L
T A I P E I
J A K A R T A
R A N G O O N
D A C C A
U L A N B A T O R
S I N G A P O R E
N E W D E L H I
T O K Y O
M A N I L A
C O L O M B O
I S L A M A B A D

