

WHERE IS IT?

**World Geography Fun for
Middle School**

E. Richard Churchill and Linda R. Churchil

J. WESTON
WALCH
PUBLISHER

User's Guide **to** ***Our Reproducible Books***

As part of our general effort to provide educational materials which are as practical and economical as possible, we have designated this publication a “reproducible book.” The designation means that purchase of the book includes purchase of the right to limited reproduction of all pages on which this symbol appears:

Repro

Here is the basic policy: We grant to individual purchasers of this book the right to make sufficient copies of reproducible pages for use by all students of a single teacher. This permission is limited to a single teacher, and does not apply to entire schools or school systems, so institutions purchasing the book should pass the permission on to a single teacher. Copying of the book or its parts for resale is prohibited.

Any questions regarding this policy or requests to purchase further reproduction rights should be addressed to:

Permissions Editor
J. Weston Walch, Publisher
10200 Jefferson Blvd.
Culver City, CA 90232

ISBN 978-0-8251-2747-2

Copyright © 1995
J. Weston Walch, Publisher
10200 Jefferson Blvd. | Culver City, CA 90232
www.socialstudies.com/walch

Printed in the United States of America



<i>To the Teacher</i>	<i>ix</i>
-----------------------------	-----------

<i>I. Europe and Northern Asia</i>	1
Terms for Europe and Northern Asia	1
Pretest	2
Political Features Puzzle	3
Political Features—Clues	4
Physical Features Puzzle	5
Physical Features—Clues	6
Locating Features by Direction and Distance	7
Locating Features Using Latitude and Longitude	8
Russia and Eurasia	9
Review	11
 <i>II. Asia</i>	 13
Terms for Asia	13
Pretest	14
Political Features Puzzle	15
Political Features—Clues	16
Physical Features Puzzle	17
Physical Features—Clues	18
Locating Features by Direction and Distance	19
Locating Features Using Latitude and Longitude	20
Review	21
 <i>III. The Middle East</i>	 23
Terms for the Middle East	23
Pretest	24
Political Features Puzzle	25
Political Features—Clues	26

Physical Features—Clues	27
Physical Features Puzzle	28
Locating Features by Direction and Distance	29
Locating Features Using Latitude and Longitude	30
Review	31
 IV. Africa	 33
Terms for Africa	33
Pretest	34
Political Features Puzzle	35
Political Features Puzzle—Clues	36
Physical Features Puzzle	37
Physical Features Puzzle—Clues	38
Locating Features by Direction and Distance	39
Locating Features Using Latitude and Longitude	40
Review	41
 V. Australia and the Pacific Islands	 43
Terms for Australia and the Pacific Islands	43
Pretest	44
Political Features Puzzle	45
Political Features—Clues	46
Physical Features Puzzle	47
Physical Features—Clues	48
Locating Features by Direction and Distance	49
Locating Features Using Latitude and Longitude	51
All at Sea: The Pacific Islands	52
Review	53
 VI. Antarctica	 55
Terms for Antarctica	55
Pretest	56
Physical Features Puzzle	57
Physical Features—Clues	58
Locating Features by Direction and Distance	59
Locating Features Using Latitude and Longitude	60
Land of Adventure	61
Review	63

VII. South America and the Caribbean	65
Terms for South America and the Caribbean	65
Pretest	66
Political Features Puzzle	67
Political Features—Clues	68
Physical Features Puzzle	69
Physical Features—Clues	70
Locating Features by Direction and Distance	71
Locating Features Using Latitude and Longitude	73
Caribbean Adventure	74
Review	76
VIII. North America	77
Terms for North America	77
Pretest	79
Political Features Puzzle	80
Political Features—Clues	81
Physical Features Puzzle	82
Physical Features Puzzle—Clues	83
Locating Features by Direction and Distance	84
Locating Features Using Latitude and Longitude	85
Political Features of the United States	86
Physical Features of the United States	87
Review	89
IX. The World in Review	91
Terms for the World in Review	91
Reviewing the World's Political Features	92
Reviewing the World's Physical Features	93
X. Quiz Questions: Europe	95
Political Features	95
Basic Questions	95
More Difficult Questions	95
Physical Features	96
Basic Questions	96
More Difficult Questions	96

<i>Quiz Questions: Asia</i>	98
Political Features	98
Basic Questions	98
More Difficult Questions	98
Physical Features	99
Basic Questions	99
More Difficult Questions	99
 <i>Quiz Questions: Middle East</i>	101
Political Features	101
Basic Questions	101
More Difficult Questions	101
Physical Features	102
Basic Questions	102
More Difficult Questions	102
 <i>Quiz Questions: Africa</i>	104
Political Features	104
Basic Questions	104
More Difficult Questions	104
Physical Features	105
Basic Questions	105
More Difficult Questions	106
 <i>Quiz Questions: Australia and the Pacific Islands</i>	107
Political Features	107
Basic Questions	107
More Difficult Questions	107
Physical Features	108
Basic Questions	108
More Difficult Questions	109
 <i>Quiz Questions: Antarctica</i>	110
Physical Features	110
Basic Questions	110

<i>Quiz Questions: South America</i>	111
Political Features	111
Basic Questions	111
More Difficult Questions	111
Physical Features	112
Basic Questions	112
More Difficult Questions	113
 <i>Quiz Questions: North America</i>	 114
Political Features	114
Basic Questions	114
More Difficult Questions	116
Physical Features	116
Basic Questions	116
More Difficult Questions	117
 <i>XI. Answers</i>	 121
Europe and Northern Asia	121
Asia	123
The Middle East	124
Africa	126
Australia and the Pacific Islands	128
Antarctica	130
South America and the Caribbean	131
North America	133
The World in Review	136

To the Teacher

Where Is It? World Geography Fun for Middle School is designed to make the study of place geography interesting and entertaining for both students and teacher. With this in mind, two puzzles and a generous selection of quiz questions are provided for the study of each continent except Antarctica, which has one puzzle. In addition there are a pretest, two location exercises, and a review page for the place geography of each continent. Several special puzzle pages are also included to direct student attention and learning to specific areas of geographic importance.

The puzzles and study pages in *Where Is It?* encourage students to acquire a basic understanding of world place geography. They call upon students to make use of map and atlas skills. In addition to locating the required answers, students receive practice in use of direction, scale of distance, and location by use of latitude and longitude.

The puzzles and study pages for each continent are set up in similar manner so you and your students know exactly what to expect as you move from continent to continent. You will most likely wish to study the place geography of one continent at a time. However, each puzzle and study page is independent of all others. Should you wish to work on latitude and longitude location, for example, there is no reason why you can't utilize those specific study pages from more than one continent to provide extended practice in this skill during a short time frame.

Each continent unit begins with a **Pretest**. Use this page in whatever manner best fits the needs of your class. It gives you and your students a quick check of what they know and do not know about the place geography of a given continent. Since the Pretest provides an overview of the continent, both political and physical geography are covered. It is suggested that students complete as much of the page as possible without reference to a map or an atlas. Then, if you wish, they may turn to a map or an atlas to check their answers and to complete the remainder of the page. Depending upon the ability levels of your students, you may wish to consider having them work with partners as they take the Pretest.

Another use of the Pretest is to have your students complete this page without the use of a map or atlas as a study page before taking a formal test. If you wish, allow students to form study groups and base their test preparation on the Pretest.

A **Political Features Puzzle** comes next in all units except Antarctica. All answers required to complete this interlocking puzzle are names of cities, states, and nations. This puzzle is self-checking in that only correct answers will interlock correctly. Because Antarctica has few political features, only one puzzle concentrating on physical features has been included.

The second puzzle in each unit is a **Physical Features Puzzle** whose answers are the names of land and water features. These include mountain ranges, bays, gulfs, rivers, oceans, islands, etc. This puzzle is also self-checking. Only the correct answer will fill the answer spaces provided and, at the same time, correctly interlock with the vertical phrase that is spelled out by boxed letters in the puzzle.

Each unit includes a **Locating Features by Direction and Distance** study page requiring the students to use their knowledge of direction and a scale of distance in order to locate the political or physical geography features described. After your students have completed this study page you may wish to have them take part in individual or small-group activities in which they devise their own direction and distance clues for features of their choosing. Students can use these clues in group competitions in which a clue is read aloud and the first group to locate the desired feature scores a point.

A second study page, **Locating Features Using Latitude and Longitude**, gives your students an opportunity to practice their skills of location. The features they locate are both political and physical.

Again, if you wish, consider having small groups of students set up their own latitude and longitude locations. As was suggested for student-made direction and distance questions, you can use their latitude and longitude locations as the basis for a quick class competition.

From time to time, one additional study-puzzle will be included to call attention to a specific area of importance. For instance, at the end of the unit on Europe is a study-puzzle dealing with the former Soviet Union. This study-puzzle helps make the transition from Europe to Asia.

The final study page for each continent is a **Review** page in which students are given the names of twenty geographic features that are a mix of political and physical features. The students are asked to use a map or an atlas to locate these features and then write a clue that would lead others to locate that specific feature. An example is given along with two clues that would be correct answers for this example. Not only does the Review page provide students with a different review approach, it also encourages them to look carefully at each location in terms of its place on the continent.

An excellent summation activity is to have each student read aloud one of his or her clues and have the class identify the feature described. This activity can be used with your entire class or as a small-group project. You might also consider having students write three or four of their clues on a sheet of paper and then exchange papers with a partner. Each partner then attempts to identify the feature from the clues provided.

A generous selection of **Quiz Questions** is provided for each continent. For all continents except Antarctica, political feature questions and physical feature questions are listed separately. In addition, each set of questions is divided into those that are

more basic and those that require a bit more knowledge. When these questions are used for quiz contests, the basic questions might be scored as five-point questions and the more difficult questions as ten-point questions.

The Quiz Questions are designed to be used as an oral review, providing a high level of student interest and participation. They may also provide the basis for a final teacher-constructed test for each continent. If you wish, use some of the Quiz Questions as an oral test to determine whether the class is prepared to take a more formal final test.

Quiz Questions not only allow for interesting review, they also serve as a teaching means. As students take part in a quiz contest, they are constantly recalling information and remembering facts given by others who respond correctly to such questions. Class quiz contests are an excellent reward activity which students anticipate and enjoy.

There is no limit to the number of ways you and your students may use the Quiz Questions. You may conduct class quizzes during which students are divided into teams or compete as individuals. Students may form small groups and conduct their own quiz contests.

One successful way to conduct a class quiz is to allow the student or team giving a correct response to choose the next question. For example, a student who has correctly answered a question might request that the next question be a ten-point question on physical features or a five-point political geography question. Another approach is to have the quiz moderator, in most cases the teacher, simply make the choice as to which category and level of difficulty the next question will be.

Individual students can challenge others so that a given question is directed toward two students. Questions may be directed to the entire class when the class is divided into teams. In such a case, the first hand up is allowed a chance to answer. (Identifying the first hand up can be a real challenge for the moderator, by the way.) It is probably best to award points for correct answers but not to deduct for incorrect responses.

Experiment to determine how you and your classes can utilize the Quiz Questions to best advantage. Don't be concerned about reusing given questions if you conduct several quizzes on the same continent either as reward or review activities. Try not to repeat the same question in a single quiz contest, of course.

The puzzles, study pages, and Quiz Questions included in *Where Is It?* provide the basis for enjoyable study of world place geography. Feel free to use these materials in any manner best suited to your needs and those of your students.

I. Europe and Northern Asia

Terms for Europe and Northern Asia

Students will use the following terms as they complete the study pages in this unit.

Adriatic Sea	Caucasus	Kiev	Riga
Aegean Sea	China	Kola Peninsula	Romania
Albania	Copenhagen	Kuril Islands	Rome
Alps	Corsica	Laptev Sea	Russia
Amsterdam	Crete	Latvia	Saint Petersburg
Amur	Crimea	Lena	Sakhalin
Andorra	Czech Republic	Liechtenstein	Sardinia
Apennines	Danube	Lithuania	Seine River
Arctic Ocean	Dardanelles	Ljubljana	Sevastopol
Ashkhabad	Denmark	Loire	Siberia
Asia	Dniester River	London	Sicily
Athens	Don River	Luxembourg	Skagerrak
Atlantic Ocean	Dublin	Macedonia	Skopje
Austria	Elbe River	Madrid	Slovenia
Azerbaijan	English Channel	Marmara, Sea of	Sofia
Baikal, Lake	Estonia	Mediterranean Sea	Spain
Balearic Islands	Europe	Minsk	Stockholm
Balkhash, Lake	Finland	Moldova	Sweden
Baltic Sea	France	Moscow	Switzerland
Barents Sea	Georgia	Murmansk	Taymyr
Belarus	Germany	Naples	T'bilisi
Belgium	Gotland	Netherlands	Tirana
Bering	Greece	North Cape	Turkmenistan
Berlin	Hamburg	North Sea	Tyrrhenian Sea
Bern	Hungary	Norway	Ukraine
Biscay, Bay of	Iceland	Norwegian Sea	United Kingdom
Black Sea	Ionian Sea	Oslo	Ural Mountains
Bosporus	Iran	Paris	Venice
Brussels	Ireland	Po River	Vilnius
Bucharest	Istanbul	Poland	Volga River
Budapest	Italy	Portugal	Volgograd
Bulgaria	Japan	Prague	Warsaw
Carpathians	Kattegat	Pyrenees	Yugoslavia
Caspian Sea	Kazakhstan	Rhone River	

EUROPE AND NORTHERN ASIA

Pretest

Directions: Answer as many questions about Europe's geography as you can without using a map or an atlas. Write each answer in the space provided.

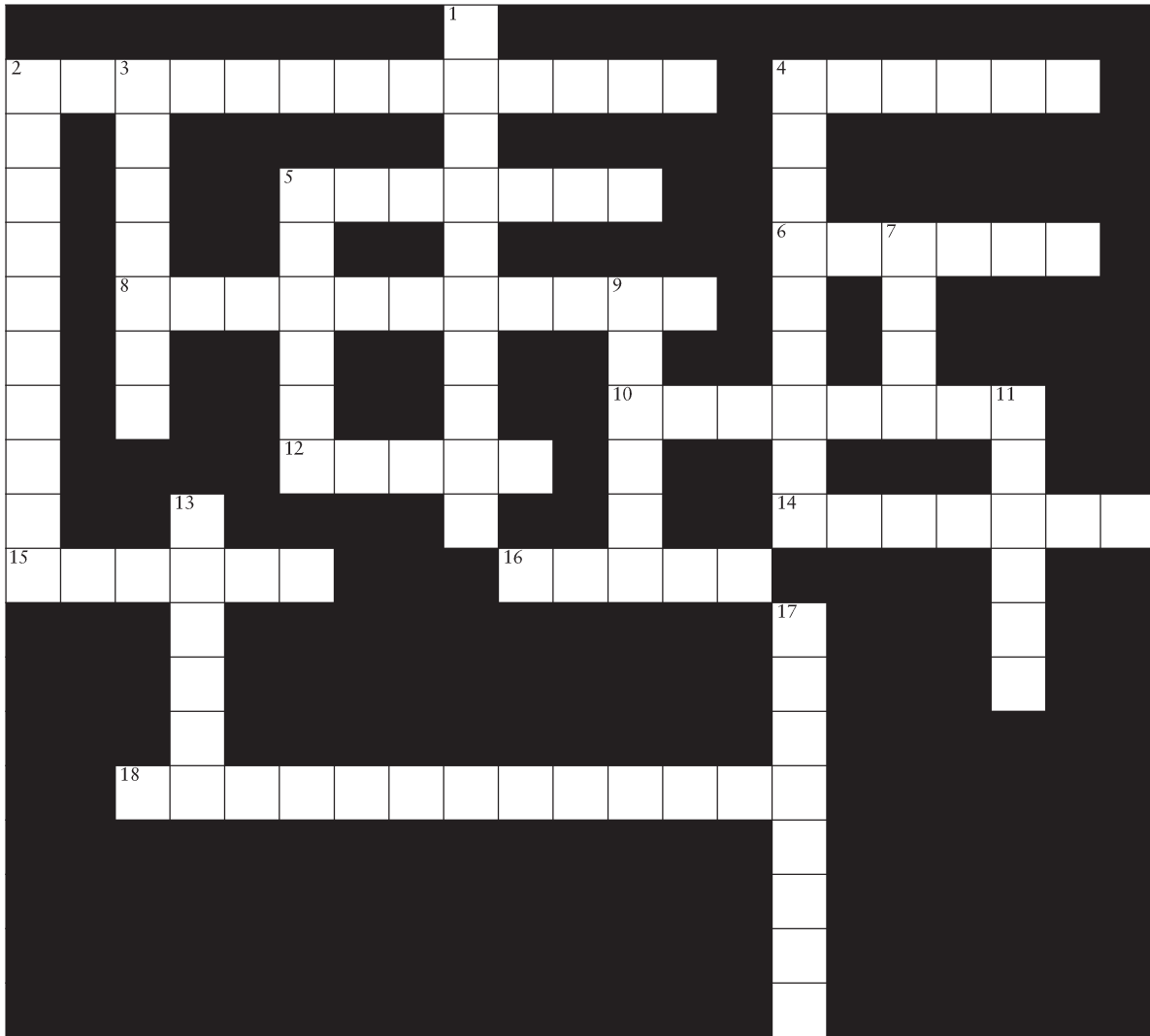
1. Which European nation is located the farthest west? _____
2. What is the nation that borders only Spain? _____
3. What mountain range runs along the border between Spain and France? _____
4. Which range of mountains separates European Russia from Asiatic Russia? _____
5. Which ocean borders both Norway and Russia? _____
6. What is the capital city of the United Kingdom? _____
7. Stockholm is the capital city of which nation? _____
8. Which mountains would have to be crossed to get from northern Italy to Switzerland?

9. What sea borders the Netherlands, Denmark, and the United Kingdom? _____
10. The cities of Venice, Naples, and Rome are in which nation? _____
11. Which country borders both Poland and France? _____
12. Brussels is the capital of which nation? _____
13. Spain and Greece both border which sea? _____
14. The Rhone and Seine rivers flow through which nation? _____
15. The city of Dublin is capital of which nation? _____
16. Which sea touches Ukraine, Romania, and Bulgaria? _____
17. The Volga, Don, and Ural rivers all flow through which country? _____
18. Which nation's capital city is Budapest? _____
19. Which ocean borders both Iceland and Ireland? _____
20. Which nation is located between Estonia and Lithuania? _____

Name _____ Date _____

EUROPE AND NORTHERN ASIA

Political Features Puzzle



EUROPE AND NORTHERN ASIA

Political Features—Clues

Directions: Each clue below will help you find a correct answer for the Political Features Puzzle. Write the letters of each answer in the spaces provided. Make sure all answers interlock correctly.

Across

2. The country whose capital is Prague
4. Country between Estonia and Lithuania
5. Tiny nation between France and Spain
6. Capital of Germany
8. Nation whose capital is Amsterdam
10. Capital of Hungary
12. Capital city east of Skopje and south of Bucharest
14. Country north of Italy and south of the Czech Republic
15. Country west of Sweden and north of Denmark
16. Capital of Belarus
18. The island nation whose capital is London

Down

1. Nation on the northern borders of Macedonia and Albania
2. Capital of Denmark
3. The farthest north of these three countries: Latvia, Lithuania, or Estonia
4. Capital of Slovenia
5. The most southern capital city in Europe.
7. Italy's capital city
9. Ireland's capital
11. Capital city found west of Skopje, Macedonia
13. Country that is east of Norway and west of Finland
17. City on the Kola Peninsula beside the Barents Sea

Name _____ Date _____

EUROPE AND NORTHERN ASIA

Physical Features Puzzle

1. _ _ [_] _ _ _ _
2. _ _ _ _ [_] _ _ _ _
3. _ _ _ _ [_]
4. [_] _ _ _
5. _ _ _ _ _ _ [_] _
6. _ _ [_] _ _ _ _ _ _ _ _ _
7. _ [_]
8. _ _ [_] _
9. _ _ _ [_] _ _ _
10. _ _ [_] _ _ _ _ _
11. _ [_] _ _ _ _ _ _ _ _ _ _ _ _ _
12. [_] _ _ _ _ _
13. _ [_] _ _ _
14. _ _ _ _ [_] _ _ _ _
15. _ _ _ [_] _ _ _ _
16. [_] _ _ _ _ _ _ _ _
17. _ _ [_] _ _ _
18. _ _ _ [_] _ _ _ _ _ _ _ _ _ _
19. _ _ _ _ [_] _ _ _
20. _ _ _ [_] _

EUROPE AND NORTHERN ASIA

Physical Features—Clues

Directions: Use each clue to help locate the physical feature described. Write the name of that feature in the spaces provided. When you finish, the boxed letters will spell a phrase related to this puzzle.

1. Large Swedish island in the Baltic Sea
2. Norway's most northern point
3. A French river that flows into the Bay of Biscay
4. River on which the city of Hamburg is located
5. Strait that separates the Black Sea and the Sea of Marmara
6. Body of water into which the Po River flows
7. Major river that drains northern Italy
8. Mountains found in Switzerland
9. The large land area that is part of Russia and lies east of the Ural Mountains
10. Body of water into which the Dniester River flows
11. Body of water that separates France and the United Kingdom
12. Peninsula on which Sevastopol is located and which extends into the Black Sea
13. Major Russian river that flows into the Caspian Sea
14. Mountains that form the backbone of Italy
15. Strait that separates Denmark and Sweden
16. Body of water between southern Italy and Greece
17. River that forms part of the border between Romania and Bulgaria
18. The Mediterranean islands that are east of Spain and west of Sardinia
19. Mountains that border France and Spain
20. Island found south of Greece

EUROPE AND NORTHERN ASIA

Locating Features by Direction and Distance

Directions: Use the direction and distance clues to help locate the features they describe. Write the name of each feature in the space provided.

1. This nation is south of Romania and west of the Black Sea. _____
2. This country is east of Norway and west of Finland. _____
3. This capital city is a little more than 500 miles east of Riga, Latvia. _____
4. This bay is 300 miles north of Madrid, Spain. _____
5. This sea is east of Italy and west of Albania. _____
6. This capital city is about 300 miles southeast of Minsk, Belarus. _____
7. This nation is west of Hungary and south of the Czech Republic. _____
8. This sea is south of Ukraine and southeast of Moldova. _____
9. This capital city is about 100 miles north and a bit east of Brussels, Belgium.

10. This island is north of the island of Sardinia and west of Rome, Italy. _____
11. This nation is 900 miles west of Norway and 800 miles northwest of Ireland.

12. These mountains are east of Rome and south of Venice, Italy. _____
13. This sea is 300 miles north of the island of Crete and east of Athens, Greece.

14. These mountains are south of Warsaw, Poland, and east of Budapest, Hungary.

15. This sea is north of the Netherlands and west of Denmark. _____
16. This capital city is about 275 miles northwest of Bern, Switzerland. _____
17. This island is about 300 miles south of Rome, Italy. _____
18. This nation is north of Latvia and south of Finland. _____
19. This sea is west of Lithuania and north of Poland. _____
20. This range of mountains is about 800 miles east of Moscow, Russia. _____

EUROPE AND NORTHERN ASIA

Locating Features Using Latitude and Longitude

Directions: Use the latitude and longitude figures given to locate the feature described. Name that feature in the space provided. The term in parentheses tells what sort of feature you are locating.

- | | |
|-----------------------|--|
| 1. _____ (ocean) | 55° North Latitude, 15° West Longitude |
| 2. _____ (sea) | 35° North Latitude, 20° East Longitude |
| 3. _____ (nation) | 55° North Latitude, 40° East Longitude |
| 4. _____ (sea) | 55° North Latitude, 5° East Longitude |
| 5. _____ (nation) | 47° North Latitude, 4° East Longitude |
| 6. _____ (nation) | 43° North Latitude, 13° East Longitude |
| 7. _____ (nation) | 62° North Latitude, 15° East Longitude |
| 8. _____ (sea) | 43° North Latitude, 35° East Longitude |
| 9. _____ (nation) | 40° North Latitude, 5° West Longitude |
| 10. _____ (nation) | 51° North Latitude, 21° East Longitude |
| 11. _____ (mountains) | 60° North Latitude, 60° East Longitude |
| 12. _____ (bay) | 45° North Latitude, 4° West Longitude |
| 13. _____ (island) | 40° North Latitude, 9° East Longitude |
| 14. _____ (nation) | 45° North Latitude, 25° East Longitude |
| 15. _____ (mountains) | 43° North Latitude, 13° East Longitude |
| 16. _____ (nation) | 50° North Latitude, 30° East Longitude |
| 17. _____ (city) | 52° North Latitude, 0° Longitude |
| 18. _____ (city) | 38° North Latitude, 24° East Longitude |
| 19. _____ (city) | 60° North Latitude, 11° East Longitude |
| 20. _____ (city) | 54° North Latitude, 25° East Longitude |

EUROPE AND NORTHERN ASIA

Russia and Eurasia

The former Soviet Union extended from Europe east across the continent of Asia. Now divided into Russia and numerous smaller nations, this area still joins Europe and Asia.

Directions: Read each statement. Decide which political or physical feature the statement describes. Write the name of that feature in the spaces provided. One letter fills each space.

1. Kiev is the capital of this nation which is north of the Black Sea.

2. This newly independent country is bordered by Lithuania, Poland, and Ukraine. ____

3. The large land area that is part of Russia and is located east of the Ural Mountains is known by this name. _____
4. Ashkhabad is the capital city of this nation north of Iran.

5. This city is found on the Kola Peninsula beside the Barents Sea.

6. This major river flows north into the Laptev Sea. _____
7. This major lake is found in Siberian Russia. _____
8. This river forms part of the border between eastern China and Russia. _____
9. This large island off Russia's east coast has at times been claimed by Japan.

10. Saint Petersburg is a major city found in this country. _____
11. This chain of mountains is located between the Black and Caspian seas.

12. T'bilisi is the capital city of this nation. _____
13. This sea is located east of Russia and west of Alaska. _____

(continued)

Name _____ Date _____

EUROPE AND NORTHERN ASIA

Russia and Eurasia (*continued*)

14. Name the large peninsula that extends into the Arctic Ocean at 100° East Longitude. _ _ _ _ _
15. Volgograd is located on this Russian river. _ _ _ _ _
16. The Ural River empties into this body of water. _ _ _ _ _
17. Latvia, Lithuania, and this country separate Russia from the Baltic Sea.
_ _ _ _ _
18. Lake Balkhash is located in this country. _ _ _ _ _
19. Russia controls these islands which lie northeast of Japan. _ _ _ _ _
20. This large body of water is south of Ukraine. _ _ _ _ _

Name _____ Date _____

EUROPE AND NORTHERN ASIA

Review

Directions: Twenty features are listed below. To the right of each feature write a clue that would help others locate it. If the term were Azerbaijan, for example, a clue might be: This country is east of Georgia. Or: This nation is south of Russia and west of the Caspian Sea.

1. Ural Mountains _____
2. Belgium _____
3. Dardanelles _____
4. Switzerland _____
5. Norwegian Sea _____
6. Lake Baikal _____
7. Kiev _____
8. Seine River _____
9. Baltic Sea _____
10. Tyrrhenian Sea _____
11. Skagerrak _____
12. Warsaw _____
13. Dniester River _____
14. Carpathian Mountains _____
15. Belarus _____
16. Liechtenstein _____
17. Luxembourg _____
18. Caucasus Mountains _____
19. Rhone River _____
20. Lithuania _____



II. Asia

Terms for Asia

Students will use the following terms as they complete the study pages in this unit.

Afghanistan	Himalaya Mountains	Okhotsk, Sea of
Alma Ata	Honshu	Pacific Ocean
Altai Mountains	India	Pakistan
Andaman Islands	Indian Ocean	Philippines
Arabian Sea	Indonesia	Pyongyang
Aral Sea	Iran	Russia
Arctic Ocean	Islamabad	Ryukyu Islands
Ashkhabad	Japan	Sakhalin
Asia	Japan, Sea of	Seoul
Baikal, Lake	Japanese Islands	Shanghai
Balkhash, Lake	Kabul	Siberia
Bangkok	Kamchatka Peninsula	South China Sea
Bangladesh	Kazakhstan	South Korea
Beijing	Korean Peninsula	Sri Lanka
Bengal, Bay of	Kuala Lumpur	Sumatra
Bering Sea	Kuril Islands	Syria
Bhutan	Kyrgyzstan	Taipei
Bishkek	Laos	Taiwan
Bombay	Lena River	Tajikistan
Borneo	Macau (Macao)	Thailand
Calcutta	Madras	Tibet
Cambodia	Malaysia	Tokyo
Canton	Manila	Turkmenistan
Caspian Sea	Mekong	Ulan Bator
Celebes	Mindanao	Uzbekistan
China	Mongolia	Vientiane
Dhaka	Myanmar (Burma)	Vietnam
East China Sea	Nanjing	Yangon
Everest	Nepal	Yangtze River
Ganges River	New Delhi	Yellow River
Gobi Desert	North America	Yellow Sea
Hanoi	North Korea	

Name _____ Date _____

ASIA

Pretest


Directions: Answer as many questions about Asia's geography as you can without using a map or an atlas. Write each answer in the space provided.

1. Beijing is the capital of which Asian nation? _____
2. Which ocean is north of Russia? _____
3. Which large nation is located between Pakistan and Bangladesh? _____
4. Which huge desert extends from China into Mongolia? _____
5. Which is the only nation bordering both China and South Korea? _____
6. Tokyo is the capital city of which nation? _____
7. Which nation borders both the Arctic and Pacific oceans? _____
8. What mountain range is found between China and India? _____
9. What is the capital of Vietnam? _____
10. The Yangtze and Yellow rivers flow through which nation? _____
11. New Delhi, Calcutta, and Bombay are cities found in which nation? _____
12. Which large sea borders both India and Pakistan? _____
13. Which ocean borders Japan and the Philippines? _____
14. Lake Baikal is in which nation? _____
15. Taipei is the capital of which island nation? _____
16. Which ocean is south of Sri Lanka and India? _____
17. Manila is the capital of which island nation? _____
18. Which nation borders Pakistan, Tajikistan, and Iran? _____
19. What is Thailand's capital city? _____
20. What is Asia's largest inland sea? _____

Name _____ Date _____

ASIA

Political Features Puzzle



ASIA

Political Features—Clues

Directions: Each clue below will help you find a correct answer for the Political Features Puzzle. Write each answer in the spaces provided. Make sure all answers interlock correctly.

Across

1. Capital city of Thailand
4. Capital city north of the Gobi Desert
6. Country that borders Vietnam on the west
8. Capital city of Afghanistan
9. Country whose capital is Tokyo
11. Pakistan's capital city
13. City south of the Chinese city of Canton
14. Capital city of Vietnam
17. Nation between India and Afghanistan
18. Nation located east of the island of Sumatra

Down

1. Nation located at the mouth of the Ganges River
2. Malaysia's capital city
3. Nation whose capital city is Ashkhabad
5. Inland nation that borders Pakistan
7. Country that has Seoul as its capital city
10. Nation south of Laos and west of Vietnam
11. Nation that includes the island of Sumatra
12. Country that shares Myanmar's (Burma's) southern border
15. Nation north of Mongolia
16. Nation south of Mongolia

Name _____ Date _____

ASIA

Physical Features Puzzle

1. _ _ _ _ _ [_]
2. _ _ _ _ [_] _ _ _ _
3. _ [_] _ _ _ _
4. _ _ _ [_] _ _ _ _ _
5. _ [_] _ _ _ _ _
6. [_] _ _ _ _ _
7. _ _ _ [_] _ _
8. _ [_] _ _ _ _ _ _ _
9. _ _ _ [_] _ _
10. _ _ _ _ [_] _ _
11. [_] _ _ _ _ _
12. _ [_] _ _ _ _ _ _ _ _ _
13. _ _ [_] _ _ _
14. _ _ _ [_] _ _ _ _ _
15. _ _ _ _ [_] _ _ _ _
16. _ [_] _ _ _ _ _
17. [_] _ _ _ _ _ _ _
18. _ _ _ _ [_]
19. [_] _ _ _ _

ASIA

Physical Features—Clues

Directions: Use each clue to help locate the physical feature described. Write the name of that feature in the spaces provided. When you finish, the boxed letters will spell a phrase related to this puzzle.

1. Asia's tallest mountain, located in the Himalayas
2. Peninsula that separates the Bering Sea from the Sea of Okhotsk
3. River that flows through Cambodia and empties into the South China Sea
4. Body of water that separates the Korean Peninsula from China
5. Chinese river that flows east through the city of Nanjing
6. Islands between Taiwan and the Japanese islands
7. Bay bordering India on the east
8. Body of water that separates northern Asia from North America
9. Japan's largest island
10. Sea north of the Kuril Islands
11. Sea located south of the island of Mindanao and east of Borneo
12. Sea that separates Vietnam from the Philippines
13. River that flows through northern India and empties into the Bay of Bengal
14. Large body of water north of Asia
15. Large body of water south of Pakistan
16. Islands south of Myanmar (Burma)
17. Sea where Shanghai is found
18. Sea that borders North and South Korea on the east
19. Large plateau north of Nepal

ASIA

Locating Features by Direction and Distance

Directions: Use the direction and distance clues to help locate the features they describe. Write the name of each feature in the space provided.

1. This nation is located south of Afghanistan and west of India. _____
2. This sea is east of South Korea and northwest of Japan. _____
3. This nation is south of Laos and southeast of Thailand. _____
4. This nation is found 300 miles north of Bishkek, Kyrgyzstan. _____
5. This nation is 400 miles north of Hanoi, Vietnam. _____
6. This nation is 400 miles south of the city of Madras, India. _____
7. About 700 miles west of Lake Balkhash is this major body of water. _____
8. These mountains are 800 miles west of Ulan Bator, Mongolia. _____
9. This body of salt water is 400 miles west of Yangon, Myanmar (Burma), and 400 miles south of Dhaka, Bangladesh. _____
10. This nation is south of Uzbekistan and northwest of Pakistan. _____
11. This capital city is located 700 miles east of Seoul, South Korea. _____
12. This major body of water is 300 miles north of the capital of Mongolia.

13. The capital of this island nation is 700 miles north of Manila, Philippines.

14. This nation is located south of Thailand and north of Indonesia. _____
15. This capital city is 1,450 miles northeast of Hanoi, Vietnam, and 500 miles west of Pyongyang, North Korea. _____
16. This body of water is 500 miles west of Manila, Philippines. _____
17. This small nation is 275 miles north of Dhaka, Bangladesh. _____
18. This large nation is located 1,200 miles north of Alma Ata, Kazakhstan. _____
19. This island is 1,100 miles north and a bit east of Tokyo, Japan. _____
20. This small, mountainous nation is less than 100 miles west of Bhutan. _____

ASIA

Locating Features Using Latitude and Longitude

Directions: Use the latitude and longitude figures given to locate the feature described. Name that feature in the space provided. The term in parentheses tells what sort of feature you are locating.

- | | |
|-----------------------|---|
| 1. _____ (ocean) | 20° North Latitude, 140° East Longitude |
| 2. _____ (sea) | 14° North Latitude, 65° East Longitude |
| 3. _____ (nation) | 21° North Latitude, 81° East Longitude |
| 4. _____ (nation) | 60° North Latitude, 115° East Longitude |
| 5. _____ (nation) | 33° North Latitude, 110° East Longitude |
| 6. _____ (ocean) | 80° North Latitude, 80° East Longitude |
| 7. _____ (nation) | 28° North Latitude, 65° East Longitude |
| 8. _____ (sea) | 15° North Latitude, 115° East Longitude |
| 9. _____ (mountains) | 30° North Latitude, 82° East Longitude |
| 10. _____ (nation) | 5° North Latitude, 103° East Longitude |
| 11. _____ (mountains) | 47° North Latitude, 90° East Longitude |
| 12. _____ (sea) | 36° North Latitude, 125° East Longitude |
| 13. _____ (nation) | 22° North Latitude, 96° East Longitude |
| 14. _____ (sea) | 40° North Latitude, 51° East Longitude |
| 15. _____ (ocean) | 3° North Latitude, 65° East Longitude |
| 16. _____ (nation) | 46° North Latitude, 105° East Longitude |
| 17. _____ (city) | 37° North Latitude, 127° East Longitude |
| 18. _____ (city) | 35° North Latitude, 69° East Longitude |
| 19. _____ (city) | 40° North Latitude, 116° East Longitude |
| 20. _____ (city) | 36° North Latitude, 140° East Longitude |

Name _____ Date _____

ASIA

Review

Directions: Twenty features of Asia are listed below. To the right of each feature, write a clue that would help others locate it. If the term were Laos, for example, a clue might be: This nation is east of Thailand. Or: This nation's capital city is Vientiane.

1. Siberia _____
2. Gobi Desert _____
3. Kazakhstan _____
4. Ganges River _____
5. Arabian Sea _____
6. Seoul _____
7. Borneo _____
8. New Delhi _____
9. Indonesia _____
10. Lena River _____
11. Afghanistan _____
12. Kuala Lumpur _____
13. Bangladesh _____
14. Philippines _____
15. Yangtze River _____
16. Himalayas _____
17. Bering Sea _____
18. Manila _____
19. Kamchatka Peninsula _____
20. Syria _____

III. The Middle East

Terms for the Middle East

Students will use the following terms as they complete the study pages in this unit.

Abu Dhabi	Europe	Persian Gulf
Aden, Gulf of	Hormuz, Strait of	Pontic Mountains
Aegean Sea	Iran	Qatar
Africa	Iraq	Red Sea
Amman	Israel	Riyadh
Ankara	Istanbul	Rub' al Khali Desert
Aqaba, Gulf of	Jerusalem	Sahara
Arabian Peninsula	Jordan	Sanaa
Arabian Sea	Jordan River	Saudi Arabia
Ararat, Mount	Karun River	Shatt al Arab River
Asia	Kuwait	Sinai Peninsula
Baghdad	Kuwait City	Suez Canal
Bahrain	Lebanon	Suez, Gulf of
Beirut	Libya	Syria
Bosporus	Libyan Desert	Taurus Mountains
Cairo	Manama	Tehran
Caspian Sea	Marmara, Sea of	Tigris River
Cyprus	Mecca	Tripoli
Damascus	Mediterranean Sea	Turkey
Dardanelles	Muscat	United Arab Emirates
Dead Sea	Nicosia	Van, Lake
Doha	Negev	Yemen
Egypt	Nile River	Zagros Mountains
Elburz Mountains	Oman	
Euphrates River	Oman, Gulf of	

THE MIDDLE EAST

Pretest

Directions: Answer as many questions about the Middle East's geography as you can without using a map or atlas. Write each answer in the space provided.

1. What is the capital of Lebanon? _____
2. What is the capital of Egypt? _____
3. What is the country between Libya and the Red Sea? _____
4. What sea borders Egypt and Saudi Arabia? _____
5. What is the body of water between the Red Sea and the Arabian Sea?


6. What country is bordered by Turkey, Iraq, and Jordan? _____
7. What is the capital of Cyprus? _____
8. Which Middle Eastern nation has land in both Asia and Europe? _____
9. What is the name of the large desert in southern Saudi Arabia? _____
10. Which river forms much of the border between Israel and Jordan? _____
11. What small country is on a peninsula on the Strait of Hormuz? _____
12. What is the capital of the United Arab Emirates? _____
13. Parts of this desert are found in both Libya and Egypt. _____
14. Which European sea is bordered by six Middle Eastern nations? _____
15. What country borders both the Red Sea and the Persian Gulf? _____
16. What major river flows from south to north into the Mediterranean? _____
17. What is the capital of Iran? _____
18. What man-made body of water connects the Red Sea and the Mediterranean?

19. What sea lies between Israel and Jordan? _____
20. What is the largest desert in the world, stretching across most of northern Africa?

Name _____ Date _____

THE MIDDLE EAST

Political Features Puzzle



THE MIDDLE EAST

Political Features—Clues

Directions: Each clue below will help you find a correct answer for the Political Features Puzzle. Write each answer in the spaces provided. Make sure all answers interlock correctly.

Across

- 5. Country bordered by Saudi Arabia, Oman, and the Persian Gulf
- 7. Country east of the Jordan River
- 10. Holy city near the west coast of Saudi Arabia
- 11. Country bordered by Lebanon, Syria, and Jordan
- 14. Capital of Iraq
- 17. Capital of Kuwait
- 19. Nation that has land in both Europe and Asia
- 20. Capital of Syria

Down

- 1. The largest nation on the Arabian Peninsula
- 2. Country north of Israel
- 3. City on the West Bank of the Jordan River, between Israel and Jordan
- 4. Island nation whose capital is Manama
- 6. Nation north of Jordan and south of Turkey
- 8. Capital of Oman
- 9. Nation on a peninsula that extends into the Persian Gulf
- 12. Country between the Persian Gulf and the Caspian Sea
- 13. Capital of Iran
- 15. Country on the northwest coast of the Persian Gulf
- 16. Island nation west of Syria
- 18. Country whose capital is Sanaa

THE MIDDLE EAST

Physical Features—Clues

Directions: Use each clue to help locate the physical feature described. Write the name of that feature in the spaces provided. When you finish, the boxed letters will spell a phrase related to this puzzle.

1. Man-made waterway that helps separate Asia from Africa
2. Body of water separating European Turkey from Asiatic Turkey
3. Highest mountain in Turkey, near the Iranian border
4. Body of water west of Saudi Arabia and Yemen
5. Strait linking the Sea of Marmara and the Aegean Sea
6. The major river of Egypt
7. Strait on which Istanbul is located
8. Body of water that links Jordan to the sea
9. Mountains in northeastern Turkey
10. Large body of water southeast of Oman
11. Body of water in eastern Turkey
12. Desert found in both Egypt and Libya
13. Mountains in northern Iran
14. The easternmost of the two rivers that flow from Turkey to the Persian Gulf
15. Strait that connects the Persian Gulf and the Gulf of Oman
16. River into which the Tigris, Euphrates, and Karun rivers flow
17. The westernmost of the two rivers that flow from Turkey to the Persian Gulf
18. Peninsula between the Gulf of Suez and the Gulf of Aqaba
19. Body of water between the Strait of Hormuz and the Arabian Sea
20. Body of water bordered by Saudi Arabia, Kuwait, Iraq, and Iran

Name _____ Date _____

THE MIDDLE EAST

Physical Features Puzzle

1. _ _ _ _ [_] _ _ _ _
2. _ _ _ _ _ _ _ [_] _ _ _ _
3. _ _ _ _ _ [_] _ _ _ _ _
4. _ _ [_] _ _ _
5. _ _ _ _ _ _ [_] _ _ _
6. _ _ _ [_]
7. _ [_] _ _ _ _ _
8. _ _ _ [_] _ _ _ _ _ _ _
9. _ _ _ _ _ [_]
10. _ _ _ _ [_] _ _ _ _ _
11. _ _ _ _ [_] _ _
12. _ [_] _ _ _ _
13. _ [_] _ _ _ _
14. _ [_] _ _ _ _
15. _ _ _ _ _ [_]
16. _ _ _ _ _ _ _ [_] _ _ _
17. _ _ _ _ _ [_] _ _
18. _ [_] _ _ _
19. _ _ _ _ _ _ [_] _ _ _
20. _ _ _ _ _ [_] _ _ _ _

Name _____ Date _____

THE MIDDLE EAST

Locating Features by Direction and Distance

Directions: Use the direction and distance clues to help locate the features they describe. Write the name of each feature in the space provided.

1. This city is at the northwestern tip of Libya. _____
2. This capital is 50 miles northeast of Jerusalem. _____
3. This capital is 325 miles north of Cyprus and 230 miles southeast of Istanbul.

4. This country is west of the Persian Gulf, south of Iraq, and north of Saudi Arabia.

5. This country lies west of Egypt. _____
6. This city is 480 miles southwest of Riyadh and 780 miles southeast of Cairo.

7. This capital city is 720 miles south of Tehran, and 300 miles east of Riyadh.

8. This desert is in southern Israel. _____
9. These mountains run across southern Turkey. _____
10. This capital city is 495 miles southeast of Mecca. _____
11. This nation is south of Lebanon and west of Jordan. _____
12. This body of water lies east of Egypt and west of the Sinai Peninsula.

13. This capital is 90 miles northwest of Doha. _____
14. This nation lies north of Saudi Arabia and west of Iran. _____
15. This capital city is 270 miles southwest of Bahrain and 525 miles east of the Red Sea.

16. This nation is south of Saudi Arabia and west of Oman. _____
17. This nation is the easternmost island in the Mediterranean. _____
18. This body of water is 550 miles east of Ankara. _____
19. This body of water is about 400 miles south of Tehran. _____
20. This nation is 90 miles southeast of Qatar and 165 miles south of Iran. _____

Repro

THE MIDDLE EAST

Locating Features Using Latitude and Longitude

Directions: Use the latitude and longitude figures given to locate the feature described. Name that feature in the space provided. The term in parentheses tells what sort of feature you are locating.

1. _____ (mountain) 40° North Latitude, 44° East Longitude
2. _____ (strait) 40° North Latitude, 26° East Longitude
3. _____ (sea) 31° North Latitude, 35° East Longitude
4. _____ (mountains) 33° North Latitude, 47° East Longitude
5. _____ (city) 23° North Latitude, 58° East Longitude
6. _____ (canal) 29° North Latitude, 32° East Longitude
7. _____ (river) 30° North Latitude, 48° East Longitude
8. _____ (desert) 31° North Latitude, 35° East Longitude
9. _____ (city) 21° North Latitude, 40° East Longitude
10. _____ (nation) 27° North Latitude, 17° East Longitude
11. _____ (city) 25° North Latitude, 51° East Longitude
12. _____ (city) 33° North Latitude, 44° East Longitude
13. _____ (city) 15° North Latitude, 44° East Longitude
14. _____ (nation) 25° North Latitude, 51° East Longitude
15. _____ (nation) 26° North Latitude, 51° East Longitude
16. _____ (sea) 41° North Latitude, 28° East Longitude
17. _____ (nation) 31° North Latitude, 36° East Longitude
18. _____ (nation) 35° North Latitude, 38° East Longitude
19. _____ (city) 34° North Latitude, 35° East Longitude
20. _____ (city) 25° North Latitude, 47° East Longitude

Name _____ Date _____

THE MIDDLE EAST

Review

Directions: Eighteen features of the Middle East are listed below. To the right of each feature, write a clue that would help others locate it. For example, if the feature were Istanbul, the clue might be: This Turkish city has land in both Europe and Asia.

1. Tripoli _____
2. Libya _____
3. Negev _____
4. Taurus Mountains _____
5. Gulf of Suez _____
6. Cyprus _____
7. Iraq _____
8. Mediterranean _____
9. Manama _____
10. Amman _____
11. Doha _____
12. Riyadh _____
13. Sanaa _____
14. Ankara _____
15. Zagros Mountains _____
16. Qatar _____
17. Bahrain _____
18. Gulf of Oman _____

IV. Africa

Terms for Africa

Students will use the following terms as they complete the study pages in this unit.

Accra	Equator	Madagascar	Senegal
Addis Ababa	Eritrea	Malawi	Sidra, Gulf of
Africa	Ethiopia	Mali	Sierra Leone
Ahaggar	Europe	Mauritania	Somalia
Algeria	Gabon	Mediterranean Sea	South Africa
Algiers	Ghana	Mogadishu	Spain
Angola	Gibraltar, Strait of	Monrovia	Sudan
Arabian Desert	Gibraltar	Morocco	Suez Canal
Aswan High Dam	Good Hope, Cape of	Mozambique	Swaziland
Atlantic Ocean	Guinea	Mozambique Channel	Tanganyika
Atlas Mountains	Guinea, Gulf of	Nairobi	Tanganyika, Lake
Benin	Guinea-Bissau	Namib Desert	Tanzania
Blue Nile River	Harare	Namibia	Togo
Botswana	Indian Ocean	Nasser, Lake	Tripoli
Burundi	Ivory Coast	Niamey	Tunis
Cairo	Kalahari Desert	Niger	Tunisia
Cameroon	Kenya	Nigeria	Uganda
Cape Town	Khartoum	Nile River	Vaal River
Chad	Kigali	Nyasa, Lake (Lake	Victoria, Lake
Chad, Lake	Kilimanjaro	Malawi)	Windhoek
Congo	Liberia	Orange River	Zaire
Congo River	Libreville	Pretoria	Zambezi River
Dakar	Libya	Qattara Depression	Zambia
Dar es Salaam	Libyan Desert	Red Sea	Zimbabwe
Djibouti	Lilongwe	Rwanda	
Drakensberg Mountains	Limpopo River	Sahara Desert	
Egypt	Luanda	Saudi Arabia	

AFRICA

Pretest

Directions: Answer as many questions about Africa's geography as you can without using a map or an atlas. Write each answer in the space provided.

1. Which ocean is west of the African continent? _____
2. Which large island in the Indian Ocean is an African nation? _____
3. Which nation lies between Egypt and Algeria? _____
4. Which huge lake is shared by Uganda, Kenya, and Tanzania? _____
5. Addis Ababa is capital of which nation? _____
6. Cairo is the capital city of which nation? _____
7. Which sea lies between Africa and Saudi Arabia? _____
8. What is the name of the point of land at Africa's southern tip? _____
9. Which river is on the border between Congo and Zaire? _____
10. Which ocean is east of the continent of Africa? _____
11. Egypt controls which man-made waterway linking the Mediterranean and the Red seas?


12. What is Sudan's capital? _____
13. Which huge desert covers much of northern Africa? _____
14. What narrow neck of water separates Morocco from Spain, which is in Europe?

15. Which is Africa's most northern nation? _____
16. The Nile River empties into what major body of water? _____
17. Lake Nasser in Egypt and Sudan is formed by which river? _____
18. What is the largest African nation crossed by the Equator? _____
19. Nairobi is which nation's capital? _____
20. The cities of Cape Town and Pretoria are found in which nation? _____

Name _____ Date _____

AFRICA

Political Features Puzzle



AFRICA

Political Features Puzzle—Clues

Directions: Each clue on this page will help you find a correct answer for the Political Features Puzzle. Write the letters of each answer in the spaces provided. Make sure all answers interlock correctly.

Across

1. Country northeast of the city of Addis Ababa
3. Country east of Sudan
5. Country north of Guinea on the west coast of Africa
6. Country that borders South Africa and Mozambique
8. Country that borders Mauritania on the east
9. Country whose capital is Monrovia
12. Capital of Tunisia
13. Capital of Kenya
15. Nation on Botswana's northeastern border
16. Nation that borders Niger on the south
17. Nation whose capital is Pretoria

Down

1. Capital of Tanzania
2. Nation that borders Zambia on the northeast
3. Nation that borders Ethiopia on the north
4. Nation west of Ghana
7. Nation that borders Togo on the east
10. Nation whose capital is Kigali
11. Nation west of Congo
14. Nation south of Rwanda
15. Nation north of Angola

Name _____ Date _____

AFRICA

Physical Features Puzzle

1. _ _ _ _ [] _ _ _ _ _
2. _ _ _ _ _ [] _ _ _
3. _ _ _ _ _ [] _ _ _ _
4. _ _ _ _ _ [] _ _
5. _ _ _ _ _ [] _ _ _ _ _ _ _ _ _
6. _ _ _ _ _ []
7. _ _ _ _ _ [] _
8. _ _ _ _ _ []
9. _ _ _ _ _ _ _ [] _ _ _ _
10. _ _ _ _ _ [] _ _ _ _ _

11. _ _ _ _ _ _ _ [] _ _ _
12. _ _ _ _ []
13. _ _ _ _ [] _ _ _
14. _ _ _ [] _ _ _
15. _ _ _ _ _ []
16. _ _ _ _ [] _ _ _ _
17. _ _ _ _ [] _ _
18. _ _ _ [] _ _
19. _ [] _ _ _

AFRICA

Physical Features Puzzle—Clues

Directions: Use each clue to help locate the physical feature described. Write the name of that feature in the space provided. When you finish, the boxed letters will spell a phrase related to this puzzle.

1. The channel that separates Madagascar from mainland Africa
2. Lake between Tanzania and Zaire
3. Mountains found along South Africa's east coast
4. Strait that separates Morocco in Africa from Spain in Europe
5. Large body of water that separates Africa from Europe
6. Mountains in southeastern Algeria
7. Lake shared by Tanzania, Kenya, and Uganda
8. River that forms the border between South Africa and Zimbabwe
9. Large body of water on the coast of Togo, Cameroon, and Nigeria
10. The largest desert in Africa
11. Body of water off Madagascar's east coast
12. River that forms the border between Congo and Zaire
13. River that starts in Ethiopia and flows north
14. The depression that is Africa's lowest point
15. Desert located in Botswana
16. Desert located in Namibia
17. River bordering Zambia on the south
18. River into which the Vaal River flows from the north
19. Mountains located in the northwest corner of Africa

AFRICA

Locating Features by Direction and Distance

Directions: Use the direction and distance clues to help locate the features they describe. Write the name of each feature in the space provided.

1. This nation is north of Chad and west of Egypt. _____
2. This large lake is east of Zaire and west of Tanzania. _____
3. This island is 1,000 miles east of Harare, Zimbabwe. _____
4. This nation is north of South Africa and east of Namibia. _____
5. This capital city is about 400 miles east of Algiers, Algeria. _____
6. This major desert is 1,500 miles north of Libreville, Gabon. _____
7. This body of water is 1,000 miles west of Luanda, Angola. _____
8. This body of water is east of Mozambique and west of Madagascar. _____
9. This nation is 1,000 miles south of Cairo, Egypt. _____
10. These mountains are 1,400 miles north of Niamey, Niger. _____
11. This major body of water is about 100 miles east of Lilongwe, Malawi.

12. This capital city is about 300 miles south and a bit east of Tunis, Tunisia.

13. This large inland body of water is north of Tanzania and south of Uganda.

14. This desert is about 400 miles northwest of Pretoria, South Africa.

15. This major body of salt water is 800 miles east of Nairobi, Kenya. _____
16. This nation is 900 miles west of Khartoum, Sudan. _____
17. This nation is west of Nigeria and east of Togo. _____
18. This country is west of Mali and southwest of Mauritania. _____
19. This desert is about 200 miles southwest of Windhoek, Namibia.

20. This African nation is located south of Sudan and west of Kenya.

AFRICA

Locating Features Using Latitude and Longitude

Directions: Use the latitude and longitude figures given to locate the feature described. Name that feature in the space provided. The term in parentheses tells what sort of feature you are locating.

- | | |
|----------------------|--|
| 1. _____ (nation) | 2° South Latitude, 30° East Longitude |
| 2. _____ (nation) | 30° North Latitude, 5° East Longitude |
| 3. _____ (lake) | 1° South Latitude, 34° East Longitude |
| 4. _____ (desert) | 23° North Latitude, 10° East Longitude |
| 5. _____ (nation) | 6° North Latitude, 9° West Longitude |
| 6. _____ (nation) | 20° South Latitude, 46° East Longitude |
| 7. _____ (nation) | 0° Latitude, 12° East Longitude |
| 8. _____ (sea) | 20° North Latitude, 39° East Longitude |
| 9. _____ (ocean) | 10° South Latitude, 70° East Longitude |
| 10. _____ (desert) | 25° North Latitude, 34° East Longitude |
| 11. _____ (nation) | 20° South Latitude, 23° East Longitude |
| 12. _____ (mountain) | 3° South Latitude, 37° East Longitude |
| 13. _____ (nation) | 15° South Latitude, 25° East Longitude |
| 14. _____ (lake) | 14° North Latitude, 14° East Longitude |
| 15. _____ (nation) | 20° North Latitude, 10° West Longitude |
| 16. _____ (nation) | 20° South Latitude, 30° East Longitude |
| 17. _____ (city) | 30° North Latitude, 32° East Longitude |
| 18. _____ (city) | 2° North Latitude, 45° East Longitude |
| 19. _____ (city) | 25° South Latitude, 28° East Longitude |
| 20. _____ (city) | 15° North Latitude, 17° West Longitude |

Name _____ Date _____

AFRICA

Review

Directions: Twenty features of Africa are listed below. To the right of each feature, write a clue that would help others locate it. If the term were Lake Nasser, for example, a clue might be: This lake is formed by the Aswan High Dam on the Nile River. Or: This large lake is shared by Egypt and Sudan.

1. Congo River _____
2. Lake Victoria _____
3. Mali _____
4. Atlas Mountains _____
5. Accra _____
6. Lake Chad _____
7. Ethiopia _____
8. Zambezi River _____
9. Morocco _____
10. Tripoli _____
11. Kalahari Desert _____
12. Sierra Leone _____
13. Burundi _____
14. Limpopo River _____
15. Liberia _____
16. Cameroon _____
17. Gulf of Guinea _____
18. Nile River _____
19. Gulf of Sidra _____
20. Libyan Desert _____

V. Australia and the Pacific Islands

Terms for Australia and the Pacific Islands

Students will use the following terms as they complete the study pages in this unit.

Adelaide	Cook, Mount	Kermadec Islands	Port Moresby
Alice Springs	Cook Islands	Kimberley	Queensland
Arafura Sea	Coral Sea	Kosciusko, Mount	Santa Cruz Islands
Arnhem Land	Darling River	Leeuwin, Cape	Shanghai
Australia	Darwin	Lord Howe Islands	Society Islands
Australian Alps	Eyre	Loyalty Islands	Solomon Islands
Ayers Rock	Fiji	Mariana Islands	South Australia
Barrier Reef	Fremantle	Marquesas	South Island
Bass Strait	Gawler Ranges	Marshall Islands	Stewart Island
Bikini	Great Artesian Basin	Melbourne	Sydney
Borneo	Great Australian Bight	Melville Island	Tahiti
Botany Bay	Great Barrier Reef	Midway	Tasmania
Bounty Island	Great Dividing Range	Murray River	Tasman Sea
Brisbane	Great Sandy Desert	New Britain Island	Timor Sea
Broken Hill	Great Victoria Desert	New Caledonia	Tonga
Cairns	Guam	New Guinea	Townsville
Canberra	Halifax Bay	New South Wales	Tropic of Capricorn
Cape York Peninsula	Hawaii	New Zealand	Vanuatu
Capricorn Channel	Hobart	Northern Territory	Victoria
Caroline Islands	Indian Ocean	North Island	Wake Island
Carpentaria, Gulf of	Indonesia	Nullarbor Plain	Wellington
Celebes	International Date Line	Pacific Ocean	Western Australia
China	Jakarta	Papua New Guinea	Western Samoa
Christchurch	Java	Perth	
Christmas Island	Kalgoorlie	Philippine Islands	
Clarence Strait	Kangaroo Island	Pitcairn Island	

AUSTRALIA AND THE PACIFIC ISLANDS

Pretest

Directions: Answer as many questions about Australia and the Pacific Islands geography as you can without using a map or an atlas. Write each answer in the space provided.

1. Which ocean is found west of Australia? _____
2. Which Australian state is an island? _____
3. Which island nation is east of the city of Melbourne in southeastern Australia?

4. Which ocean is east of Australia? _____
5. What is the only nation that occupies an entire continent? _____
6. What is Australia's national capital? _____
7. What mountain range runs from north to south across Australia? _____
8. Melbourne is the capital of which Australian state? _____
9. The islands of Java, Celebes, and part of New Guinea belong to which island nation?

10. Which major reef lies between Australia and the Coral Sea? _____
11. Much of the Great Sandy Desert is found in which Australian state? _____
12. What city is the capital and a major port for the Australian state of New South Wales?

13. Which sea is between Australia and the Solomon Islands? _____
14. Fiji and Western Samoa are surrounded by which ocean? _____
15. What is Indonesia's capital? _____
16. The Great Australian Bight and Timor Sea both join which ocean? _____
17. Which mountain range is just west of Canberra and is part of the Great Dividing Range?


18. What is the capital of the Australian State of Queensland? _____
19. What is New Zealand's capital city? _____
20. The major part of Papua New Guinea is on which large island? _____

Name _____ Date _____

AUSTRALIA AND THE PACIFIC ISLANDS

Political Features Puzzle

Directions: Each clue on the following page will lead you to a correct answer for the Political Features Puzzle. Write the letters of each answer in the spaces provided. Make sure all answers interlock correctly.



AUSTRALIA AND THE PACIFIC ISLANDS

Political Features—Clues

Across

1. Capital of South Australia
3. Queensland's capital
6. A major city on the north coast of Northern Territory
9. City on the east coast on Halifax Bay
15. State that touches both Queensland and New South Wales
16. The major town north of Townsville on the east coast of Australia
17. The Australian state where the towns of Fremantle and Kalgoorlie are found
18. Capital city found on Botany Bay
19. Island state south of the state of Victoria
20. Island east of Shanghai, China, near the International Date Line

Down

1. Town in the southern part of Northern Territory
2. Country located northwest of the city of Darwin
4. Town located west of the Darling River in New South Wales
5. Area whose capital is Darwin
7. State surrounding Canberra
8. Capital city of Victoria
10. State nearest Tasmania
11. Capital of Tasmania
12. State west of the Great Barrier Reef
13. Largest city on the west coast
14. Capital of Australia
18. Group of islands that includes Tahiti

Name _____ Date _____

AUSTRALIA AND THE PACIFIC ISLANDS

Physical Features Puzzle

1. _ _ _ _ _ _ _ _ [_] _ _ _ _ _ _ _ _ _ _
2. _ _ _ [_] _ _ _ _ _ _
3. _ _ _ [_]
4. _ _ _ [_] _ _ _ _ _
5. _ _ _ [_] _ _ _ _
6. [_] _ _ _ _ _ _ _ _
7. _ _ _ _ _ _ _ [_] _ _ _ _ _
8. _ _ _ _ _ _ [_] _ _ _ _ _ _ _ _ _ _
9. _ _ _ _ _ [_] _ _ _ _ _
10. _ _ _ [_]
11. _ _ _ _ _ _ _ _ [_] _ _ _ _
12. _ _ _ _ _ [_] _ _ _ _
13. _ _ [_] _ _ _ _ _ _ _ _
14. _ _ _ _ _ _ _ _ _ [_] _ _ _
15. _ _ _ _ [_] _ _
16. _ _ _ _ _ [_] _ _
17. _ _ _ _ [_] _ _ _ _ _
18. _ _ _ _ _ [_] _ _ _
19. [_] _ _ _ _ _ _
20. _ _ _ _ _ _ _ _ [_] _ _
21. _ _ _ [_] _ _

AUSTRALIA AND THE PACIFIC ISLANDS

Physical Features—Clues

Directions: Use each clue to help locate the physical feature described. Write the name of that feature in the spaces provided. When you finish, the boxed letters will spell a phrase related to this puzzle.

1. Body of water south of Nullarbor Plain
2. Area found along the coast in Northern Territory
3. Island west of Hawaii, east of the Mariana Islands, and north of Bikini
4. Mountain in New South Wales that is the highest point in Australia
5. Body of water between Northern Territory and Indonesia
6. Plain shared by Western Australia and South Australia
7. Basin in southwestern Queensland
8. Mountains along the east coast of Australia
9. Gulf between Cape York Peninsula and Arnhem Land
10. Peninsula south of Gawler Ranges in South Australia
11. Mountains west of Canberra
12. Narrow body of water between Victoria and Tasmania
13. Body of water west of Australia and Indonesia
14. Desert located north of Nullarbor Plain
15. Cape found in southwestern Western Australia
16. Strait between the city of Darwin and Melville Island
17. Body of water north of Arnhem Land in Northern Territory
18. Body of water off southern New South Wales
19. River that joins the Murray River from the north
20. The great coral buildup off the coast of Queensland
21. River that forms the border between Victoria and New South Wales

Name _____ Date _____

AUSTRALIA AND THE PACIFIC ISLANDS

Locating Features by Direction and Distance

Directions: Use the direction and distance clues to help locate the features they describe. Write the name of each feature in the space provided.

1. This Australian state is east of South Australia and north of Victoria. _____
2. This peninsula is west of the Coral Sea and east of the Gulf of Carpentaria.

3. This sea is 400 miles west of Darwin, Northern Territory. _____
4. This sea is 500 miles east of Canberra, Australia. _____
5. This major New Zealand island is 100 miles southwest of Wellington, New Zealand.

6. This state capital is a little less than 200 miles northeast of Canberra, Australia.

7. This sea is 700 miles west of the island nation of Vanuatu. _____
8. This state is east of Northern Territory and northeast of South Australia.

9. This island state is 300 miles south of the city of Melbourne. _____
10. This large island is 300 miles north of Cape York. _____
11. This state capital is 800 miles south of the town of Alice Springs, Northern Territory.

12. This strait is 200 miles north of Hobart, Tasmania. _____
13. This island nation is east of Papua New Guinea and northwest of Vanuatu.

14. This island nation is southwest of Western Samoa and northwest of Tonga.

15. These tiny islands are 500 miles northeast of the city of Sydney. _____

(continued)

Name _____ Date _____

AUSTRALIA AND THE PACIFIC ISLANDS

**Locating Features by Direction and
Distance (*continued*)**

16. This island is about 700 miles east of the southern end of the Great Barrier Reef.

17. This capital city is 1,650 miles southwest of the city of Darwin, Northern Territory.

18. This body of water is 800 miles northwest of the capital city of Adelaide.

19. This sea is east of the Timor Sea and north of the Gulf of Carpentaria.

20. This nation is 2,000 miles southeast of the island of Borneo in Indonesia.

AUSTRALIA AND THE PACIFIC ISLANDS

Locating Features Using Latitude and Longitude

Directions: Use the latitude and longitude figures given to locate the feature described. Name that feature in the space provided. The term in parentheses tells what sort of feature you are locating.

- | | |
|----------------------|---|
| 1. _____ (island) | 18° South Latitude, 150° West Longitude |
| 2. _____ (strait) | 40° South Latitude, 145° East Longitude |
| 3. _____ (gulf) | 15° South Latitude, 140° East Longitude |
| 4. _____ (channel) | 22° South Latitude, 152° East Longitude |
| 5. _____ (island) | 36° South Latitude, 137° East Longitude |
| 6. _____ (peninsula) | 12° South Latitude, 143° East Longitude |
| 7. _____ (mountain) | 43° South Latitude, 170° East Longitude |
| 8. _____ (island) | 12° South Latitude, 132° East Longitude |
| 9. _____ (mountain) | 26° South Latitude, 132° East Longitude |
| 10. _____ (island) | 14° South Latitude, 173° West Longitude |
| 11. _____ (sea) | 15° South Latitude, 160° East Longitude |
| 12. _____ (island) | 37° South Latitude, 175° East Longitude |
| 13. _____ (river) | 34° South Latitude, 140° East Longitude |
| 14. _____ (desert) | 20° South Latitude, 125° East Longitude |
| 15. _____ (plateau) | 17° South Latitude, 127° East Longitude |
| 16. _____ (bay) | 34° South Latitude, 151° East Longitude |
| 17. _____ (city) | 23° South Latitude, 134° East Longitude |
| 18. _____ (city) | 37° South Latitude, 145° East Longitude |
| 19. _____ (city) | 44° South Latitude, 147° East Longitude |
| 20. _____ (city) | 32° South Latitude, 116° East Longitude |

AUSTRALIA AND THE PACIFIC ISLANDS

All at Sea: The Pacific Islands

Directions: Read each statement. Decide which political or physical feature the statement describes. Write the name of that feature in the spaces provided. One letter fills each space.

1. This group of islands is found north of New Guinea and east of the Philippines.

2. These islands are found east of Papua New Guinea. _____
3. This large island is found east of Papua New Guinea.

4. This island lies east of the Great Barrier Reef. _____
5. These islands lie northeast of North Island, New Zealand. _____
6. These islands are northeast of the Loyalty Islands. _____
7. This island lies southwest of Western Samoa. _____
8. These islands are east of the Philippines. _____
9. This island is southeast of Tahiti and south of the Tropic of Capricorn.

10. This island is found east of Shanghai, China, near the International Date Line.

11. This island is west of Hawaii, east of the Mariana Islands, and north of Bikini.

12. These islands are east of the Caroline Islands. _____
13. These islands are found southwest of Tahiti and east of Tonga. _____
14. Tahiti is part of a group of islands called this. _____
15. These islands are found east of New South Wales, Australia, in the Tasman Sea.

16. This island is south of Christchurch, New Zealand. _____
17. This island is found 13° North Latitude, 145° East Longitude. _____
18. This island is south of South Island, New Zealand. _____
19. This island claimed by Australia lies south of Java. _____
20. These islands are found 10° South Latitude, 140° West Longitude.

Name _____ Date _____

AUSTRALIA AND THE PACIFIC ISLANDS

Review

Directions: Twenty features of Australia and the Pacific Islands are listed below. To the right of each one, write a clue that would help others locate the feature. If the feature were Australian Alps, for example, a clue might be: These are part of the Great Dividing Range. Or: These mountains are in eastern Victoria and southeastern New South Wales.

1. Queensland _____
2. Timor Sea _____
3. North Island _____
4. Great Victoria Desert _____
5. Coral Sea _____
6. Christchurch _____
7. Tasmania _____
8. Cape York Peninsula _____
9. Tasman Sea _____
10. Perth _____
11. Indonesia _____
12. Western Australia _____
13. Canberra _____
14. Bass Strait _____
15. Port Moresby _____
16. Great Barrier Reef _____
17. Santa Cruz Islands _____
18. Murray River _____
19. Brisbane _____
20. Ayers Rock _____

VI. Antarctica

Terms for Antarctica

Students will use the following terms as they complete the study pages in this unit.

Adare, Cape	Marie Byrd Land
Adelaide Island	McMurdo Sound
Africa	McMurdo Station
American Highland	Pacific Ocean
Amundsen Sea	Princess Martha Coast
Antarctica	Queen Maud Land
Antarctic Circle	Ronne Ice Shelf
Antarctic Ocean	Ross Ice Shelf
Antarctic Peninsula	Ross Island
Atlantic Ocean	Ross Sea
Australia	Shackleton Ice Shelf
Bellingshausen Sea	South America
Boothby, Cape	South Orkney Islands
Drake Passage	South Pole
East Antarctica	South Shetland Islands
Ellsworth Mountains	Transantarctic Mountains
Enderby Land	Victoria Land
Erebus, Mount	Vinson Massif
Good Hope, Cape of	Walgreen Coast
Horn, Cape	Weddell Sea
Indian Ocean	West Antarctica
Lambert Glacier	Wilkes Land
Larsen Ice Shelf	

ANTARCTICA

Pretest

Directions: Answer as many questions about Antarctica's geography as you can without using a map or an atlas. Write each answer in the space provided.

1. What continent is located south of Australia, Africa, and South America?

2. What Antarctic islands are closest to South America? _____
3. Into what two major parts is Antarctica divided? _____
4. Which part of Antarctica faces Africa and Australia? _____
5. Which part of Antarctica faces the Pacific Ocean and South America?

6. In which of the two major parts of Antarctica is the South Pole located?

7. What mountain range crosses the continent of Antarctica? _____
8. What two large seas are in West Antarctica? _____
9. What is Antarctica's highest mountain? _____
10. What fingerlike piece of land extends northward from Antarctica toward South America?

11. What are the areas of the Pacific, Atlantic, and Indian oceans that surround Antarctica sometimes called? _____
12. At what point in Antarctica do all the earth's lines of longitude meet?

13. What imaginary line forms the northern boundary of most of Antarctica?

14. What ice shelf covers the southern part of the Ross Sea? _____
15. What is the name of the land that borders the western shore of the Ross Sea?

16. What body of water separates the northernmost part of Antarctica from South America?


17. America's McMurdo Naval Air Station on Antarctica is closest to which other continent?

18. What land in Antarctica is directly south of Africa? _____

Name _____ Date _____

ANTARCTICA

Physical Features Puzzle



ANTARCTICA

Physical Features—Clues

Directions: Each clue on this page will help you find a correct answer for the Physical Features of Antarctica Puzzle. Write the letters of each answer in the spaces provided. Make sure all answers interlock correctly.

Across

1. Body of water off the Walgreen Coast
3. Land where the Shackleton Ice Shelf is found
6. Coast bordering the Amundsen Sea
8. Body of water bordering the Ross Ice Shelf and McMurdo Sound
10. Body of water north of the Ellsworth Mountains
11. Highest mountain in Antarctica
12. Passage between Cape Horn and the Antarctic Peninsula
13. Cape on the coast of Victoria Land

Down

2. Mountains south of the Bellingshausen Sea
3. Body of water south of the Ronne Ice Shelf
4. Ice shelf on the Antarctic Peninsula
5. Land where Cape Boothby is found
7. The coldest continent
9. The point where all the earth's lines of longitude meet

ANTARCTICA

Locating Features by Direction and Distance

Directions: Use the directions and distance clues to help locate the features they describe. Write the name of each feature in the space provided.

1. This ice shelf is approximately 2,000 miles northwest of McMurdo Sound.

2. These islands are about 740 miles northeast of the Larsen Ice Shelf.

3. This mountain is about 600 miles southwest of Adelaide Island. _____
4. These islands are about 600 miles southeast of Cape Horn. _____
5. This land is about 1,800 miles southeast of the Shackleton Ice Shelf.

6. This island is 600 miles southwest of Cape Adare. _____
7. This mountain is 480 miles south of Cape Adare. _____
8. This glacier is located approximately 4,000 miles west of Cape Adare.

9. This land is located 2,300 miles south of the Cape of Good Hope, Africa.

10. This geographic point is approximately 1,600 miles south of the Antarctic Circle.

11. This highland is located about 4,000 miles west of Cape Adare. _____
12. The tip of this peninsula is about 900 miles southeast of Cape Horn, South America.

13. This mountain range is about 300 miles north of the South Pole. _____
14. This land is east of the American Highland and west of Victoria Land.

ANTARCTICA

Locating Features Using Latitude and Longitude

Directions: Use the latitude and longitude figures given to locate the feature described. Name that feature in the space provided. The term in parentheses tells what sort of feature you are locating.

- | | |
|-----------------------|---|
| 1. _____ (islands) | 62° South Latitude, 60° West Longitude |
| 2. _____ (cape) | 72° South Latitude, 170° East Longitude |
| 3. _____ (sea) | 74° South Latitude, 110° West Longitude |
| 4. _____ (station) | 72° South Latitude, 166° East Longitude |
| 5. _____ (mountain) | 78° South Latitude, 87° West Longitude |
| 6. _____ (island) | 67° South Latitude, 68° West Longitude |
| 7. _____ (cape) | 66° South Latitude, 57° East Longitude |
| 8. _____ (mountain) | 77° South Latitude, 167° East Longitude |
| 9. _____ (sound) | 77° South Latitude, 165° East Longitude |
| 10. _____ (ice shelf) | 67° South Latitude, 63° West Longitude |
| 11. _____ (sea) | 72° South Latitude, 85° West Longitude |
| 12. _____ (islands) | 61° South Latitude, 45° West Longitude |
| 13. _____ (mountains) | 80° South Latitude, 85° West Longitude |
| 14. _____ (ice shelf) | 66° South Latitude, 100° East Longitude |
| 15. _____ (circle) | 66° South Latitude, all longitude lines |

ANTARCTICA

Land of Adventure

The continent of Antarctica is a land waiting to be completely explored. Its many mysteries fascinate scientists.

Directions: Read each statement. Decide which feature is described. Write the name of that feature in the space provided. Use the letters in parentheses at the end of the statement to spell your answer.

1. This is the body of water between Cape Horn in South America and the Antarctic Peninsula.
_____ (ADEKR AAEGPSS)
2. This body of water is found off the Walgreen Coast. _____
(ADEMNNSU AES)
3. Cape Adare is found along the coast of this land. _____
(ACHORTV)
4. This land lies east of the Ross Ice Shelf. _____
(AEIMR BDRY)
5. This body of water is found off the coast of the Ross Ice Shelf. _____
(ORSS AES)
6. Wilkes Land is near this highland. _____
(AACEIMNR)
7. These mountains are found south of Bellingshausen Sea. _____
(EHLORSTW)
8. Shackleton Ice Shelf is found off the coast of this land. _____
(EIKLSW)
9. This is located between Victoria Land and Marie Byrd Land. _____
(ORSS CEI EFHLS)
10. The Weddell Sea is north of this ice shelf. _____
(ENNOR)
11. These islands are north of the Antarctic Peninsula. _____
(HOSTU ADEHLNST)
12. Cape Boothby is found on the coast of this land. _____
(BDEENRY)

(continued)

Name _____ Date _____

ANTARCTICA

Land of Adventure (*continued*)

13. These islands are found northeast of the South Shetland Islands.
_____ (HOSTU EKNORY)
14. This is the tallest mountain in Antarctica. _____
(INNOSV AFIMSS)
15. This sea is found west of the Antarctic Peninsula. _____
(ABEEGHILLNNSSU)
16. This body of water is found east of the Antarctic Peninsula. _____
(DDEELLW AES)
17. Princess Martha Coast is found along this land. _____
(EENQU ADMU)
18. This piece of land extends closest to South America. _____
(AACCINRTT AEILNNPSU)
19. This island is found west of the Antarctic Peninsula. _____
(AADDEEIL)
20. This ice shelf is found on the eastern side of the Antarctic Peninsula. _____
(AELNRS)

Name _____ Date _____

ANTARCTICA

Review

Directions: Twenty features of Antarctica are listed below. To the right of each one, write a clue that would help others locate the feature. If the feature were the Larsen Ice Shelf, for example, a clue might be: This feature is on the eastern side of the Antarctic Peninsula. Or: This ice shelf is west of the Weddell Sea.

1. Shackleton Ice Shelf _____
2. McMurdo Sound _____
3. Cape Adare _____
4. South Pole _____
5. Enderby Land _____
6. American Highland _____
7. Vinson Massif _____
8. Ross Ice Shelf _____
9. Cape Boothby _____
10. Mount Erebus _____
11. Victoria Land _____
12. Drake Passage _____
13. Wilkes Land _____
14. Amundsen Sea _____
15. West Antarctica _____
16. Walgreen Coast _____
17. South Shetland Islands _____
18. Transantarctic Mountains _____
19. Lambert Glacier _____
20. Antarctic Circle _____

VII. South America and the Caribbean

Terms for South America and the Caribbean

Students will use the following terms as they complete the study pages in this unit.

Aconcagua, Mount	Dominican Republic	Lima	Rio Tocantins
Amazon River	Ecuador	Manaus	Rio Uruguay
Andes Mountains	Equator	Maracaibo	San Juan
Argentina	Estuary	Maracaibo, Lake	Santiago
Asunción	Falkland Islands	Martinique	Santo Domingo
Atacama Desert	French Guiana	Medellin	São Paulo
Atlantic Ocean	Galápagos Islands	Montevideo	São Roque, Cape
Bahamas	Georgetown	Orinoco River	South America
Barbados	Gran Chaco	Pacific Ocean	South Georgia Island
Belém	Greater Antilles	Pampas	Strait of Magellan
Bogotá	Grenada	Panama	Sucre
Bolivia	Guadeloupe	Paraguay	Suriname
Brasília	Guayaquil	Paramaribo	Tierra del Fuego
Brazil	Guiana Highlands	Paraná	Titicaca, Lake
Brazilian Highlands	Gulf of Mexico	Patagonia	Trinidad and Tobago
Buenos Aires	Guyana	Peru	Uruguay
Caracas	Haiti	Point Aguja	Valparaíso
Caribbean Sea	Havana	Puerto Rico	Venezuela
Cayenne	Hispaniola	Quito	Virgin Islands
Central America	Horn, Cape	Recife	West Indies
Chile	Jamaica	Rio de Janeiro	Windward Islands
Colombia	Kingston	Río de la Plata	Windward Passage
Colorado River	La Paz	Rio Negro	
Cuba	Leeward Islands	Rio São Francisco	

Name _____ Date _____

SOUTH AMERICA AND THE CARIBBEAN

Pretest

Directions: Answer as many questions about South America's geography as you can without using a map or an atlas. Write each answer in the space provided.

1. What is South America's largest nation? _____
2. Which ocean is west of South America? _____
3. Buenos Aires is capital of which nation? _____
4. Which South American nation other than Paraguay has no seacoast?

5. Which ocean is found east of Brazil? _____
6. Which range of mountains runs beside the Pacific Ocean? _____
7. What is the huge river that crosses northern Brazil? _____
8. What is the name of the cape at South America's southern tip? _____
9. Which nation is located between Venezuela and Ecuador? _____
10. What is Brazil's capital city? _____
11. Which sea is north of Venezuela? _____
12. The Orinoco River flows across which nation? _____
13. What low-lying plain covers parts of Argentina, Paraguay, and Bolivia?

14. What is Peru's capital city? _____
15. Which nation is found between Uruguay and Chile? _____
16. Which nation borders all but two South American countries? _____
17. Which nation borders Panama, which is in Central America? _____
18. Which narrow desert is between the Andes Mountains and the Pacific Ocean?


19. Britain's Falkland Islands are nearest to which South American country?

20. What narrow body of water separates Tierra del Fuego from the South American continent?

Name _____ Date _____

SOUTH AMERICA AND THE CARIBBEAN

Political Features Puzzle



SOUTH AMERICA AND THE CARIBBEAN

Political Features—Clues

Directions: Each clue below will help you find a correct answer for the Political Features Puzzle. Write the letters of each answer in the spaces provided. Make sure all answers interlock correctly.

Across

1. Capital of Suriname
3. Country northwest of Paraguay
5. Brazil's most eastern major city
6. Chile's capital
7. Country whose capital is Montevideo
8. Country southwest of Colombia
10. Country in which Medellin is located
12. Guyana's capital
14. Major city on Ecuador's west coast
17. Large city found on Lake Maracaibo
18. Seaport city for Santiago
19. Island whose capital is San Juan

Down

1. Country south of Ecuador
2. South America's largest country
3. Capital of Colombia
4. Capital of Paraguay
5. Brazil's largest coastal city
9. Country whose capital is Buenos Aires
11. The largest city on the Amazon River
13. The capital city closest to the Equator
15. Capital of Peru
16. Country that occupies the western part of the island of Hispaniola

Name _____ Date _____

SOUTH AMERICA AND THE CARIBBEAN

Physical Features Puzzle

1. [] _ _ _ _ _ _ _
2. _ _ _ [] _ _ _ _ _
3. _ [] _ _ _
4. _ _ [] _ _ _ _ _
5. [] _ _ _ _ _
6. _ _ _ _ [] _ _ _ _ _ _ _
7. _ _ [] _ _ _ _ _
8. _ _ [] _ _ _ _ _ _ _ _ _
9. _ _ _ [] _ _ _
10. _ _ _ [] _ _ _ _ _ _ _ _ _
11. [] _ _ _ _ _
12. _ _ _ _ _ [] _ _ _ _
13. _ _ _ [] _ _ _ _ _ _ _
14. _ _ _ _ [] _ _ _ _ _ _ _
15. _ _ _ [] _ _ _ _ _
16. [] _ _ _ _ _ _
17. _ [] _ _ _ _ _
18. _ _ _ _ [] _ _ _ _ _ _ _
19. _ [] _ _ _ _ _ _ _ _
20. _ _ _ _ [] _ _ _ _
21. _ _ [] _ _ _ _ _

SOUTH AMERICA AND THE CARIBBEAN

Physical Features—Clues

Directions: Use each clue to help locate the physical feature described. Write the name of that feature in the spaces provided. When you finish, the boxed letters will spell a phrase related to this puzzle.

1. The islands found east of southern Argentina
2. Islands west of Ecuador
3. Major mountains found along the western side of South America
4. Lake shared by Peru and Bolivia
5. Huge river in northern Brazil
6. The point of Brazil that is the farthest northeast
7. Region south of the Colorado River in Argentina
8. Area of upland extending from Venezuela to French Guiana
9. The desert in northern Chile
10. River that flows north in Brazil and empties into the ocean south of Recife
11. River that flows east through Venezuela
12. River that forms the border between Argentina and Uruguay
13. River that flows north through Brazil and empties near Belém
14. Island east of the Falkland Islands
15. Lake in western Venezuela
16. Strait in southern South America
17. Chain of islands southeast of the Virgin Islands
18. The southern tip of South America
19. Estuary between Buenos Aires and Montevideo
20. The tallest mountain in South America
21. Highlands in southern Brazil

Name _____ Date _____

SOUTH AMERICA AND THE CARIBBEAN

Locating Features by Direction and Distance

Directions: Use the direction and distance clues to help locate the features they describe. Write the name of each feature in the space provided.

1. This nation is south of Bolivia and east of Chile. _____
2. This body of water is 800 miles north of Bogotá, Colombia.

3. This south American nation is east of Guyana and west of French Guiana.

4. This nation is 1,000 miles east of Quito, Ecuador. _____
5. This ocean is 1,500 miles east of Asunción, Paraguay. _____
6. This national capital is 700 miles west and a bit north of Buenos Aires, Argentina.

7. This body of water is 800 miles west of La Paz, Bolivia. _____
8. This capital city is about 150 miles east of Buenos Aires, Argentina.

9. This mountainous region is 500 miles northwest of São Paulo, Brazil.

10. This large lake is 100 miles northwest of La Paz, Bolivia. _____
11. This nation is 700 miles north of the capital of Uruguay. _____
12. The mouth of this major river is 400 miles southeast of Cayenne, French Guiana.

13. This nation is south of Ecuador and west of Brazil. _____
14. These mountains are 1,500 miles west of Rio de Janeiro, Brazil.

(continued)

Name _____ Date _____

SOUTH AMERICA AND THE CARIBBEAN

**Locating Features by Direction and
Distance (*continued*)**

15. This body of water is 350 miles west of Caracas, Venezuela.

16. This upland area is 200 miles south of Paramaribo, Suriname.

17. This peak, South America's highest, is about 100 miles northeast of Santiago, Chile.

18. This estuary is east of Buenos Aires, Argentina, and west of Montevideo, Uruguay.

19. These islands are about 900 miles west of Quito, Ecuador. _____

20. This nation is south of Peru and west of Argentina. _____

SOUTH AMERICA AND THE CARIBBEAN

Locating Features Using Latitude and Longitude

Directions: Use the latitude and longitude figures given to locate the feature described. Name that feature in the space provided. The term in parentheses tells what sort of feature you are locating.

- | | |
|-----------------------|--|
| 1. _____ (nation) | 10° South Latitude, 50° West Longitude |
| 2. _____ (sea) | 15° North Latitude, 70° West Longitude |
| 3. _____ (nation) | 30° South Latitude, 65° West Longitude |
| 4. _____ (river) | 34° South Latitude, 60° West Longitude |
| 5. _____ (lake) | 10° North Latitude, 73° West Longitude |
| 6. _____ (nation) | 0° Latitude, 79° West Longitude |
| 7. _____ (ocean) | 40° South Latitude, 30° West Longitude |
| 8. _____ (cape) | 5° South Latitude, 35° West Longitude |
| 9. _____ (island) | 54° South Latitude, 67° West Longitude |
| 10. _____ (nation) | 23° South Latitude, 58° West Longitude |
| 11. _____ (point) | 6° South Latitude, 82° West Longitude |
| 12. _____ (nation) | 5° North Latitude, 59° West Longitude |
| 13. _____ (estuary) | 35° South Latitude, 57° West Longitude |
| 14. _____ (grassland) | 37° South Latitude, 63° West Longitude |
| 15. _____ (nation) | 33° South Latitude, 56° West Longitude |
| 16. _____ (cape) | 55° South Latitude, 67° West Longitude |
| 17. _____ (city) | 11° North Latitude, 67° West Longitude |
| 18. _____ (city) | 18° South Latitude, 65° West Longitude |
| 19. _____ (city) | 23° South Latitude, 43° West Longitude |
| 20. _____ (city) | 34° South Latitude, 71° West Longitude |

SOUTH AMERICA AND THE CARIBBEAN

Caribbean Adventure

The Caribbean area with its islands and various cultures has become important to the people of both North and South America.

Directions: Read each statement. Decide which political or physical feature the statement describes. Write the name of that feature in the spaces provided. One letter fills each space.

1. These islands are found northeast of Cuba. _____
2. Kingston is the capital of this island nation. _____
3. This island is southeast of Cuba. _____
4. This is the sea in which the West Indies are found. _____
5. This island nation lies off the Venezuela coast. _____

6. Santo Domingo is the capital of this country. _____

7. East of the island of Martinique lies this island. _____
8. This body of water is found northwest of Cuba. _____

9. This country occupies the western part of Hispaniola. _____
10. San Juan is the capital of this island. _____
11. This chain of islands is southeast of the Virgin Islands. _____
12. This body of water is found north of San Juan. _____

13. This island is northwest of Trinidad and Tobago. _____
14. Grenada is part of a chain of islands called this. _____
15. Name the capital of Cuba. _____

(continued)

Name _____ Date _____

SOUTH AMERICA AND THE CARIBBEAN

Caribbean Adventure (*continued*)

16. These islands are found east of San Juan. _____
17. This is the largest of the Leeward Islands. _____
18. This is the largest of the Windward Islands. _____
19. Cuba, Jamaica, Hispaniola, and Puerto Rico are collectively called this.

20. The narrow waterway between Cuba and Haiti is called this.

Name _____ Date _____

SOUTH AMERICA AND THE CARIBBEAN

Review

Directions: Twenty features of South America and the Caribbean are listed below. To the right of each feature write a clue which would help others locate it. If the term were Rio Negro, for example, a clue might be: This river is found in north-western Brazil. Or: This river is a tributary of the Amazon River.

1. Lake Titicaca _____
2. Paraguay _____
3. Guiana Highlands _____
4. Caribbean Sea _____
5. Tierra del Fuego _____
6. Amazon River _____
7. Atacama Desert _____
8. Greater Antilles _____
9. Leeward Islands _____
10. Sucre _____
11. Andes Mountains _____
12. Lake Maracaibo _____
13. Quito _____
14. Uruguay _____
15. Barbados _____
16. Pampas _____
17. Río de la Plata _____
18. Brazilian Highlands _____
19. Colombia _____
20. Mount Aconcagua _____

VIII. North America

Terms for North America

Students will use the following terms as they complete the study pages in this unit.

Alabama	Colorado	Honduras
Alaska	Columbia River	Hudson Bay
Albany	Columbus	Huron, Lake
Alberta	Continental Divide	Idaho
Aleutian Islands	Costa Rica	Illinois
Allegheny River	Cuba	Indiana
Anchorage	Dallas	Indianapolis
Appalachian Mountains	Davis Strait	Iowa
Arctic Ocean	Death Valley	James Bay
Arizona	Denver	Juneau
Arkansas	District of Columbia	Kentucky
Asia	East Coast	Labrador
Atlanta	Edmonton	Los Angeles
Atlantic Ocean	El Salvador	Louisiana
Baffin Bay	Erie, Lake	Mackenzie River
Baffin Island	Everett Mountains	Maine
Banks Island	Florida	Managua
Beaufort Sea	Florida, Straits of	Manitoba
Belize	Frobisher Bay	Maryland
Bering Sea	Georgia	Massachusetts
Bering Strait	Grand Canyon	Mexico
Blue Ridge Mountains	Great Basin	Mexico, Gulf of
British Columbia	Great Bear Lake	Mexico City
Brooks Range	Great Lakes	Miami
California	Great Salt Lake	Michigan
California, Gulf of	Great Slave Lake	Michigan, Lake
Canada	Greenland	Minneapolis
Cancún	Guadalajara	Minnesota
Cape Hatteras	Guatemala	Mississippi
Champlain, Lake	Guatemala City	Mississippi River
Chesapeake Bay	Hawaii	Missouri
Cheyenne	Hawaiian Islands	Missouri River

(continued)

Terms for North America (*continued*)

Monongahela River	Ottawa	Saint John's
Montana	Ozark Plateau	Saint Lawrence, Gulf of
Montréal	Pacific Ocean	Saint Paul
Nashville	Panama	Superior, Lake
Nevada	Phoenix	Tallahassee
New England	Pittsburgh	Tegucigalpa
Newfoundland	Potomac River	Tennessee
New Hampshire	Québec	Texas
New Jersey	Raleigh	Toronto
New Mexico	Regina	Ungava Peninsula
New Orleans	Rhode Island	United States
New York	Rio Grande	Utah
Niagara Falls	Rocky Mountains	Vancouver Island
Nicaragua	Russia	Vermont
North America	Sacramento	Victoria
North Carolina	San Francisco Bay	Victoria Island
Northwest Territories	San José	Virginia
Oakland	San Salvador	Washington
Occidental	Santa Fe	Winnipeg
Ohio	Saskatchewan	Winnipeg, Lake
Ohio River	Seward	Wisconsin
Oklahoma	Sierra Madre Mountains	Wyoming
Ontario	Sierra Nevada	Yucatán
Oregon	South America	Yukon

Name _____ Date _____

NORTH AMERICA

Pretest

Directions: Answer as many questions about North America's geography as you can without using a map or an atlas. Write each answer in the space provided.

1. Which ocean is north of Canada? _____
2. What nation is Guatemala's neighbor to the north? _____
3. Which state in the United States borders both the Bering and Beaufort seas?

4. The states of Maine and Massachusetts both border which ocean? _____
5. Which North American nation holds land located west of Canada? _____
6. Which major body of water touches both Mexico and Florida? _____
7. Which nation links North and South America? _____
8. Which is the largest of the five Great Lakes? _____
9. Which nation lies north of Mexico? _____
10. In which state in the United States is Great Salt Lake located? _____
11. Which ocean is west of Mexico? _____
12. The Missouri and Ohio rivers flow into which major river? _____
13. Which nation lies between the nations of Honduras and Costa Rica?


14. What city is Canada's national capital? _____
15. Which major range of mountains runs from western Canada down through the western United States? _____
16. Which nation shares Montana's northern border? _____
17. The mouth of the Mississippi River is in which state? _____
18. Which huge bay is north of Canada's Ontario province? _____
19. Which range of United States mountains runs from Alabama to the New England states?

20. Which Canadian province is directly north of the state of Washington? _____

Name _____ Date _____

NORTH AMERICA

Political Features Puzzle



NORTH AMERICA

Political Features—Clues

Directions: Each clue below will help you find a correct answer for the Political Features Puzzle. Write the letters of each answer in the spaces provided. Make sure all answers interlock correctly.

Across

1. The province that borders Yukon and Alberta
4. Capital of Alaska
5. Large Alaskan city north of Seward
7. Province whose capital is Regina
9. Country that borders Honduras on the west
11. Province west of Quebec
13. Large city northwest of Mexico City
14. Capital of Honduras
16. Province west of Ontario
17. Province whose capital is Saint John's
18. Capital of the country bordering southern United States

Down

1. Country east of Guatemala
2. The state that lies closest to Russia
3. The territory that borders Alaska on the east
6. Country north of Nicaragua
8. Country north of the United States
10. Capital of El Salvador
12. Capital of Canada
13. Country that borders Mexico on the southwest
15. City northeast of Montréal
16. Capital of Nicaragua

Name _____ Date _____

NORTH AMERICA

Physical Features Puzzle

1. [] _ _ _ _ _ _ _
2. [] _ _ _ _ _ _ _ _ _
3. [] _ _ _ _ _ _ _
4. _ [] _ _ _ _ _ _ _ _ _
5. _ _ _ [] _ _ _ _ _ _ _ _ _
6. _ _ _ _ [] _ _ _ _ _
7. _ _ _ [] _ _ _ _ _ _ _
8. _ _ [] _ _ _ _ _
9. _ [] _ _ _ _ _
10. _ _ [] _ _ _ _ _ _ _ _ _
11. _ [] _ _ _ _ _
12. _ _ _ [] _ _ _ _ _
13. [] _ _ _ _ _ _ _ _ _
14. [] _ _ _ _ _ _ _ _ _ _
15. [] _ _ _ _ _ _ _ _ _
16. _ _ [] _ _ _ _ _
17. _ [] _ _ _ _ _ _ _
18. _ _ _ [] _ _ _ _ _ _ _
19. _ _ [] _ _
20. _ [] _ _ _ _ _ _

NORTH AMERICA

Physical Features Puzzle—Clues

Directions: Use each clue to help locate the physical feature described. Write the name of that feature in the spaces provided. When you finish, the boxed letters will spell a phrase related to this puzzle.

1. The only Great Lake that does not border Canada
2. Mountains in the eastern United States
3. Body of water that joins Hudson Bay on the south
4. Body of water north of Alaska and south of the Arctic Ocean
5. Body of water that almost cuts Maryland in two
6. The large lake found in the northern part of Northwest Territories
7. The western range of Mexico's Sierra Madre Mountains found in Mexico
8. The peninsula to which Cancún is connected
9. Peninsula in northern Québec
10. Body of water east of the Everett Mountains on Baffin Island
11. Mountains in northern Alaska
12. Island southeast of Banks Island
13. Large body of water in central Canada
14. Body of water north of Beaufort Sea
15. River that drains the interior of the United States
16. Islands in Alaska that extend toward Asia
17. Large island east of Baffin Island
18. Narrow body of water west of Greenland
19. Major mountain range in the western United States
20. Lowlands in northern Newfoundland

Name _____ Date _____

NORTH AMERICA

Locating Features by Direction and Distance

Directions: Use the direction and distance clues to help locate the features they describe. Write the name of each feature in the space provided.

1. This Canadian province is west of Saskatchewan and east of British Columbia.

2. This western state is north of Colorado and south of Montana. _____
3. This province in Canada is 900 miles north of Sacramento, California.

4. This major body of water is 300 miles south of Tallahassee, Florida.

5. This huge body of water is 800 miles east of Nashville, Tennessee.

6. This nation is west of Honduras and southeast of Guatemala. _____
7. This Great Lake is 400 miles north of Columbus, Ohio. _____
8. This state is west of Ohio and east of Illinois. _____
9. This state is 500 miles west of Atlanta, Georgia. _____
10. This large state is 400 miles west of Denver, Colorado. _____
11. This state is 625 miles east of Indianapolis, Indiana. _____
12. This nation is 300 miles east of Guatemala City, Guatemala. _____
13. This major United States river is 350 miles east of Dallas, Texas. _____
14. This state is south of Minnesota and north of Missouri. _____
15. This major lake is 550 miles north of Edmonton, Alberta. _____
16. This water body is 400 miles west of Saint John's, Newfoundland. _____
17. This nation is 400 miles north of San Salvador, El Salvador. _____
18. This large body of water is 300 miles northeast of Regina, Saskatchewan.

19. This bay is 600 miles north of Toronto, Ontario. _____
20. This state capital is 100 miles north of Denver, Colorado. _____

Repro

NORTH AMERICA

Locating Features Using Latitude and Longitude

Directions: Use the latitude and longitude figures given to locate the feature described. Name that feature in the space provided. The term in parentheses tells what sort of feature you are locating.

- | | |
|----------------------|---|
| 1. _____ (sea) | 73° North Latitude, 140° West Longitude |
| 2. _____ (nation) | 20° North Latitude, 100° West Longitude |
| 3. _____ (bay) | 72° North Latitude, 65° West Longitude |
| 4. _____ (nation) | 16° North Latitude, 90° West Longitude |
| 5. _____ (bay) | 60° North Latitude, 85° West Longitude |
| 6. _____ (island) | 71° North Latitude, 110° West Longitude |
| 7. _____ (province) | 55° North Latitude, 97° West Longitude |
| 8. _____ (nation) | 13° North Latitude, 85° West Longitude |
| 9. _____ (gulf) | 25° North Latitude, 90° West Longitude |
| 10. _____ (state) | 53° North Latitude, 84° West Longitude |
| 11. _____ (province) | 53° North Latitude, 72° West Longitude |
| 12. _____ (state) | 46° North Latitude, 69° West Longitude |
| 13. _____ (lake) | 45° North Latitude, 87° West Longitude |
| 14. _____ (ocean) | 80° North Latitude, 160° West Longitude |
| 15. _____ (state) | 36° North Latitude, 96° West Longitude |
| 16. _____ (state) | 44° North Latitude, 89° West Longitude |
| 17. _____ (city) | 10° North Latitude, 85° West Longitude |
| 18. _____ (city) | 33° North Latitude, 112° West Longitude |
| 19. _____ (city) | 50° North Latitude, 97° West Longitude |
| 20. _____ (city) | 33° North Latitude, 118° West Longitude |

NORTH AMERICA

Political Features of the United States

Directions: Read each statement. Decide which political feature the statement describes. Write the name of that feature in the spaces provided. One letter fills each space.

1. This is the largest of the fifty states. _ _ _ _ _
2. This state lies farther south than any other state. _ _ _ _ _
3. This state touches only one other state. _ _ _ _ _
4. This state borders Montana on the west. _ _ _ _ _
5. Name the city that is built on the delta of the Mississippi River.
_ _ _ _ _
6. Name the city found where the Allegheny River, Monongahela River, and the Ohio River meet. _ _ _ _ _
7. Lake Michigan divides this state into two sections. _ _ _ _ _
8. The District of Columbia was formed from land from Virginia and this state.
_ _ _ _ _
9. This city is the capital of California. _ _ _ _ _
10. The Great Basin is found in this state. _ _ _ _ _
11. The Ohio River forms this state's northern border. _ _ _ _ _
12. This large city is found near the southern tip of Florida. _ _ _ _ _
13. The Grand Canyon is found in this state. _ _ _ _ _
14. This state extends farthest north. _ _ _ _ _
15. This is the capital city of New Mexico. _ _ _ _ _
16. The lower part of the Mississippi River cuts this state into two sections.
_ _ _ _ _
17. The cities of Minneapolis and Saint Paul are found in this state. _ _ _ _ _
18. Name the capital of New York. _ _ _ _ _
19. Name the state found east of Vermont. _ _ _ _ _
20. Raleigh is the capital of this state. _ _ _ _ _

NORTH AMERICA

Physical Features of the United States

Directions: Read each statement. Decide which physical feature is described. Write the name of that feature in the space provided. Use the letters in parentheses at the end of the statement to spell your answer.

1. This major river starts in Colorado and flows through the Grand Canyon. (ACDLOOOR)

2. This is the lowest spot in the United States. (ADEHT AELLVY)

3. This waterfall is shared by the United States and Canada. (AAAGINR AFLLS)

4. This is a narrow body of water between Florida and Cuba. (AIRSSTT FO ADFILOR)

5. This cape is found off the coast of North Carolina. (AAEHRSTT)

6. This narrow body of water lies between the United States and Russia. (BEGINR AIRSTT)

7. These mountains lie between California and Nevada. (AEIRRS AADENV)

8. This river forms the border between Washington and Oregon. (ABCILMOU)

9. The Potomac River flows into this body of water. (AACEEEHKPS ABY)

10. This range of mountains is found along the East Coast. (AAAACHILNPP)

11. This major river joins the Mississippi River on the west. (IIMORSSU)

12. This highland area is shared by Arkansas and Missouri. (AKORZ AAELPTU)

13. This body of water is found near Oakland, California. (ANS ACCFINORS ABY)

(continued)

Name _____ Date _____

NORTH AMERICA

Physical Features of the United States (continued)

14. This separates the beginnings of the rivers in the western United States and is found in the Rocky Mountains. (ACEILNNNOTT DDEIIV)

15. These islands are one of the fifty states of the United States. (AAAHIIINW)

16. These mountains are found north of Anchorage. (AAAKLS) _____

17. This body of water is found in Utah. (AEGRT ALST AEKL)

18. This river separates part of the United States from Mexico. (IOR ADEGNR)

19. This body of water lies between New York and Vermont. (AEKL AACHILMNP)

20. These mountains are part of the Appalachian chain and are found in North Carolina and Virginia. (BELU DEGIR) _____

Name _____ Date _____

NORTH AMERICA

Review

Directions: Twenty features of North America are listed below. To the right of each feature, write a clue that would help others locate it. If the term were Victoria, for example, a clue might be: This is the capital city of British Columbia. Or: This is the major city on Vancouver Island.

1. Lake Erie _____
2. Columbia River _____
3. Bering Sea _____
4. Appalachian Mountains _____
5. Belize _____
6. Gulf of California _____
7. Newfoundland _____
8. Panama _____
9. Baffin Island _____
10. Yukon _____
11. Alaska _____
12. Hudson Bay _____
13. Edmonton _____
14. Mackenzie River _____
15. El Salvador _____
16. Rio Grande _____
17. Davis Strait _____
18. Rhode Island _____
19. Mexico _____
20. Gulf of Saint Lawrence _____

IX. The World in Review

Terms for the World in Review

Students will use the following terms as they complete the study pages in this unit.

Afghanistan	Galápagos Islands	Northwest Territories
Africa	Germany	North Sea
Algeria	Gobi Desert	Norway
Amazon River	Great Barrier Reef	Ottawa
Andes Mountains	Greater Antilles	Pakistan
Appalachian Mountains	Himalaya Mountains	Panama
Asia	Hudson Bay	Philippines
Atlantic Ocean	India	Québec
Australia	Indian Ocean	Rocky Mountains
Black Sea	Iraq	Romania
Brazil	Japan	Sahara Desert
Bulgaria	Jordan	Saudi Arabia
Canada	Kenya	South Africa
Caribbean Sea	Korea	South America
Caspian Sea	Lesotho	Sri Lanka
Chile	Libya	Suriname
China	London	Sweden
Cuba	Madagascar	Tasmania
Czech Republic	Manila	Tierra del Fuego
Denmark	Mediterranean Sea	Tunisia
East Coast	Mongolia	Ukraine
Ecuador	Nairobi	United Kingdom
Egypt	Netherlands	United States
Europe	New Zealand	Ural Mountains
France	Nile River	Victoria
French Guiana	North America	

THE WORLD IN REVIEW

Reviewing the World's Political Features

Directions: Read each statement. Decide which political feature the statement describes. Write the name of that feature in the spaces provided. One letter fills each space.

1. London is the capital of this country. _____
2. Lesotho is a country surrounded by this nation. _____
3. This nation borders both Sweden and the North Sea. _____
4. The Great Barrier Reef is found off the east coast of this continent. _____
5. This nation lies south of Mongolia. _____
6. This nation is found north of the United States. _____
7. This nation controls the Galápagos Islands. _____
8. This nation is located south of French Guiana and Suriname. _____
9. Sri Lanka is found south of this nation. _____
10. This nation is west of Libya and Tunisia. _____
11. Argentina and this nation share ownership of Tierra del Fuego. _____
12. This nation connects North and South America. _____
13. This nation is found southeast of Australia. _____
14. This city is the capital of Canada. _____
15. Nairobi is the capital of this country. _____
16. The capital of this country is Manila. _____
17. This nation is found between France and the Czech Republic. _____
18. This nation is found south of Jordan and Iraq. _____
19. This is the largest of the Greater Antilles. _____
20. This nation is found northwest of Pakistan. _____

THE WORLD IN REVIEW

Reviewing the World's Physical Features

Directions: Read each statement. Decide which feature is described. Write the name of that feature in the space provided. Use the letters in parentheses at the end of the statement to spell your answer.

1. This is the largest inland sea in Europe. (AACINPS) _____
2. This sea separates Europe from Africa. (AADEEEIMNNRRT)

3. This is the largest desert in Asia. (BGIO) _____
4. This is the island nation east of Korea. (AAJNP) _____
5. These mountains are the highest in the world and are found in Asia. (ASAAHILMY)

6. This river flows from mountains in southern Africa through Egypt to the sea. (EILN)

7. This large island is off Africa's southeastern coast. (AAAACDGMRS)

8. This desert is the the largest in the world and is found in Africa. (AAAHRS)

9. This mountain chain separates Europe from Asia. (ALRU) _____
10. This is the longest river found in South America. (AAMNOZ) _____
11. This body of water is south of Sri Lanka and India. (ADNNII ACENO)

12. This mountain chain is found in western South America. (ADENS)

13. This body of water separates Africa and South America. (AACILNTT ACENO)
14. ThisrangeofmountainsextendsfromwesternCanadaacrossmuchofwesternUnitedStates. (CYRKO)
15. These mountains are found along the East Coast of the United States. (AAAACHILNPP)

(continued)

Name _____ Date _____

THE WORLD IN REVIEW

Reviewing the World's Physical Features
(continued)

16. This large body of water is found between Québec and the Northwest Territories. (DHNOSU ABY)

17. This sea is found north of South America. (AABBCEINR) _____

18. This sea borders the Netherlands, Denmark, and the United Kingdom. (OHTRN)

19. Name the island state found off the coast of Victoria, Australia. (AAAIMNST)

20. This sea touches Ukraine, Romania, and Bulgaria. (CBKAL)

X. Quiz Questions: Europe



Oslo is the capital of which nation? (*Norway*)

What is the capital city of Hungary? (*Budapest*)

In which nation do you find the city of Berlin?
(*Germany*)

Amsterdam is the capital of which nation?
(*Netherlands*)

Vienna is which nation's capital? (*Austria*)

Copenhagen is the capital of which country?
(*Denmark*)

Kiev is which country's capital? (*Ukraine*)

What is the capital city of Russia? (*Moscow*)

Warsaw is the capital of which nation? (*Poland*)

What is the capital city of England in the United
Kingdom? (*London*)

What is the capital of France? (*Paris*)

Rome is the capital city of which nation? (*Italy*)

Of which nation is Athens the capital? (*Greece*)

Which is the largest nation in Europe? (*Russia*)

What is Ireland's capital city? (*Dublin*)

In which nation is the city of Brussels located?
(*Belgium*)

What is Sweden's capital? (*Stockholm*)

Bern is the capital of which nation?
(*Switzerland*)

What is Spain's capital? (*Madrid*)

Lisbon is the capital of which nation? (*Portugal*)

Political Features

More Difficult Questions

Which city is the capital of the Czech Republic?
(*Prague*)

What is the tiny nation in the Pyrenees Moun-
tains? (*Andorra*)

What is the capital of Belarus? (*Minsk*)

Ljubljana is the capital of which nation?
(*Slovenia*)

Which city is Finland's capital? (*Helsinki*)

Riga is the capital of which nation? (*Latvia*)

In which nation is the capital city of Reykjavik
located? (*Iceland*)

Which tiny nation is between Switzerland and
Austria? (*Liechtenstein*)

Which small nation borders Belgium, France,
and Germany? (*Luxembourg*)

What is the capital of Bosnia and Herzegovina?
(*Sarajevo*)

Bratislava is the capital of which nation?
(*Slovak Republic*)

Physical Features

Basic Questions

Which island nation is northwest of Ireland and the United Kingdom? (*Iceland*)

Which range of mountains runs along the border between Spain and France? (*Pyrenees*)

Which mountain range separates European Russia from Asiatic Russia? (*Ural Mountains*)

Which ocean is north of Norway and Russia? (*Arctic Ocean*)

Which ocean is west of Europe? (*Atlantic Ocean*)

Which mountains cross Switzerland? (*Alps*)

Which huge sea stretches from Spain to Greece? (*Mediterranean Sea*)

Which mountain range runs from north to south in Italy? (*Apennines*)

Which European capital city is located at 0° longitude? (*London*)

Which lines run north and south—longitude or latitude? (*longitude*)

Which lines run east and west—longitude or latitude? (*latitude*)

Which ocean borders Portugal? (*Atlantic Ocean*)

Physical Features

More Difficult Questions

Which sea borders the United Kingdom and the Netherlands? (*North Sea*)

Which large island is south of Corsica? (*Sardinia*)

In which nation are the Rhone and Seine rivers? (*France*)

Which large sea borders Ukraine and Bulgaria? (*Black Sea*)

In which nation are the Volga, Don, and Ural rivers? (*Russia*)

What large Swedish island is located in the Baltic Sea? (*Gotland*)

What is the most northern point in Norway? (*North Cape*)

Which major river flows past Hamburg, Germany? (*Elbe River*)

In which nation is the Po River found? (*Italy*)

Which strait connects the Black Sea with the Sea of Marmara? (*Bosporus*)

Which sea is east of Greece and north of the Sea of Crete? (*Aegean Sea*)

What French island is directly west of Rome, Italy? (*Corsica*)

Which range of mountains is south of the capital of Poland and east of Hungary's capital? (*Carpathians*)

Which strait is between Denmark and Norway? (*Skagerrak*)

Which sea is north of Sicily and west of Italy? (*Tyrrhenian Sea*)

Which sea is east of Iceland and west of Norway? (*Norwegian Sea*)

What is the large gulf between Sweden and Finland? (*Gulf of Bothnia*)

Which sea is north of Norway and joins the Arctic Ocean? (*Barents Sea*)

What is the sea found between the Adriatic Sea and the Mediterranean Sea? (*Ionian Sea*)

Which strait connects the Sea of Marmara and the Aegean Sea? (*Dardanelles*)

Which narrow body of water separates England in the United Kingdom from France? (*English Channel*)

Which major island is south of Greece? (*Crete*)

Which major Russian river empties into the Caspian Sea? (*Volga River*)

Which group of Mediterranean islands is east of Spain and west of Sardinia? (*Balearic Islands*)

Which river forms part of the border between Romania and Bulgaria? (*Danube River*)

What strait separates Sweden and Denmark? (*Kattegat*)

Which major island is north of Sardinia and west of Rome, Italy? (*Corsica*)

Which sea is between Italy and Albania? (*Adriatic Sea*)

Which bay is north of Spain and west of France? (*Bay of Biscay*)

Quiz Questions: Asia



Which nation stretches from the Ural Mountains to the Pacific Ocean? (*Russia*)

Kabul is capital of which nation? (*Afghanistan*)

Mongolia is located between Russia and which other nation? (*China*)

Which is the only nation that shares a border with South Korea? (*North Korea*)

What is the capital city of Japan? (*Tokyo*)

Manila is the capital of which island nation? (*Philippines*)

Which major nation separates Pakistan and Bangladesh? (*India*)

What is the capital of Vietnam? (*Hanoi*)

Which large nation borders both Mongolia and the Arctic Ocean? (*Russia*)

Tehran is capital of which nation? (*Iran*)

What is Syria's capital city? (*Damascus*)

Which nation borders both China and South Korea? (*North Korea*)

Dhaka is capital of which nation? (*Bangladesh*)

The cities of Yokohama, Osaka, and Hiroshima are all in which nation? (*Japan*)

In which nation are the cities of Bombay and Calcutta? (*India*)

What is China's capital? (*Beijing*)

Bangkok is capital of which nation in Southeast Asia? (*Thailand*)

Which nation is just east of South Korea? (*Japan*)

What is South Korea's capital city? (*Seoul*)

Islamabad is capital of which nation? (*Pakistan*)

Political Features

More Difficult Questions

Which mountainous nation lies between China and India and contains Mount Everest? (*Nepal*)

Colombo is the capital of which island nation? (*Sri Lanka*)

What is Mongolia's capital? (*Ulan Bator*)

Which nation is south of Thailand and north of Indonesia? (*Malaysia*)

What small nation in the Himalaya Mountains is just east of Nepal? (*Bhutan*)

Pyongyang is the capital of which Asian nation? (*North Korea*)

Which island nation's capital is Taipei? (*Taiwan*)

Phnom Penh is capital of which nation? (*Cambodia*)

Vladivostok is a major eastern port for which nation? (*Russia*)

The city of Shanghai is in which nation? (*China*)

Which nation lies between Turkmenistan and Pakistan? (*Afghanistan*)

Yangon is capital of which nation? (*Myanmar*) (*Burma*)

Vientiane is capital of which nation? (*Laos*)

Alma Ata is capital of which nation? (*Kazakhstan*)

What is Uzbekistan's capital city? (*Tashkent*)

Which nation is between Russia and Uzbekistan? (*Kazakhstan*)

Which nation is south of Nepal? (*India*)

Which nation is north of Vietnam? (*China*)

Physical Features

Basic Questions

Which ocean is north of Russia? (*Arctic Ocean*)

What mountain range lies between India and China? (*Himalaya Mountains*)

Which ocean is east of Japan? (*Pacific Ocean*)

Asian Russia is separated from European Russia by which range of mountains? (*Ural Mountains*)

What is the huge inland sea north of Turkey? (*Black Sea*)

Which major inland sea is north of Iran and west of Turkmenistan? (*Caspian Sea*)

What large desert is shared by China and Mongolia? (*Gobi Desert*)

Which sea separates Japan from North and South Korea? (*Sea of Japan*)

Which ocean is south of Sri Lanka? (*Indian Ocean*)

Which sea is east of Russia and west of Alaska? (*Bering Sea*)

Which sea is west of India and south of Pakistan? (*Arabian Sea*)

Which sea separates Vietnam from the Philippines? (*South China Sea*)

The islands of Honshu and Hokkaido are part of which island nation? (*Japan*)

By what name is much of northern and eastern Russia known? (*Siberia*)

The East China Sea joins which ocean? (*Pacific Ocean*)

Which major Indian river flows through Bangladesh and into the Bay of Bengal? (*Ganges River*)

The Arabian Sea joins which Ocean? (*Indian Ocean*)

What is the world's highest mountain, which is found in Nepal? (*Mount Everest*)

Thailand and Malaysia share which peninsula? (*Malay Peninsula*)

What is the highland area in China north of Nepal? (*Plateau of Tibet*)

The islands of Sumatra and Borneo are part of which nation? (*Indonesia*)

Physical Features

More Difficult Questions

Which large inland sea is on the border between Uzbekistan and Kazakhstan? (*Aral Sea*)

What is the name of the large lake found in Kazakhstan? (*Lake Balkhash*)

Which major lake is located in Russia just north of Mongolia? (*Lake Baikal*)

Which nation includes the islands of Luzon, Leyte, and Mindanao? (*Philippines*)

Which sea is north of the Philippines and south of Japan? (*Philippine Sea*)

Which sea is south of Thailand and west of Cambodia? (*Gulf of Thailand*)

Which strait separates Russia from Alaska? (*Bering Strait*)

Which sea is south of Myanmar (Burma)? (*Andaman Sea*)

Which Chinese river empties into the East China Sea just north of Shanghai? (*Yangtze River*)

Into which sea does China's Yellow River flow? (*Yellow Sea*)

Which bay is south of Bangladesh? (*Bay of Bengal*)

Which large island is north of Japan and off Russia's eastern coast? (*Sakhalin*)

Which Russian peninsula lies between the Bering Sea and the Sea of Okhotsk? (*Kamchatka Peninsula*)

The East Siberian Sea joins which ocean? (*Arctic Ocean*)

What is the peninsula in northern Russia just west of the Laptev Sea? (*Taymyr Peninsula*)

Which Russian river begins near Lake Baikal and empties into the Laptev Sea? (*Lena River*)

The Cherskiy Mountains are found in which nation? (*Russia*)

Quiz Questions: Middle East



What is the capital of Lebanon? (*Beirut*)

What nation borders Syria, Iran, and Saudi Arabia? (*Iraq*)

Of what country is Kuwait City the capital? (*Kuwait*)

Of what country is Riyadh the capital? (*Saudi Arabia*)

What is the capital of Iraq? (*Baghdad*)

In what country is Jerusalem located? (*Israel*)

What nation borders Iran, Iraq, and Syria? (*Turkey*)

Of what country is Cairo the capital? (*Egypt*)

What is the capital of Israel? (*Jerusalem*)

What is the capital of Syria? (*Damascus*)

What nation borders Turkey, Iraq, and the Persian Gulf? (*Iran*)

What nation borders Turkey, Iraq, and the Mediterranean? (*Syria*)

Of what country is Tripoli the capital? (*Libya*)

What is the capital of the United Arab Emirates? (*Abu Dhabi*)

What is the capital of Iran? (*Tehran*)

What is the capital of Egypt? (*Cairo*)

What country lies between Saudi Arabia and Israel? (*Jordan*)

Of what country is Beirut the capital? (*Lebanon*)

Of what country is Muscat the capital? (*Oman*)

Political Features

More Difficult Questions

Which island nation lies south of Turkey? (*Cyprus*)

What is the capital of Turkey? (*Ankara*)

Of what country is Sanaa the capital? (*Yemen*)

Of what island nation is Manama the capital? (*Bahrain*)

Which nation borders Iraq and Yemen? (*Saudi Arabia*)

Which nation borders Iraq and Iran as well as Greece in Europe? (*Turkey*)

What is the capital of Jordan? (*Amman*)

What is the capital of Cyprus? (*Nicosia*)

Of what nation is Abu Dhabi the capital? (*United Arab Emirates*)

Of what nation is Tehran the capital? (*Iran*)

What nation is bordered by Syria, Iraq, and Saudi Arabia? (*Jordan*)

What nation lies between Iraq and the Persian Gulf? (*Kuwait*)

What is the capital of Qatar? (*Doha*)

What nation is bordered by Saudi Arabia, the United Arab Emirates, and the Persian Gulf? (*Qatar*)

What is the capital of Oman? (*Muscat*)

What country lies south of Saudi Arabia and east of Yemen? (*Oman*)

What country is north of Israel and south of Syria? (*Lebanon*)

What country lies west of the Israeli border and the Red Sea and east of Libya? (*Egypt*)

Physical Features

Basic Questions

Which river joins the Tigris River and flows into the Persian Gulf? (*Euphrates*)

Which sea separates Saudi Arabia from Africa? (*Red Sea*)

Yemen, Oman, and Saudi Arabia are all located on which peninsula? (*Arabian Peninsula*)

What man-made waterway links the Red Sea with the Mediterranean? (*Suez Canal*)

Israel and Lebanon both border which large sea? (*Mediterranean*)

What sea lies between Jordan and Israel? (*Dead Sea*)

What sea lies south of Yemen and Oman? (*Arabian Sea*)

What is the peninsula between the Gulf of Suez and the Gulf of Aqaba? (*The Sinai Peninsula*)

What gulf is bordered by Saudi Arabia, Kuwait, and Iran? (*Persian Gulf*)

What desert stretches across much of the southern Arabian Peninsula? (*Rub' al Khali*)

What river flows through Egypt to the Mediterranean? (*Nile*)

What mountains run across northern Iran? (*Elburz Mountains*)

What major desert covers much of northern Africa? (*Sahara*)

What desert runs through eastern Egypt? (*Arabian Desert*) (*Eastern Desert*)

What desert is found in Libya? (*Libyan Desert*)

What is the largest lake in Turkey? (*Lake Van*)

What is the river into which the Tigris and the Euphrates flow? (*Shatt al Arab*)

What river runs between Jordan and Israel? (*Jordan*)

Physical Features

More Difficult Questions

Which gulf is south of Yemen and lies between the Arabian Peninsula and Somalia in Africa? (*Gulf of Aden*)

Which gulf separates Iran from Oman? (*Gulf of Oman*)

Which gulf is at the northern tip of the Red Sea and joins the Suez Canal? (*Gulf of Suez*)

What desert is shared by Syria, Iraq, Jordan, and Saudi Arabia? (*Syrian Desert*)

What is the highest peak in Turkey? (*Mount Ararat*)

What gulf separates the Sinai Peninsula from Saudi Arabia? (*Gulf of Aqaba*)

What strait separates European Istanbul from Asian Istanbul? (*Bosporus*)

What sea lies between the Bosphorus and the Dardanelles? (*Sea of Marmara*)

What desert is found in southern Israel? (*Negev*)

What is the name of the more easterly of the two rivers that flow from Turkey into the Shatt' al Arab in Iraq to the Persian Gulf? (*Tigris*)

What is the strait between the Persian Gulf and the Arabian Sea? (*Strait of Hormuz*)

What mountains run down western Iran? (*Zagros Mountains*)

What mountains are found in northern Turkey? (*Pontic Mountains*)

What mountains run across southern Turkey? (*Taurus Mountains*)

What peninsula lies between the Red Sea and the Persian Gulf? (*Arabian Peninsula*)

What strait lies at the western end of the Sea of Marmara? (*Dardanelles*)

What river flows into the Dead Sea? (*Jordan*)

In what sea are the Gulf of Suez and the Gulf of Aqaba found? (*Red Sea*)

Quiz Questions: Africa



Which is the most southern nation on the African continent? (*South Africa*)

Which nation is a huge island east of Mozambique? (*Madagascar*)

Algiers is capital of which nation? (*Algeria*)

Which nation lies between Egypt and Algeria? (*Libya*)

Pretoria is which country's capital city? (*South Africa*)

What is Egypt's capital? (*Cairo*)

In which nation are the cities of Cape Town, Durban, and Johannesburg? (*South Africa*)

Which large nation is found just south of Egypt? (*Sudan*)

Tripoli is capital of which country? (*Libya*)

What is the largest nation crossed by the Equator in central Africa? (*Zaire*)

Nairobi is which nation's capital city? (*Kenya*)

Which nation is the nearest to the European nation of Spain? (*Morocco*)

Which nation borders the Suez Canal? (*Egypt*)

What is Ethiopia's capital? (*Addis Ababa*)

Casablanca, Marrakech, and Tangier are cities in which nation? (*Morocco*)

Mogadishu is which nation's capital? (*Somalia*)

Which large nation is east of Chad and west of Ethiopia? (*Sudan*)

Which nation is across the Congo River from Zaire? (*Congo*)

Lagos is capital of which nation? (*Nigeria*)

Which nation is sometimes called Côte d'Ivoire? (*Ivory Coast*)

What is the capital of Sudan? (*Khartoum*)

Which nation is across the Mozambique Channel from Madagascar? (*Mozambique*)

Part of which African nation is in the Middle East? (*Egypt*)

Political Features

More Difficult Questions

Which African nation is the most northern? (*Tunisia*)

Libreville is the capital of which nation? (*Gabon*)

In which nation is the capital city of Accra found? (*Ghana*)

Which nation is Botswana's neighbor to the south? (*South Africa*)

Dakar is the capital of which nation? (*Senegal*)

What is Uganda's capital? (*Kampala*)

In which nation is the capital city of Kigali?
(*Rwanda*)

Which nation on the continent of Africa extends farthest east? (*Somalia*)

Which small nation shares Rwanda's southern border? (*Burundi*)

Which nation is found between Togo and Nigeria? (*Benin*)

What is Sierra Leone's capital? (*Freetown*)

Which tiny island nation lies between Madagascar and the African continent? (*Comoros*)

In which nation is the capital city of Kinshasa? (*Zaire*)

What is Angola's capital? (*Luanda*)

Niamey is which nation's capital? (*Niger*)

Which nation in western Africa is partly on the continent and partly on an island?
(*Equatorial Guinea*)

Which area in northwestern Africa is claimed by Morocco and is a neighbor of Mauritania?
(*Western Sahara*)

Dar es Salaam is which country's capital and main port? (*Tanzania*)

The capital city of Lusaka is found in which nation? (*Zambia*)

Which tiny nation in eastern Africa has the same name as that of its capital city?
(*Djibouti*)

Rabat is the capital of which nation in north Africa? (*Morocco*)

Which nation is just north of Namibia?
(*Angola*)

Brazzaville is the capital of which nation in equatorial Africa? (*Congo*)

Which nation lies between Zambia and Lake Nyasa (Lake Malawi)? (*Malawi*)

Physical Features

Basic Questions

Which sea forms Egypt's northern border?
(*Mediterranean Sea*)

Which ocean borders Senegal and Guinea?
(*Atlantic Ocean*)

Which is the only African nation that borders both the Atlantic and Indian Oceans? (*South Africa*)

Which is Africa's largest desert, located in northern Africa? (*Sahara Desert*)

Which gulf borders the nations of Nigeria and Cameroon? (*Gulf of Guinea*)

What body of water separates Madagascar from the African continent? (*Mozambique Channel*)

Kenya borders which ocean? (*Indian Ocean*)

The Nile River empties into which body of water? (*Mediterranean Sea*)

Which large, very dry area is part of Botswana?
(*Kalahari Desert*)

Uganda, Kenya, and Tanzania all border which inland body of water? (*Lake Victoria*)

What is the name of the narrow neck of water separating Morocco from Spain? (*Strait of Gibraltar*)

What is the largest island considered part of Africa? (*Madagascar*)

Which major river has tributaries called White and Blue? (*Nile River*)

Which desert is shared by Libya and Egypt and is part of the Sahara? (*Libyan Desert*)

What is the mountain range which crosses parts of Morocco and Algeria? (*Atlas Mountains*)

What is the extremely low area in northwest Egypt? (*Qattara Depression*)

What is the name of Africa's highest mountain peak found near the border between Kenya and Tanzania? (*Mount Kilimanjaro*)

What artificial waterway joins the Mediterranean Sea with the Red Sea? (*Suez Canal*)

Which large lake is on the border between Zaire and Tanzania? (*Lake Tanganyika*)

Which body of water lies between Sudan and Saudi Arabia in the Middle East? (*Red Sea*)

What is the lake bordering Malawi, Tanzania, and Mozambique? (*Lake Nyasa*) (*Lake Malawi*)

Which lake is formed by Aswan High Dam on the Nile River? (*Lake Nasser*)

The islands of São Tomé and Príncipe are in which gulf? (*Gulf of Guinea*)

What is the inland water body adjoining Niger, Chad, and Nigeria? (*Lake Chad*)

Which river helps form the boundary between southeastern Congo and western Zaire? (*Congo River*)

Tunisia borders which sea? (*Mediterranean Sea*)

The Gulf of Guinea joins which ocean? (*Atlantic Ocean*)

Which ocean borders Somalia on the east? (*Indian Ocean*)

Which desert mountains are in southeastern Algeria? (*Ahaggar Mountains*)

What is the gulf north of Somalia? (*Gulf of Aden*)

Which desert borders the Atlantic Ocean in Namibia? (*Namib Desert*)

Which river is on the border of Zambia and Zimbabwe? (*Zambezi River*)

Which gulf is on Libya's northern border? (*Gulf of Sidra*)

What is the name of the tiny island between Dar es Salaam, Tanzania, and the island of Pemba? (*Zanzibar*)

Which river forms part of the border between Namibia and South Africa? (*Orange River*)

Which desert in Egypt is found between the Nile River and the Red Sea? (*Arabian Desert*) (*Eastern Desert*)

Which island group forms a nation in the Mozambique Channel? (*Comoro Islands*)

What mountain range is found in southeastern South Africa? (*Drakensberg*)

What desert in Sudan is between the Red Sea and the Nile River? (*Nubian Desert*)

Which river crosses western Nigeria and empties into the Gulf of Guinea? (*Niger River*)

Which river forms the border between Senegal and Mauritania? (*Senegal River*)

Physical Features

More Difficult Questions

Which river forms part of the border between Botswana and South Africa? (*Limpopo River*)

Quiz Questions: Australia and the Pacific Islands

Political Features

Basic Questions

What is Australia's national capital? (*Canberra*)

Which island nation is north and northwest of Australia? (*Indonesia*)

What is the capital of New South Wales? (*Sydney*)

Which Australian state is an island? (*Tasmania*)

Which state in Australia is south of New South Wales? (*Victoria*)

What is Western Australia's capital city? (*Perth*)

Wellington is capital of which nation? (*New Zealand*)

What is the capital city of Australia's Northern Territory? (*Darwin*)

Which Australian state is west of South Australia? (*Western Australia*)

What is Victoria's capital city? (*Melbourne*)

Which state is north of New South Wales in Australia? (*Queensland*)

Hobart is capital of which Australian state? (*Tasmania*)

What is Indonesia's capital city? (*Jakarta*)

Christchurch and Auckland are cities in which nation? (*New Zealand*)

Adelaide is capital of which state? (*South Australia*)

What is Queensland's capital city? (*Brisbane*)

Which nation shares the island of New Guinea with Papua New Guinea? (*Indonesia*)

Which state is across the Murray River from Victoria? (*New South Wales*)

Which island nation is east of Tasmania? (*New Zealand*)

Which nation is the only nation on one continent? (*Australia*)

Political Features

More Difficult Questions

What city is capital of Papua New Guinea? (*Port Moresby*)

Which Pacific island nation is north of Tonga and northeast of Fiji? (*Western Samoa*)

The Loyalty Islands are east of which larger island? (*New Caledonia*)

Alice Springs and Tennant Creek are among the few towns in which political portion of Australia? (*Northern Territory*)

Fremantle, Stirling, and Kalgoorlie are cities in which state in Australia? (*Western Australia*)

Which nation is straight north of Queensland's Cape York Peninsula? (*Papua New Guinea*)

Which island nation lies east of Queensland and west of Fiji? (*Vanuatu*)

Cairns, Townsville, and Southport are cities in which state in Australia? (*Queensland*)

In which Australian state are the cities of Devenport and Launceton? (*Tasmania*)

Which state is across Bass Strait from Tasmania? (*Victoria*)

Which island nation is across the Tasman Sea from Sydney, New South Wales? (*New Zealand*)

Which nation is across the Coral Sea from Vanuatu? (*Australia*)

The Timor Sea lies between Australia and which island nation? (*Indonesia*)

Physical Features

Basic Questions

Which ocean surrounds the island nations of Fiji and Western Samoa? (*Pacific Ocean*)

Which continent is northwest of New Zealand? (*Australia*)

What massive coral growth is east of Queensland? (*Great Barrier Reef*)

The island of Java is part of which nation? (*Indonesia*)

North and South Island are both part of which nation? (*New Zealand*)

Which island is an Australian state? (*Tasmania*)

Indonesia and Papua New Guinea share which major island? (*New Guinea*)

Which ocean is west of Australia? (*Indian Ocean*)

The island of Borneo is part of which island nation? (*Indonesia*)

What is the name of the large baylike body of water just south of Western Australia and South Australia? (*Great Australian Bight*)

Which narrow body of water separates Tasmania from the continent of Australia? (*Bass Strait*)

Which sea lies between Australia and Indonesia? (*Timor Sea*)

Which sea is between Australia and Solomon Islands? (*Coral Sea*)

What is the name of the sea found between Australia and New Zealand? (*Tasman Sea*)

Which mountains are part of the Great Dividing Range and are found west of Canberra? (*Australian Alps*)

Which desert is in the northern part of Western Australia? (*Great Sandy Desert*)

The Coral Sea joins which ocean? (*Pacific Ocean*)

The island of Borneo is part of which nation? (*Indonesia*)

Which sea is west of the island nation of Vanuatu? (*Coral Sea*)

What mountain range runs along Australia's eastern coast? (*Great Dividing Range*)

In the southern part of Western Australia is which desert? (*Great Victoria Desert*)

Which ocean is joined by the Great Australian Bight? (*Indian Ocean*)

Which peninsula is at the northern tip of Queensland? (*Cape York Peninsula*)

The states of Victoria and New South Wales are separated by which river for part of their shared borders? (*Murray River*)

The Great Barrier Reef is between Australia and which sea? (*Coral Sea*)

Southwest of Alice Springs, Northern Territory, is what huge rock? (*Ayers Rock*)

Which ocean is east of New Zealand? (*Pacific Ocean*)

What treeless plain is just north of the Great Australian Bight? (*Nullarbor Plain*)

Physical Features

More Difficult Questions

Which body of water is west of Cape York Peninsula? (*Gulf of Carpentaria*)

What is the northern tip of New Zealand's North Island called? (*North Cape*)

Which larger island is just west of Loyalty Islands? (*New Caledonia*)

What is Australia's highest mountain, which is found in New South Wales? (*Mount Kosciuszko*)

What is the tiny island that is south of Jakarta, Indonesia? (*Christmas Island*)

What desert lies between Great Sandy Desert and Great Victoria Desert in Western Australia? (*Gibson Desert*)

What is the large basin found in southwestern Queensland? (*Great Artesian Basin*)

By what name is the northern tip of Cape York Peninsula known? (*Cape York*)

What cape is found at the southwestern corner of Western Australia? (*Cape Leeuwin*)

Melbourne, Victoria, is beside which bay? (*Port Phillip Bay*)

Sydney, New South Wales, is located along which bay? (*Botany Bay*)

Which strait separates Melville island from the Australian continent? (*Clarence Strait*)

What is Australia's lowest point, located in the northern part of South Australia? (*Lake Eyre*)

Which peninsula is bordered by the Great Australian Bight and Spencer Gulf? (*Eyre Peninsula*)

What is the name of the island just north of Darwin, Northern Territory? (*Melville Island*)

Which strait is between the island of New Guinea and Queensland? (*Torres Strait*)

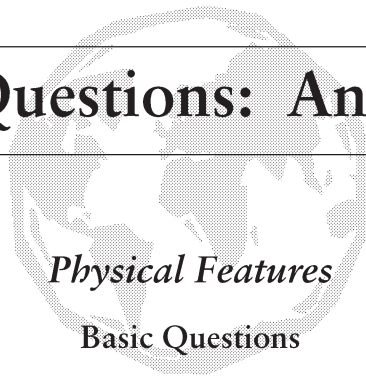
Which sea is north of the island of Java in Indonesia? (*Java Sea*)

Which strait separates New Zealand's North and South Island? (*Cook Strait*)

Which island nation is south of Western Samoa and southeast of Fiji? (*Tonga*)

Which mountains are found on New Zealand's South Island? (*Southern Alps*)

Quiz Questions: Antarctica



What is the southernmost continent? (*Antarctica*)

What is the eastern section of Antarctica called?
(*East Antarctica*)

What mountain range crosses Antarctica?
(*Transantarctic Mountains*)

What line forms the northern boundary of most
of Antarctica? (*Antarctic Circle*)

What is the highest mountain in Antarctica?
(*Vinson Massif*)

What is another name for the southern Pacific,
Atlantic, and Indian Oceans? (*Antarctic Ocean*)

What peninsula extends northward toward
South America? (*Antarctic Peninsula*)

What ice shelf covers part of the Ross Sea?
(*Ross Ice Shelf*)

What is the western part of Antarctica called?
(*West Antarctica*)

Where in Antarctica do all of the earth's longi-
tude lines meet? (*South Pole*)

What continent is north of McMurdo Sound?
(*Australia*)

Which half of Antarctica faces South America?
(*West Antarctica*)

The South Pole is in which half of Antarctica?
(*East Antarctica*)

What large sea is east of the Antarctic Penin-
sula? (*Weddell Sea*)

What Antarctic islands are closest to Cape
Horn? (*South Shetland Islands*)

What passage lies between Cape Horn and the
Antarctic Peninsula? (*Drake Passage*)

What land borders the western shore of the
Ross Sea? (*Victoria Land*)

What land in Antarctica is directly south of
Africa? (*Queen Maud Land*)

In what land is Cape Boothby found? (*Enderby
Land*)

What mountains are south of the Bellingshausen
Sea? (*Ellsworth Mountains*)

What ice shelf is on the Antarctic Peninsula?
(*Larsen Ice Shelf*)

What sea is south of the Ronne Ice Shelf?
(*Weddell Sea*)

What body of water is off the Walgreen Coast?
(*Amundsen Sea*)

What islands are east of the South Shetland
Islands? (*South Orkney Islands*)

What land is east of the American Highland and
west of Victoria Land? (*Wilkes Land*)

In what land is the Shackleton Ice Shelf found?
(*Wilkes Land*)

What mountain is located on Ross Island?
(*Mount Erebus*)

McMurdo Sound borders what sea? (*Ross Sea*)

Quiz Questions: South America

Political Features

Basic Questions

Which nation has the greatest land area?

(Brazil)

Bogotá is capital of which nation? *(Colombia)*

Which nation shares the most border with Chile? *(Argentina)*

What is Brazil's capital? *(Brasília)*

Which nation borders both Chile and Uruguay? *(Argentina)*

La Paz is the capital city of which nation? *(Bolivia)*

What is Chile's capital city? *(Santiago)*

Quito is which nation's capital city? *(Ecuador)*

Which nation shares ownership of Tierra del Fuego with Argentina? *(Chile)*

What is Venezuela's capital city? *(Caracas)*

Montevideo is the capital of which nation? *(Uruguay)*

Which nation is directly south of Guyana? *(Brazil)*

Which city is the capital of Peru? *(Lima)*

Which South American nation borders the most nations? *(Brazil)*

What is the capital of Argentina? *(Buenos Aires)*

In which nation is the city of Sucre located? *(Bolivia)*

Which nation lies west of Argentina? *(Chile)*

The city of Rio de Janeiro is in which nation?

(Brazil)

The city of Maracaibo is found in which nation? *(Venezuela)*

Which nation is directly west of Uruguay? *(Argentina)*

Which nation is located directly east of northern Bolivia? *(Brazil)*

In which nation are the cities of Recife and São Paulo? *(Brazil)*

Political Features

More Difficult Questions

What is the capital city of Guyana? *(Georgetown)*

Cayenne is the capital of which South American nation? *(French Guiana)*

Which nation has two capital cities? *(Bolivia)*

Only Chile and which other nation do not share a border with Brazil? *(Ecuador)*

Which city is Paraguay's capital? *(Asunción)*

Which nation is across the Orinoco River from Venezuela? *(Colombia)*

Which nation's capital city is Paramaribo? *(Suriname)*

Only Bolivia and which other South American nation do not border the ocean? *(Paraguay)*

Which nation lies between Guyana and Colombia? (*Venezuela*)

Which is the only South American nation that borders a nation not part of South America? (*Colombia*)

Which nation is across Rio Uruguay from Uruguay? (*Argentina*)

Which nation shares borders with Peru, Chile, and Brazil? (*Bolivia*)

The Galápagos Islands are claimed by which South American country? (*Ecuador*)

Which nation is located between Guyana and French Guiana? (*Suriname*)

Which South American nation borders both the Pacific Ocean and the Caribbean Sea? (*Colombia*)

The cities of Manaus and Belém are in which nation? (*Brazil*)

Which nation borders Peru, Colombia, and the Pacific Ocean? (*Ecuador*)

Which mountainous region runs from Venezuela to French Guiana? (*Guiana Highlands*)

What is South America's highest mountain? (*Mount Aconcagua*)

The Amazon River empties into which ocean? (*Atlantic Ocean*)

Which mountainous area is found in southern Brazil? (*Brazilian Highlands*)

What name is given to the islands at the southern tip of Chile and Argentina? (*Tierra del Fuego*)

Which British-held islands are east of southern Argentina? (*Falkland Islands*)

The Galápagos Islands are surrounded by which ocean? (*Pacific Ocean*)

Which river forms part of the boundary between Venezuela and Colombia? (*Orinoco River*)

Which ocean does Ecuador touch? (*Pacific Ocean*)

What narrow neck of water separates Tierra del Fuego from the South American continent? (*Strait of Magellan*)

Which lake in Venezuela joins the Caribbean Sea? (*Lake Maracaibo*)

What is the desert in northern Chile located between the Andes Mountains and the Pacific Ocean? (*Atacama Desert*)

Ecuador claims which group of islands? (*Galápagos Islands*)

What is the name of the mountain lake on the border between Peru and Bolivia? (*Lake Titicaca*)

The Rio Negro in Brazil is a major tributary of which river? (*Amazon River*)

Physical Features

Basic Questions

Which huge river drains northern Brazil? (*Amazon River*)

What major body of water is north of Venezuela? (*Caribbean Sea*)

Peru lies along the shore of which ocean? (*Pacific Ocean*)

Which range of mountains runs along South America's western coast? (*Andes Mountains*)

Buenos Aires, Argentina, and Montevideo, Uruguay, are on opposite sides of which estuary? (*Río de la Plata*)

What is South America's most southern point? (*Cape Horn*)

Colombia has a shore on the Caribbean Sea and another coast along which ocean? (*Pacific Ocean*)

Physical Features

More Difficult Questions

Which river forms the border between Uruguay and Argentina? (*Rio Uruguay*)

Which Brazilian cape is north of Recife along the Atlantic Ocean? (*Cape São Roque*)

Golfo de Guayaquil joins which ocean? (*Pacific Ocean*)

The Uruguay and Paraná rivers empty into which ocean? (*Atlantic Ocean*)

The mouth of which river is near Belém, Brazil? (*Amazon River*)

The Equator crosses Ecuador, Brazil and which other nation in South America? (*Colombia*)

By what name is the highland area in southern Argentina known? (*Patagonia*)

Which river flows from Brazil and across Argentina to Río de la Plata? (*Rio Paraná*)

Into which ocean does the Orinoco River flow? (*Atlantic Ocean*)

What is the name for the grassy plains of central Argentina? (*Pampas*)

What is the name for the grassy prairies in western Venezuela and eastern Colombia? (*Llanos*)

Which river in Argentina forms the northern edge of Patagonia? (*Rio Colorado*)

What is the huge plain that extends from northern Argentina and Paraguay into Bolivia? (*Gran Chaco*)

Quiz Questions: North America

Political Features

Basic Questions

Which nation borders the states of Maine and Montana? (*Canada*)

What is California's capital city? (*Sacramento*)

What is the capital of Massachusetts? (*Boston*)

Lincoln is the capital of which state? (*Nebraska*)

Which nation shares borders with the states of California and Texas? (*Mexico*)

Denver is the capital of which state? (*Colorado*)

Reno and Las Vegas are cities in which western state? (*Nevada*)

What is North Dakota's state capital? (*Bismarck*)

What is Canada's national capital? (*Ottawa*)

Lansing is the capital of which state? (*Michigan*)

What is Virginia's capital city? (*Richmond*)

What is the national capital of the United States? (*Washington, D.C.*)

Of which state is Columbus capital? (*Ohio*)

Salem is the capital of which state? (*Oregon*)

Which state lies between Mexico and the state of Oregon? (*California*)

What is Connecticut's capital city? (*Hartford*)

Which city is Nevada's state capital? (*Carson City*)

What is Oklahoma's state capital? (*Oklahoma City*)

What is Minnesota's capital? (*Saint Paul*)

Which city is the capital of West Virginia? (*Charleston*)

Which nation serves as a link between North and South America? (*Panama*)

Atlanta is the capital of which state? (*Georgia*)

Which city is the capital of Kansas? (*Topeka*)

Concord is which state's capital? (*New Hampshire*)

What is New York's capital city? (*Albany*)

Of what state is Harrisburg the capital? (*Pennsylvania*)

Which nation lies between Guatemala and the United States? (*Mexico*)

Which city is Florida's capital? (*Tallahassee*)

Frankfort is the capital of which state? (*Kentucky*)

What is New Jersey's capital? (*Trenton*)

What is the smallest state in the United States? (*Rhode Island*)

Austin is the capital of which state? (*Texas*)

Which state in the United States borders only Canada? (*Alaska*)

What is Hawaii's capital city? (*Honolulu*)

Des Moines is the capital of which state? (*Iowa*)

What is the capital city of Utah? (*Salt Lake City*)

Which state in the United States is surrounded entirely by water? (*Hawaii*)

What city is Louisiana's state capital? (*Baton Rouge*)

Santa Fe is which state's capital? (*New Mexico*)

Montpelier is the capital of which state? (*Vermont*)

Which state is separated into two parts by the Great Lakes? (*Michigan*)

What is Rhode Island's state capital? (*Providence*)

Of which state is Olympia the capital? (*Washington*)

In which state are the cities of Los Angeles and San Diego found? (*California*)

Which state is located between Canada and South Dakota? (*North Dakota*)

What is Alabama's state capital? (*Montgomery*)

Which city is the capital city of Illinois? (*Springfield*)

The cities of Miami and Tampa are in which state? (*Florida*)

In which state is the capital city of Annapolis? (*Maryland*)

Columbia is what state's capital? (*South Carolina*)

Of which state is Cheyenne the capital city? (*Wyoming*)

In which state are the cities of Houston and Dallas? (*Texas*)

Juneau is the capital of which state? (*Alaska*)

Which city is Mississippi's capital? (*Jackson*)

Madison is the capital of what state? (*Wisconsin*)

Chicago is the largest city in which state? (*Illinois*)

What is Arizona's capital city? (*Phoenix*)

Indianapolis is the capital of which state? (*Indiana*)

Which city is South Dakota's capital? (*Pierre*)

Which state is the largest in the United States? (*Alaska*)

Kansas City and St. Louis are major cities in which state? (*Missouri*)

Little Rock is which state's capital? (*Arkansas*)

Jefferson City is the capital of which state? (*Missouri*)

Nashville is the capital of which state? (*Tennessee*)

In which state are the large cities of Pittsburgh and Philadelphia? (*Pennsylvania*)

The cities of Guadalajara, Monterrey, and Tampico are in which nation? (*Mexico*)

Seattle, Tacoma, and Spokane are cities found in which state? (*Washington*)

Dover is the capital of which state? (*Delaware*)

Boise is which state's capital city? (*Idaho*)

Of which state is Augusta the capital? (*Maine*)

What is Montana's state capital? (*Helena*)

Raleigh is the capital of which state? (*North Carolina*)

Which city is Mexico's national capital? (*Mexico City*)

In which nation are the cities of Montréal, Calgary, and Vancouver? (*Canada*)

Political Features

More Difficult Questions

Which state is located between Nevada and Colorado? (*Utah*)

Which part of Canada is north of Alberta? (*Northwest Territories*)

San José is the capital of which nation? (*Costa Rica*)

Halifax is the capital for which province in Canada? (*Nova Scotia*)

What is New Brunswick province's capital? (*Fredericton*)

Which city is the capital of Guatemala? (*Guatemala City*)

Which state lies between Oklahoma and Mexico? (*Texas*)

Between Northwest Territories and the state of Alaska is which section of Canada? (*Yukon*)

What is Panama's capital city? (*Panama City*)

Between Georgia and Mississippi is which state? (*Alabama*)

Victoria is the capital of which province in Canada? (*British Columbia*)

The city of Tegucigalpa is the capital of which nation? (*Honduras*)

Which state is located between Maine and Vermont? (*New Hampshire*)

What is the capital of Alberta province in Canada? (*Edmonton*)

Whitehorse is the governmental center for which part of Canada? (*Yukon*)

Between Louisiana and Missouri is which state? (*Arkansas*)

Regina is the capital city of which Canadian province? (*Saskatchewan*)

San Salvador is which nation's capital? (*El Salvador*)

Which city is the center of government for Northwest Territories? (*Yellowknife*)

Which state lies between Wyoming and Oregon? (*Idaho*)

What is the capital city of Manitoba province? (*Winnipeg*)

Managua is the capital of which nation? (*Nicaragua*)

The capital of Ontario province is which city? (*Toronto*)

Belmopan is the capital of which nation? (*Belize*)

What is the capital city of Canada's Québec province? (*Québec*)

Saint John's is the capital of which Canadian province? (*Newfoundland*)

Charlottetown is the capital of which province in Canada? (*Prince Edward Island*)

Physical Features

Basic Questions

What is the only Great Lake entirely within the United States? (*Lake Michigan*)

Which mountain range extends from Alabama to New England? (*Appalachian Mountains*)

Which state is largely a peninsula between the Atlantic Ocean and the Gulf of Mexico? (*Florida*)

What is the highest point in North America? (*Mount McKinley*)

By what name is the broad rolling area east of the Rocky Mountains known? (*Great Plains*)

What is the name of the world's largest island? (*Greenland*)

Which river forms the border between Texas and Mexico? (*Rio Grande*)

Which river forms part of the border between the state of New York and Canada? (*Saint Lawrence River*)

What is the name of the major lake in northern Utah? (*Great Salt Lake*)

Which ocean is north of Alaska? (*Arctic Ocean*)

Which range of mountains extends from western Canada across much of the western United States? (*Rocky Mountains*)

Which huge river flows through southern Louisiana into the Gulf of Mexico? (*Mississippi River*)

The Gulf of Alaska joins which ocean? (*Pacific Ocean*)

Which cape of land is at the eastern tip of Massachusetts? (*Cape Cod*)

The Ohio River is a tributary of which river? (*Mississippi River*)

Which major river joins the Mississippi River at Saint Louis, Missouri? (*Missouri River*)

What is the name of the waterway that links the Gulf of Saint Lawrence with the Great Lakes? (*Saint Lawrence Seaway*)

What is the name of the huge canyon in Arizona formed by the Colorado River? (*Grand Canyon*)

The states of North and South Carolina are bordered by which ocean? (*Atlantic Ocean*)

Nicaragua borders which water body on its eastern coast? (*Caribbean Sea*)

Which huge bay is bordered by Manitoba, Ontario, and Québec provinces? (*Hudson Bay*)

Which ocean is joined by the Beaufort Sea? (*Arctic Ocean*)

What man-made waterway links the Pacific Ocean with the Caribbean Sea? (*Panama Canal*)

Texas and Florida border which large water body? (*Gulf of Mexico*)

The Hawaiian Islands are surrounded by which ocean? (*Pacific Ocean*)

Mexico and Louisiana both border which body of water? (*Gulf of Mexico*)

What is the sea north of Alaska and Canada's Yukon? (*Beaufort Sea*)

The Gulf of Saint Lawrence joins which ocean? (*Atlantic Ocean*)

Which sea separates southwestern Alaska from Russia? (*Bering Sea*)

Which famous Florida cape is east of the city of Orlando? (*Cape Canaveral*)

Physical Features

More Difficult Questions

The Arkansas River flows into which river? (*Mississippi River*)

What is the huge lake found in the northwest part of Canada's Northwest Territories? (*Great Bear Lake*)

Which mountain range is found north of Anchorage, Alaska? (*Alaska Range*)

Much of the border between Oregon and Washington is formed by which major river? (*Columbia River*)

Belize and Honduras both touch which gulf? (*Gulf of Honduras*)

What is the bay which extends south from Hudson Bay? (*James Bay*)

Which bay joins the Beaufort Sea and borders Canada's Yukon? (*Mackenzie Bay*)

Which water body lies between Baffin Island and Melville Peninsula in Northwest Territories? (*Foxe Basin*)

Which western river forms the border between southern California and Arizona before emptying into the Gulf of California? (*Colorado River*)

Just north of Alberta province in Northwest Territories is which huge lake? (*Great Slave Lake*)

Which gulf lies between Mexico and Baja California? (*Gulf of California*)

Which river forms the boundary between Indiana and Kentucky? (*Ohio River*)

Which gulf is bordered by the provinces of Newfoundland, Quebec, and Prince Edward Island? (*Gulf of Saint Lawrence*)

Which river flows along the border between Arkansas and Tennessee? (*Mississippi River*)

Which is the most eastern of the Great Lakes? (*Lake Ontario*)

Which mountains run along the Pacific Ocean from California to Washington? (*Coast Ranges*)

Which major Canadian river flows north across Northwest Territories to empty into Mackenzie Bay? (*Mackenzie River*)

The border between Nebraska and Iowa is formed by which river? (*Missouri River*)

Which Great Lake lies between Ohio and Canada? (*Lake Erie*)

The Sierra Nevada range of mountains is mostly in which state? (*California*)

What is the bay flowing into Davis Bay north of Baffin Island and west of Greenland? (*Baffin Bay*)

Which strait separates Québec province and Baffin Island? (*Hudson Strait*)

Which of the Great Lakes borders Minnesota? (*Lake Superior*)

Which mountains extend from northern California into British Columbia and are found east of the Coast Ranges? (*Cascade Range*)

Which gulf is between Victoria Island and the mainland of Canada's Northwest Territories? (*Amundsen Gulf*)

Which gulf is south of Anchorage and Valdez, Alaska? (*Gulf of Alaska*)

Of the five Great Lakes, which borders only Michigan and Canada? (*Lake Huron*)

Which mountains are located in northern Alaska? (*Brooks Range*)

What is the narrow strait lying between Alaska and Russia? (*Bering Strait*)

The island of Cancún, Mexico, is linked by a causeway to what peninsula? (*Yucatán Peninsula*)

What is Alaska's most northern point? (*Point Barrow*)

Which river helps form the border between North Dakota and Minnesota? (*Red River*)

What is the peninsula that extends south of California and is owned by Mexico? (*Baja California*)

What narrow water body lies between southern Florida and Cuba? (*Straits of Florida*)

What strait separates Canada's Baffin Island from Greenland? (*Davis Strait*)

Victoria, British Columbia, is on which large island? (*Vancouver Island*)

What is the most northern of the islands of Canada's Northwest Territories? (*Ellesmere Island*)

Baffin Bay, Foxe Basin, and Davis Strait all touch which huge Canadian island? (*Baffin Island*)

The Sierra Madre Occidental range is in which nation? (*Mexico*)

Seattle, Washington, is along what sound? (*Puget Sound*)

Which island chain extends southwest from Alaska? (*Aleutian Islands*)

Which bay divides the state of Maryland? (*Chesapeake Bay*)

The Mississippi Delta extends into what water body? (*Gulf of Mexico*)

Northern Québec province is on which peninsula? (*Ungava Peninsula*)

Which cape is North Carolina's most eastern point? (*Cape Hatteras*)

Coronation Gulf, Amundsen Gulf, Viscount Melville Sound, and Victoria Strait surround which Canadian island? (*Victoria Island*)

XI. Answers

Europe and Northern Asia

Pretest (page 2)

- | | | |
|-------------------|-----------------------|--------------------|
| 1. Iceland | 8. Alps | 15. Ireland |
| 2. Portugal | 9. North Sea | 16. Black Sea |
| 3. Pyrenees | 10. Italy | 17. Russia |
| 4. Ural Mountains | 11. Germany | 18. Hungary |
| 5. Arctic Ocean | 12. Belgium | 19. Atlantic Ocean |
| 6. London | 13. Mediterranean Sea | 20. Latvia |
| 7. Sweden | 14. France | |

Political Features Puzzle (page 3)

- | | | |
|-------------------|--------------------|--------------|
| <i>Across</i> | 14. Austria | 3. Estonia |
| 2. Czech Republic | 15. Norway | 4. Ljubljana |
| 4. Latvia | 16. Minsk | 5. Athens |
| 5. Andorra | 18. United Kingdom | 7. Rome |
| 6. Berlin | | 9. Dublin |
| 8. Netherlands | <i>Down</i> | 11. Tirana |
| 10. Budapest | 1. Yugoslavia | 13. Sweden |
| 12. Sofia | 2. Copenhagen | 17. Murmansk |

Physical Features Puzzle (page 5)

- | | | | |
|---------------|-----------------|---------------------|----------------------|
| 1. Gotland | 6. Adriatic Sea | 11. English Channel | 16. Ionian Sea |
| 2. North Cape | 7. Po | 12. Crimea | 17. Danube |
| 3. Loire | 8. Alps | 13. Volga | 18. Balearic Islands |
| 4. Elbe | 9. Siberia | 14. Apennines | 19. Pyrenees |
| 5. Bosphorus | 10. Black Sea | 15. Kattegat | 20. Crete |

“The European Continent” is spelled vertically.

Locating Features by Direction and Distance (page 7)

- | | | |
|------------------|-----------------|--------------------|
| 1. Bulgaria | 8. Black Sea | 15. North Sea |
| 2. Sweden | 9. Amsterdam | 16. Paris |
| 3. Moscow | 10. Corsica | 17. Sicily |
| 4. Bay of Biscay | 11. Iceland | 18. Estonia |
| 5. Adriatic Sea | 12. Apennines | 19. Baltic Sea |
| 6. Kiev | 13. Aegean Sea | 20. Ural Mountains |
| 7. Austria | 14. Carpathians | |

Locating Features Using Latitude and Longitude (page 8)

- | | | |
|----------------------|--------------------|-------------------------------|
| 1. Atlantic Ocean | 8. Black Sea | 15. Apennines |
| 2. Mediterranean Sea | 9. Spain | 16. Ukraine |
| 3. Russia | 10. Poland | 17. London, England
(U.K.) |
| 4. North Sea | 11. Ural Mountains | 18. Athens, Greece |
| 5. France | 12. Bay of Biscay | 19. Oslo, Norway |
| 6. Italy | 13. Sardinia | 20. Vilnius, Lithuania |
| 7. Sweden | 14. Romania | |

Russia and Eurasia (page 9)

- | | | |
|-----------------|--------------|-----------------|
| 1. Ukraine | 8. Amur | 15. Volga |
| 2. Belarus | 9. Sakhalin | 16. Caspian Sea |
| 3. Siberia | 10. Russia | 17. Estonia |
| 4. Turkmenistan | 11. Caucasus | 18. Kazakhstan |
| 5. Murmansk | 12. Georgia | 19. Kuril |
| 6. Lena | 13. Bering | 20. Black Sea |
| 7. Baikal | 14. Taymyr | |

Review (page 11)

Answers will vary.

Asia

Pretest (page 14)

- | | | |
|----------------|-------------|-----------------|
| 1. China | 8. Himalaya | 15. Taiwan |
| 2. Arctic | 9. Hanoi | 16. Indian |
| 3. India | 10. China | 17. Philippines |
| 4. Gobi | 11. India | 18. Afghanistan |
| 5. North Korea | 12. Arabian | 19. Bangkok |
| 6. Japan | 13. Pacific | 20. Caspian |
| 7. Russia | 14. Russia | |

Political Features Puzzle (page 15)

- | | | |
|--|--|---|
| <p style="text-align: center;"><i>Across</i></p> <p>1. Bangkok</p> <p>4. Ulan Bator</p> <p>6. Laos</p> <p>8. Kabul</p> <p>9. Japan</p> <p>11. Islamabad</p> <p>13. Macau (Macao)</p> | <p>14. Hanoi</p> <p>17. Pakistan</p> <p>18. Malaysia</p> <p style="text-align: center;"><i>Down</i></p> <p>1. Bangladesh</p> <p>2. Kuala Lumpur</p> <p>3. Turkmenistan</p> | <p>5. Afghanistan</p> <p>7. South Korea</p> <p>10. Cambodia</p> <p>11. Indonesia</p> <p>12. Thailand</p> <p>15. Russia</p> <p>16. China</p> |
|--|--|---|

Physical Features Puzzle (page 17)

- | | | |
|---------------|---------------------|-----------------|
| 1. Everest | 8. Bering Sea | 15. Arabian Sea |
| 2. Kamchatka | 9. Honshu | 16. Andaman |
| 3. Mekong | 10. Okhotsk | 17. East China |
| 4. Yellow Sea | 11. Celebes | 18. Japan |
| 5. Yangtze | 12. South China Sea | 19. Tibet |
| 6. Ryukyu | 13. Ganges | |
| 7. Bengal | 14. Arctic Ocean | |

“The Largest Continent” is spelled vertically.

Locating Features by Direction and Distance (page 19)

- | | | |
|-----------------|--------------------|---------------------|
| 1. Pakistan | 8. Altai Mountains | 15. Beijing |
| 2. Sea of Japan | 9. Bay of Bengal | 16. South China Sea |
| 3. Cambodia | 10. Afghanistan | 17. Bhutan |
| 4. Kazakhstan | 11. Tokyo | 18. Russia |
| 5. China | 12. Lake Baikal | 19. Sakhalin |
| 6. Sri Lanka | 13. Taipei | 20. Nepal |
| 7. Aral Sea | 14. Malaysia | |

Locating Features Using Latitude and Longitude (page 20)

- | | | |
|-------------|---------------------|------------------------|
| 1. Pacific | 8. South China | 15. Indian |
| 2. Arabian | 9. Himalaya | 16. Mongolia |
| 3. India | 10. Malaysia | 17. Seoul, South Korea |
| 4. Russia | 11. Altai | 18. Kabul, Afghanistan |
| 5. China | 12. Yellow | 19. Beijing, China |
| 6. Arctic | 13. Myanmar (Burma) | 20. Tokyo, Japan |
| 7. Pakistan | 14. Caspian | |

Review (page 21)

Answers will vary.

The Middle East

Pretest (page 24)

- | | | |
|-----------------|-------------------|------------------|
| 1. Beirut | 8. Turkey | 15. Saudi Arabia |
| 2. Cairo | 9. Rub' al Khali | 16. Nile |
| 3. Egypt | 10. Jordan River | 17. Tehran |
| 4. Red Sea | 11. Oman | 18. Suez Canal |
| 5. Gulf of Aden | 12. Abu Dhabi | 19. Dead Sea |
| 6. Syria | 13. Libyan Desert | 20. Sahara |
| 7. Nicosia | 14. Mediterranean | |

Political Features Puzzle (page 25)

<i>Across</i>	<i>Down</i>	
5. United Arab Emirates	1. Saudi Arabia	9. Qatar
7. Jordan	2. Lebanon	12. Iran
10. Mecca	3. Jerusalem	13. Tehran
11. Israel	4. Bahrain	15. Kuwait
14. Baghdad	6. Syria	16. Cyprus
17. Kuwait City	8. Muscat	18. Yemen
19. Turkey		
20. Damascus		

Physical Features Puzzle (page 28)

1. Suez Canal	8. Gulf of Aqaba	15. Hormuz
2. Sea of Marmara	9. Pontic	16. Shatt al Arab
3. Mount Ararat	10. Arabian Sea	17. Euphrates
4. Red Sea	11. Lake Van	18. Sinai
5. Dardanelles	12. Libyan	19. Gulf of Oman
6. Nile	13. Elburz	20. Persian Gulf
7. Bosphorus	14. Tigris	

Boxed letters spell “Cradle of Civilization.”

Locating Features by Direction and Distance (page 29)

1. Tripoli	8. Negev	15. Riyadh
2. Amman	9. Taurus Mountains	16. Yemen
3. Ankara	10. Sanaa	17. Cyprus
4. Kuwait	11. Israel	18. Lake Van
5. Libya	12. Gulf of Suez	19. Persian Gulf
6. Mecca	13. Manama	20. United Arab Emirates
7. Doha	14. Iraq	

Locating Features Using Latitude and Longitude (page 30)

- | | | |
|---------------------|-------------|-------------|
| 1. Mount Ararat | 8. Negev | 15. Bahrain |
| 2. Dardanelles | 9. Mecca | 16. Marmara |
| 3. Dead Sea | 10. Libya | 17. Jordan |
| 4. Zagros Mountains | 11. Doha | 18. Syria |
| 5. Muscat | 12. Baghdad | 19. Beirut |
| 6. Suez Canal | 13. Sanaa | 20. Riyadh |
| 7. Shatt al Arab | 14. Qatar | |

Review (page 31)

Answers will vary.

Africa

Pretest (page 34)

- | | | |
|-------------------|-------------------------|-----------------------|
| 1. Atlantic Ocean | 8. Cape of Good Hope | 15. Tunisia |
| 2. Madagascar | 9. Congo River | 16. Mediterranean Sea |
| 3. Libya | 10. Indian Ocean | 17. Nile River |
| 4. Lake Victoria | 11. Suez Canal | 18. Zaire |
| 5. Ethiopia | 12. Khartoum | 19. Kenya |
| 6. Egypt | 13. Sahara Desert | 20. South Africa |
| 7. Red Sea | 14. Strait of Gibraltar | |

Political Features Puzzle (page 35)

Across

- | | | |
|------------------|------------------|----------------|
| 1. Djibouti | 13. Nairobi | 3. Eritrea |
| 3. Ethiopia | 15. Zimbabwe | 4. Ivory Coast |
| 5. Guinea-Bissau | 16. Nigeria | 7. Benin |
| 6. Swaziland | 17. South Africa | 10. Rwanda |
| 8. Mali | | 11. Gabon |
| 9. Liberia | | 14. Burundi |
| 12. Tunis | | 15. Zaire |

Down

1. Dar es Salaam
2. Tanzania

**Physical Features Puzzle
(page 37)**

- | | | |
|----------------------|-------------------|--------------|
| 1. Mozambique | 8. Limpopo | 15. Kalahari |
| 2. Tanganyika | 9. Gulf of Guinea | 16. Namib |
| 3. Drakensberg | 10. Sahara | 17. Zambezi |
| 4. Gibraltar | 11. Indian Ocean | 18. Orange |
| 5. Mediterranean Sea | 12. Congo | 19. Atlas |
| 6. Ahaggar | 13. Blue Nile | |
| 7. Victoria | 14. Qattara | |

“Mysterious Continent” is spelled vertically.

**Locating Features by Direction and
Distance (page 39)**

- | | | |
|--------------------|---------------------------------|---------------------|
| 1. Libya | 8. Mozambique Channel | 14. Kalahari Desert |
| 2. Lake Tanganyika | 9. Sudan | 15. Indian Ocean |
| 3. Madagascar | 10. Atlas Mountains | 16. Chad |
| 4. Botswana | 11. Lake Nyasa (Lake
Malawi) | 17. Benin |
| 5. Tunis | 12. Tripoli | 18. Senegal |
| 6. Sahara Desert | 13. Lake Victoria | 19. Namib Desert |
| 7. Atlantic Ocean | | 20. Uganda |

**Locating Features Using Latitude and
Longitude (page 40)**

- | | | |
|---------------|-----------------|----------------------------|
| 1. Rwanda | 8. Red | 15. Mauritania |
| 2. Algeria | 9. Indian | 16. Zimbabwe |
| 3. Victoria | 10. Arabian | 17. Cairo, Egypt |
| 4. Sahara | 11. Botswana | 18. Mogadishu, Somalia |
| 5. Liberia | 12. Kilimanjaro | 19. Pretoria, South Africa |
| 6. Madagascar | 13. Zambia | 20. Dakar, Senegal |
| 7. Gabon | 14. Chad | |

Review (page 41)

Answers will vary.

Australia and the Pacific Islands

Pretest (page 44)

- | | | |
|-------------------------|------------------------|---------------------|
| 1. Indian Ocean | 8. Victoria | 15. Jakarta |
| 2. Tasmania | 9. Indonesia | 16. Indian Ocean |
| 3. New Zealand | 10. Great Barrier Reef | 17. Australian Alps |
| 4. Pacific Ocean | 11. Western Australia | 18. Brisbane |
| 5. Australia | 12. Sydney | 19. Wellington |
| 6. Canberra | 13. Coral Sea | 20. New Guinea |
| 7. Great Dividing Range | 14. Pacific Ocean | |

Political Features Puzzle (page 45)

- | | | |
|--|--|--|
| <p style="text-align: center;"><i>Across</i></p> <p>1. Adelaide</p> <p>3. Brisbane</p> <p>6. Darwin</p> <p>9. Townsville</p> <p>15. South Australia</p> <p>16. Cairns</p> <p>17. Western Australia</p> | <p>18. Sydney</p> <p>19. Tasmania</p> <p>20. Midway</p> <p style="text-align: center;"><i>Down</i></p> <p>1. Alice Springs</p> <p>2. Indonesia</p> <p>4. Broken Hill</p> | <p>5. Northern Territory</p> <p>7. New South Wales</p> <p>8. Melbourne</p> <p>10. Victoria</p> <p>11. Hobart</p> <p>12. Queensland</p> <p>13. Perth</p> <p>14. Canberra</p> <p>18. Society</p> |
|--|--|--|

Physical Features Puzzle (page 47)

- | | | |
|---------------------------|-------------------------|------------------|
| 1. Great Australian Bight | 8. Great Dividing Range | 15. Leeuwin |
| 2. Arnhem Land | 9. Carpentaria | 16. Clarence |
| 3. Wake | 10. Eyre | 17. Arafura Sea |
| 4. Kosciusko | 11. Australian Alps | 18. Tasman Sea |
| 5. Timor Sea | 12. Bass Strait | 19. Darling |
| 6. Nullarbor | 13. Indian Ocean | 20. Barrier Reef |
| 7. Great Artesian | 14. Great Victoria | 21. Murray |

“The Continent Down Under” is spelled vertically.

Locating Features by Direction and Distance (page 49)

- | | | |
|------------------------|---------------------|----------------------------|
| 1. New South Wales | 8. Queensland | 15. Lord Howe Islands |
| 2. Cape York Peninsula | 9. Tasmania | 16. New Caledonia |
| 3. Timor Sea | 10. New Guinea | 17. Perth |
| 4. Tasman Sea | 11. Adelaide | 18. Great Australian Bight |
| 5. South Island | 12. Bass Strait | 19. Arafura Sea |
| 6. Sydney | 13. Solomon Islands | 20. Australia |
| 7. Coral Sea | 14. Fiji | |

Locating Features Using Latitude and Longitude (page 51)

- | | | |
|----------------|-------------------|---------------------------------------|
| 1. Tahiti | 8. Melville | 15. Kimberley |
| 2. Bass | 9. Ayers Rock | 16. Botany |
| 3. Carpentaria | 10. Western Samoa | 17. Alice Springs, Northern Territory |
| 4. Capricorn | 11. Coral | 18. Melbourne, Victoria |
| 5. Kangaroo | 12. North | 19. Hobart, Tasmania |
| 6. Cape York | 13. Murray | 20. Perth, Western Australia |
| 7. Mount Cook | 14. Great Sandy | |

All at Sea: The Pacific Islands (page 52)

- | | | |
|------------------|--------------|---------------|
| 1. Caroline | 8. Mariana | 15. Lord Howe |
| 2. Solomon | 9. Pitcairn | 16. Bounty |
| 3. New Britain | 10. Midway | 17. Guam |
| 4. New Caledonia | 11. Wake | 18. Stewart |
| 5. Kermadec | 12. Marshall | 19. Christmas |
| 6. Vanuatu | 13. Cook | 20. Marquesas |
| 7. Fiji | 14. Society | |

Review (page 53)

Answers will vary.

Antarctica

Pretest (page 56)

- | | | |
|---------------------------|-------------------------|----------------------|
| 1. Antarctica | 7. Transantarctic Moun- | 12. South Pole |
| 2. South Shetland Islands | tains | 13. Antarctic Circle |
| 3. East Antarctica and | 8. Ross Sea and Weddell | 14. Ross Ice Shelf |
| West Antarctica | Sea | 15. Victoria Land |
| 4. East Antarctica | 9. Vinson Massif | 16. Drake Passage |
| 5. West Antarctica | 10. Antarctic Peninsula | 17. Australia |
| 6. East Antarctica | 11. Antarctic Ocean | 18. Queen Maud Land |

Physical Features Puzzle (page 57)

Across

- | | | |
|------------------------|------------------------|---------------------|
| 1. Amundsen Sea | 12. Drake | 3. Weddell Sea |
| 3. Wilkes Land | 13. Adare | 4. Larsen Ice Shelf |
| 6. Walgreen | | 5. Enderby Land |
| 8. Ross Sea | | 7. Antarctica |
| 10. Bellingshausen Sea | 2. Ellsworth Mountains | 9. South Pole |
| 11. Vinson Massif | | |

Down

Locating Features by Direction and Distance (page 59)

- | | | |
|---------------------------|--------------------|--------------------------|
| 1. Shackleton Ice Shelf | 6. Ross Island | 11. American Highland |
| 2. South Orkney Islands | 7. Mount Erebus | 12. Antarctic Peninsula |
| 3. Vinson Massif | 8. Lambert Glacier | 13. Transantarctic Moun- |
| 4. South Shetland Islands | 9. Queen Maud Land | tains |
| 5. Victoria Land | 10. South Pole | 14. Wilkes Land |

Locating Features Using Latitude and Longitude (page 60)

- | | | |
|---------------------------|----------------------|--------------------------|
| 1. South Shetland Islands | 6. Adelaide Island | 11. Bellingshausen Sea |
| 2. Cape Adare | 7. Cape Boothby | 12. South Orkney Islands |
| 3. Amundsen Sea | 8. Mount Erebus | 13. Ellsworth Mountains |
| 4. McMurdo Station | 9. McMurdo Sound | 14. Shackleton Ice Shelf |
| 5. Vinson Massif | 10. Larsen Ice Shelf | 15. Antarctic Circle |

Land of Adventure (page 61)

- | | | |
|------------------|--------------------|-------------------------|
| 1. Drake Passage | 8. Wilkes | 15. Bellingshausen |
| 2. Amundsen Sea | 9. Ross Ice Shelf | 16. Weddell Sea |
| 3. Victoria | 10. Ronne | 17. Queen Maud |
| 4. Marie Byrd | 11. South Shetland | 18. Antarctic Peninsula |
| 5. Ross Sea | 12. Enderby | 19. Adelaide |
| 6. American | 13. South Orkney | 20. Larsen |
| 7. Ellsworth | 14. Vinson Massif | |

Review (page 63)

Answers will vary.

South America and the Caribbean

Pretest (page 66)

- | | | |
|--------------------|-------------------|------------------------|
| 1. Brazil | 8. Cape Horn | 15. Argentina |
| 2. Pacific Ocean | 9. Colombia | 16. Brazil |
| 3. Argentina | 10. Brasília | 17. Colombia |
| 4. Bolivia | 11. Caribbean Sea | 18. Atacama Desert |
| 5. Atlantic Ocean | 12. Venezuela | 19. Argentina |
| 6. Andes Mountains | 13. Gran Chaco | 20. Strait of Magellan |
| 7. Amazon River | 14. Lima | |

Political Features Puzzle (page 67)

Across	14. Guayaquil	3. Bogotá
1. Paramaribo	17. Maracaibo	4. Asunción
3. Bolivia	18. Valparaíso	5. Rio de Janeiro
5. Recife	19. Puerto Rico	9. Argentina
6. Santiago		11. Manaus
7. Uruguay	Down	13. Quito
8. Ecuador	1. Peru	15. Lima
10. Colombia	2. Brazil	16. Haiti
12. Georgetown		

Physical Features Puzzle (page 69)

1. Falkland	8. Guiana Highlands	15. Maracaibo
2. Galápagos	9. Atacama	16. Magellan
3. Andes	10. Rio São Francisco	17. Leeward
4. Titicaca	11. Orinoco	18. Tierra del Fuego
5. Amazon	12. Rio Uruguay	19. Río de la Plata
6. Cape São Roque	13. Rio Tocantins	20. Aconcagua
7. Patagonia	14. South Georgia	21. Brazilian

“Fantastic South America” is spelled vertically.

Locating Features by Direction and Distance (page 71)

1. Argentina	8. Montevideo	15. Lake Maracaibo
2. Caribbean Sea	9. Brazilian Highlands	16. Guiana Highlands
3. Suriname	10. Lake Titicaca	17. Mount Aconcagua
4. Brazil	11. Paraguay	18. Río de la Plata
5. Atlantic Ocean	12. Amazon River	19. Galápagos Islands
6. Santiago	13. Peru	20. Chile
7. Pacific Ocean	14. Andes Mountains	

Locating Features Using Latitude and Longitude (page 73)

- | | | |
|-------------------|---------------------|----------------------------|
| 1. Brazil | 8. Cape São Roque | 15. Uruguay |
| 2. Caribbean Sea | 9. Tierra del Fuego | 16. Cape Horn |
| 3. Argentina | 10. Paraguay | 17. Caracas, Venezuela |
| 4. Paraná | 11. Point Aguja | 18. Sucre, Bolivia |
| 5. Lake Maracaibo | 12. Guyana | 19. Rio de Janeiro, Brazil |
| 6. Ecuador | 13. Río de la Plata | 20. Santiago, Chile |
| 7. Atlantic Ocean | 14. Pampas | |

Caribbean Adventure (page 74)

- | | | |
|------------------------|--------------------|----------------------|
| 1. Bahamas | 8. Gulf of Mexico | 15. Havana |
| 2. Jamaica | 9. Haiti | 16. Virgin |
| 3. Hispaniola | 10. Puerto Rico | 17. Guadeloupe |
| 4. Caribbean | 11. Leeward | 18. Martinique |
| 5. Trinidad and Tobago | 12. Atlantic Ocean | 19. Greater Antilles |
| 6. Dominican Republic | 13. Grenada | 20. Windward Passage |
| 7. Barbados | 14. Windward | |

Review (page 76)

Answers will vary.

North America

Pretest (page 79)

- | | | |
|-------------------|-----------------------|---------------------------|
| 1. Arctic Ocean | 8. Lake Superior | 15. Rocky Mountains |
| 2. Mexico | 9. United States | 16. Canada |
| 3. Alaska | 10. Utah | 17. Louisiana |
| 4. Atlantic Ocean | 11. Pacific Ocean | 18. Hudson Bay |
| 5. United States | 12. Mississippi River | 19. Appalachian Mountains |
| 6. Gulf of Mexico | 13. Nicaragua | 20. British Columbia |
| 7. Panama | 14. Ottawa | |

Political Features Puzzle (page 80)

<i>Across</i>		
1. British Columbia	16. Manitoba	10. San Salvador
4. Juneau	17. Newfoundland	12. Ottawa
5. Anchorage	18. Mexico City	13. Guatemala
7. Saskatchewan		15. Québec
9. El Salvador	<i>Down</i>	16. Managua
11. Ontario	1. Belize	
13. Guadalajara	2. Alaska	
14. Tegucigalpa	3. Yukon	
	6. Honduras	
	8. Canada	

Physical Features Puzzle (page 82)

1. Michigan	8. Yucatán	15. Mississippi
2. Appalachian	9. Ungava	16. Aleutian
3. James Bay	10. Frobisher Bay	17. Greenland
4. Beaufort Sea	11. Brooks	18. Davis Strait
5. Chesapeake Bay	12. Victoria	19. Rocky
6. Great Bear	13. Hudson Bay	20. Labrador
7. Occidental	14. Arctic Ocean	

“Majestic North America” is spelled vertically.

Locating Features by Direction and Distance (page 84)

1. Alberta	8. Indiana	15. Great Slave Lake
2. Wyoming	9. Arkansas	16. Gulf of Saint Lawrence
3. British Columbia	10. Utah	17. Mexico
4. Gulf of Mexico	11. New Jersey	18. Lake Winnipeg
5. Atlantic Ocean	12. Honduras	19. James Bay
6. El Salvador	13. Mississippi River	20. Cheyenne, Wyoming
7. Lake Huron	14. Iowa	

Locating Features Using Latitude and Longitude (page 85)

- | | | |
|--------------------|-------------------|-----------------------------|
| 1. Beaufort Sea | 8. Nicaragua | 15. Oklahoma |
| 2. Mexico | 9. Gulf of Mexico | 16. Wisconsin |
| 3. Baffin Bay | 10. Georgia | 17. San José, Costa Rica |
| 4. Guatemala | 11. Québec | 18. Phoenix, Arizona |
| 5. Hudson Bay | 12. Maine | 19. Winnipeg, Manitoba |
| 6. Victoria Island | 13. Lake Michigan | 20. Los Angeles, California |
| 7. Manitoba | 14. Arctic Ocean | |

Political Features of the United States (page 86)

- | | | |
|----------------|---------------|--------------------|
| 1. Alaska | 8. Maryland | 15. Santa Fe |
| 2. Hawaii | 9. Sacramento | 16. Louisiana |
| 3. Maine | 10. Nevada | 17. Minnesota |
| 4. Idaho | 11. Kentucky | 18. Albany |
| 5. New Orleans | 12. Miami | 19. New Hampshire |
| 6. Pittsburgh | 13. Arizona | 20. North Carolina |
| 7. Michigan | 14. Alaska | |

Physical Features of the United States (page 87)

- | | | |
|-----------------------|------------------------|---------------------|
| 1. Colorado | 8. Columbia | 15. Hawaiian |
| 2. Death Valley | 9. Chesapeake Bay | 16. Alaska |
| 3. Niagara Falls | 10. Appalachian | 17. Great Salt Lake |
| 4. Straits of Florida | 11. Missouri | 18. Rio Grande |
| 5. Hatteras | 12. Ozark Plateau | 19. Lake Champlain |
| 6. Bering Strait | 13. San Francisco Bay | 20. Blue Ridge |
| 7. Sierra Nevada | 14. Continental Divide | |

Review (page 89)

Answers will vary.

The World in Review

Reviewing the World's Political Features (page 92)

- | | | |
|-------------------|-----------------|------------------|
| 1. United Kingdom | 8. Brazil | 15. Kenya |
| 2. South Africa | 9. India | 16. Philippines |
| 3. Norway | 10. Algeria | 17. Germany |
| 4. Australia | 11. Chile | 18. Saudi Arabia |
| 5. China | 12. Panama | 19. Cuba |
| 6. Canada | 13. New Zealand | 20. Afghanistan |
| 7. Ecuador | 14. Ottawa | |

Reviewing the World's Physical Features (page 93)

- | | | |
|------------------|--------------------|-----------------|
| 1. Caspian | 8. Sahara | 15. Appalachian |
| 2. Mediterranean | 9. Ural | 16. Hudson Bay |
| 3. Gobi | 10. Amazon | 17. Caribbean |
| 4. Japan | 11. Indian Ocean | 18. North |
| 5. Himalayas | 12. Andes | 19. Tasmania |
| 6. Nile | 13. Atlantic Ocean | 20. Black |
| 7. Madagascar | 14. Rocky | |